

## Criteria 2: Teaching, Learning and Evaluation

2.5.1 CA1, CA2, MSE sample question paper, result analysis, marks sheet (filled DBATU portal), sample answer sheet/ summary of online examination, snap of students portal showing internal marks

### INDEX

Sr. No.	Particulars	Page no.
1	CA1,CA2,MSE sample question paper	2, 8, ,13,16, 77, 86 , 129, 143, 166
2	DBATU marks filled on portal	29, 91, 168, 180
3	Sample Answer sheet	44, 72, 150
4	Student portal showing marks	60



DR. BABASAHEB AMBEDKAR TECHNICAL UNIVERSITY, LONERE.

Sanjeevan Engineering & Technology Institute, Panhala

Department of Mechanical Engineering

CA-I



SEMESTER: III

ACADEMIC YEAR: 2021-22

NAME OF STUDENT:

ROLL No.:

CLASS: S.Y. B.Tech

MARKS: 10

DAY & DATE : Monday, 06/12/2021

SUBJECT: Fluid Mechanics (BTME303)


### INSTRUCTIONS:

1. All questions are compulsory.
2. Q. No. 1 to 6 are objective (1 marks each) and Q. No. 7 & 8 are descriptive (2 marks each)
3. Circle on the correct answer for objective questions. Multiple circles or ticks are not allowed and considered as zero marks.

Q. No.	Questions	Examiner Marks
1.	The specific gravity of a liquid has (a) the same unit as that of mass density (b) the same unit as that of weight density (c) the same unit as that of specific volume (d) no unit .	
2.	Which one of the following is the CGS unit of dynamic viscosity? (a) Stokes (b) Pa-s (c) $m^2/s$ (d) Poise	
3.	The specific volume of a liquid is the reciprocal of (a) weight density (b) mass density (c) specific weight (d) specific volume	
4.	If a person studies about a fluid which is at rest, what will you call his domain of study? (a) Fluid Mechanics (b) Fluid Statics (c) Fluid Kinematics (d) Fluid Dynamics	
5.	The value of the surface tension of an ideal fluid is (a) zero (b) unity (c) infinity (d) more than that of a real fluid	
6.	In liquids in order to measure the viscosity of fluid experimentally we consider the variation of shear stress with respect to what property? (a) strain (b) shear strain (c) rate of shear strain (d) none of the mentioned	

7. Define the terms : (i) Weight Density (ii) Bulk modulus.

8. Define Viscosity and write its SI and CGS unit.

	DR. BABASAHEB AMBEDKAR TECHNICAL UNIVERSITY, LONERE.	
	Sanjeevan Engineering & Technology Institute, Panhala	
	Department of Mechanical Engineering	
	CA-I	
	SEMESTER:V	ACADEMIC YEAR:2021-22
	NAME OF STUDENT:	ROLL NO.:
	CLASS: T.Y. Mechanical	MARKS: 10
	DAY & DATE : Tuesday, 21/10/2021	
	SUBJECT: Metrology & Quality Control (BTMEC505)	

### INSTRUCTIONS:

1. All questions are compulsory.
2. Q.No. 1 to Q. No. 6 are objective (1marks each) and Q.No. 7 & Q.No. 8 are descriptive (2 marks each)
3. Circle on the correct answer for objective questions. Multiple circles or ticks are not allowed and considered as zero mark.

Q. No.	Questions	Examiner Marks
1.	Which of the following is the most suitable for wavelength standard? a) Cadmium 114                                      b) Krypton 86 c) Mercury 198                                        d) Any monochromatic light	
2.	By which material metre (line standard) bar is made of? a) Bronze    b) Platinum c) Platinum-bronze alloy                          d) Platinum-iridium alloy	
3.	From which category 'Solex Pneumatic Comparator' belongs? a) Optical comparator                              b) Mechanical comparator c) Mechanical-optical comparator              d) Pneumatic comparator	
4.	Error of measurement = a) True value – Measured value                b) Precision – True value c) Measured value – Precision                  d) None of the above	
5.	Which of the following is incorrect regarding sine bars? a) Sine bar is itself a complete measuring instrument b) Some holes are drilled in the body c) It can be used to locate any work to a given angle d) None of the above	
6.	The following is not used to measure angles a) Bevel protectors                                    b) Sine Bar c) Clinometers                                         d) Optical flats	

Q. No.	Questions	Examiner Marks
7.	<p>Que: Define Comparator &amp; State uses of comparator in inspection</p>	
8.	<p>Que: On which principal sine bar works? Write the formula along with diagram to measure the angle with the help of sine bar.</p>	

\*\*\*\*\* END \*\*\*\*\*



DR. BABASAHEB AMBEDKAR TECHNICAL UNIVERSITY, LONERE.

Sanjeevan Engineering & Technology Institute, Panhala

Department of Mechanical Engineering

CA-I

SEMESTER: VII

ACADEMIC YEAR: 2021-22

NAME OF STUDENT:

ROLL No.:

CLASS: Final Year B Tech

MARKS: 10

DAY & DATE : Thursday, 21/10/2021

SUBJECT: Wind Energy



## INSTRUCTIONS:

1. All questions are compulsory.
2. Q.No. 1 to Q. No. 6 are objective (1 mark each) and Q.No. 7 & Q.No. 8 are descriptive (2 marks each)
3. Circle on the correct answer for objective questions. Multiple circles or ticks are not allowed and considered as zero mark.

Q. No.	Questions	Examiner Marks
1.	<b>Wind energy is..... types energy</b> A. Renewable energy B. Non renewable energy C. Can't say	
2.	<b>What is main source for generation of wind ?</b> A. Sun B. Uneven land C. Rain D. Season	
3.	<b>Wind turbine blades have ..... Types cross section for to extract energy from wind.</b> A. Elliptical B. Rectangular C. Aerofoil D. All of these	
4.	<b>The Nacelle of windmill houses</b> A. Generator B. Gear box C. Brakes D. All of these	
5.	<b>Wind speed is measure by using ..... Instrument</b> A. Manometer B. Pyranometer C. Anemometer D. Orifice	
6.	<b>Wind intensity can be described by.....</b> A. Mach number B. Froude number C. Reynolds number D. Beaufort number	





Q. No.	Questions	Examiner Marks
7.	<p>What is wind energy and its types?</p> <p>Ans:</p>	
8.	<p>Give some important factor consider for side selection of WECS</p> <p>Ans:</p>	

\*\*\*\*\* END \*\*\*\*\*

DR. BABASAHEB AMBEDKAR TECHNOLOGICAL UNIVERSITY, LONERE		
Mid Semester Examination – Jan.2022		
Course: S.Y. B. Tech in Mechanical Engineering	Sem: III	
Subject Name: Thermodynamics	Subject Code: BTMEC305	
Max Marks: 20	Date:- 10/01/2022	Time: 12 PM to 01 PM
Instructions to the Students:		
1. All questions are compulsory 2. Assume suitable data if necessary 3. Use of non-programmable calculator is allowed		
		Marks
<b>Q. 1</b>	<b>Attempt following Questions</b>	<b>6</b>
	<b>1. A control volume refers to</b> (a) a fixed region in space (b) a specified mass (c) an isolated system (d) a reversible process only	
	<b>2. A reversible process requires that</b> (a) there be no heat transfer (b) newton's law of viscosity be satisfied (c) temperature of system and surroundings be equal (d) there be no viscous or coulomb friction in the system	
	<b>3. The first law of thermodynamics for steady flow</b> (a) accounts for all energy entering and leaving a control volume (b) is an energy balance for a specified mass of fluid (c) is an expression of the conservation of linear momentum (d) is primarily concerned with heat transfer	
	<b>4. In a Carnot engine, when the working substance gives heat to the sink</b> (a) the temperature of the sink increases (b) the temperature of the sink remains the same (c) the temperature of the source decreases (d) the temperatures of both the sink and the source decrease	
	<b>5. The efficiency of an ideal Carnot engine depends on</b> (a) working substance (b) on the temperature of the source only (c) the temperature of the sink only (d) the temperatures of both the source and the sink	
	<b>6. Which of the following is the correct statement?</b> (a) All the reversible engines have the same efficiency (b) All the reversible and irreversible engines have the same efficiency (c) Irreversible engines have maximum efficiency (d) All engines are designed as reversible in order to obtain maximum efficiency.	
<b>Q.2</b>	<b>Solve the following</b>	<b>3 x 2</b>
(A)	What do you mean by "Perpetual motion machine of first kind-PMM 1 and Perpetual motion machine of second kind-PMM2?"	
(B)	Define heat engine, refrigerator and heat pump.	
<b>Q. 3</b>	A reversible heat engine operates between two reservoirs at temperatures of $600^{\circ}\text{C}$ and $40^{\circ}\text{C}$ . The engine drives a reversible refrigerator which operates between reservoirs at temperatures of $40^{\circ}\text{C}$ and $-20^{\circ}\text{C}$ . The heat transfer to the heat engine is 2000kJ and the net work output of the combined engine transfer plant is 360kJ. (a) Evaluate the heat transfer to the refrigerant and the net heat transfer to the reservoir at $40^{\circ}\text{C}$ . (b) Reconsider (a) given that the efficiency of the heat engine and the COP of the refrigerator are each 40% of their maximum possible values.	<b>8</b>



	DR. BABASAHEB AMBEDKAR TECHNICAL UNIVERSITY, LONERE.	
	Sanjeevan Engineering & Technology Institute, Panhala	
	Department of Mechanical Engineering	
	MSE	
	SEMESTER:III	ACADEMIC YEAR:2021-22
	NAME OF STUDENT:	ROLL NO.:
	CLASS:S.E.	MARKS:20
	DAY & DATE : Saturday, 08/01/2022	TIME:9.30am To 10.00 am
	SUBJECT: Fluid Mechanics	

### INSTRUCTIONS:

- 1) All questions are compulsory.
- 2) Q.1 to Q.6 multiple choice question 1 mark each.
- 3) Q7 and Q8 descriptive 3 marks each
- 4) Q9. 8 marks

Q. No.	Question	Marks
Q. 1.	Which of the following is NOT a type of force considered in the Navier-Stokes equation? a) Gravity force                      b) Pressure force c) Surface tension force              d) Viscous force	1
Q. 2.	For incompressible fluid flow, if area reduces then what is the effect on the velocity. a) increases                              b) decreases c) first increases then decreases      d) first decreases then increases	1
Q. 3.	Which of the following is not a way of classifying based on the shape of opening? a) Rectangular notch                      b) Circular notch c) Trapezoidal notch                      d) Stepped notch	1
Q. 4.	The head of water over a rectangular notch is 700 mm. The discharge is 200 litres/s. Find the length of the notch, when $CD = 0.63$ a) 0.125 m                                  b) 0.265 m c) 0.250 m                                  d) 0.200 m	1

<b>Q. 5.</b>	Which of the following instruments is used to measure flow on the application of Bernoulli's equation a) Venturimeter b) Orifice plate c) Pitot tube d) all of the above	<b>1</b>
<b>Q. 6.</b>	The Pitot tube is used for measurement of a) Pressure b) Flow c) Velocity d) Discharge	<b>1</b>

**Q. No.7. List out assumptions of Bernoulli's Equation.**

**3**

**Q. No.8. Define Velocity potential function and Stream function.**

**3**

**Q. No.9. Derive three dimensional continuity equation in cartesian coordinate.**

**8**

**OR**

**Derive expression for Euler's equation of motion.**

\*\*\*\*\* END \*\*\*\*\*

Course: B. Tech in Mechanical Engineering

Sem: V

Subject Name: Heat Transfer

Subject Code: BTMEC 501

Max Marks: 20

Date:- 13.12.2021

Duration:- 1 Hr.

Instructions to the Students:

1. All questions are compulsory
2. Assume suitable data if necessary
3. Use of non-programmable calculator is allowed

Marks

**Q. 1 Attempt following Questions**

6

**1. What is the correct formula for The Biot number?**

- A)  $hl/k$                       B)  $k/hl$                       C)  $l/hk$                       D)  $hk/l$

**2. Which dimensionless number has a significant role in forced convection?**

- A) Grashof number    B) Peclet number    C) Mach number    D) Reynolds number

**3. The ratio of product of buoyant force and inertia force to the square of the viscous force is known as**

- A) Stanton number    B) Grashof number    C) Fourier number    D) Peclet number

**4. The concept of the hydrodynamic boundary layer was first suggested by**

- A) Isaac Newton    B) Ludwig Prandtl    C) Rodridge    D) Fourier

**5. The concept of overall coefficient of heat transfer is used in heat transfer problems of,**

- A) Conduction    B) Convection    C) Radiation    D) Conduction and convection

**6. The heat transfer takes place according to,**

- A) Zeroth law of thermodynamics                      B) First law of thermodynamics  
C) Second law of thermodynamics                      D) Kirchhoff's law

**Q.2 Solve Any Two of the following**

3 x 2

- (A) Write general heat conduction equations in Cartesian, cylindrical and spherical coordinates.
- (B) Define critical radius of insulation. Derive the equation for critical radius of insulation for hollow cylinder.
- (C) Explain lumped heat capacity analysis.

**Q. 3 Solve Any One of the following**

8 x 1

- (A) Derive the general heat conduction equations in Cartesian coordinate system. Also write special cases of this equation.
- (B) A steam pipe is covered with two layers of insulation first layer being 3cm thick and other 5cm. The pipe is made of steel ( $k= 58 \text{ W/mK}$ ) having ID 160 mm and OD 170 mm. The inside and outside heat transfer coefficients are 30 and  $5.8 \text{ W/m}^2\text{K}$ , respectively. Calculate heat flow per unit length if steam temperature is  $300^\circ\text{C}$  and air temperature is  $50^\circ\text{C}$ . Thermal conductivities of insulating layers are 0.17 and  $0.093 \text{ W/mK}$  respectively.

**DR. BABASAHEB AMBEDKAR TECHNOLOGICAL UNIVERSITY, LONERE**

**Mid Semester Examination – December 2021**

**Course: Third Year B. Techn Mechanical Engineering      Sem: V**

**Subject Name: Applied Thermodynamics-I**

**Max Marks: 20**

**Date:-13/12/2021 Duration:- 1 Hr.**

**Instructions to the Students:**

1. All questions are compulsory
2. Assume suitable data if necessary
3. Use of non-programmable calculator is allowed

**Marks**

**6**

**Q. 1 Attempt following Questions**

**1. Efficiency of rankine cycle related to lower condenser pressure**

- A) Decreases    B) Increases  
C) remains same    D) none of above

**2. Which of following is the boiler mounting.**

- A) fusible plug  
B) economizer  
C) air preheater  
D) Superheater

**3. which of the following are operating variable of rankine efficiency**

- A) boiler pressure                      B) boiler mountings  
C) condenser pressure                D) boiler accessories

**4. Which type of nozzle is used for steam turbines**

- A) Convergent                              B) Divergent  
C) Convergent-Divergent              D) None of above

**5. which of following is water tube boiler**

- A) lanchshire                              B) cocharan  
C) benson boiler                         D) babcock willox

**6. Mollier chart also known as**

- A) enthalpy volume diagram          B) entropy pressure diagram  
C) enthalpy entropy diagram         D) none of above

**Q.2 Solve Any Two of the following**

**3 x 2**

- (A) Classify the steam boilers  
(B) Briefly explain the water tube and fire tube boiler differences  
(C) Explain the variables affecting efficiency of rankine cycle

**Q. 3 Solve Any One of the following**

**8 x 1**

- (A) explain rankine cycle on PV, TS and HS planes for its efficiency  
(B) A dry saturated steam at 28 bar is supplied to turbine and exit pressure is 0.8 bar  
Calculate rankine efficiency by neglecting pump work.



DR. BABASAHEB AMBEDKAR TECHNICAL UNIVERSITY, LONERE.

-Sanjeevan Engineering & Technology Institute, Panhala

Department of Mechanical Engineering

MSE

SEMESTER: VII

ACADEMIC YEAR: 2021-22

NAME OF STUDENT:

ROLL No.:

CLASS: Final year B.Tech

MARKS: 20

DAY & DATE : Monday, 13/12/2021, 10.45 – 11.45

SUBJECT: Mechatronics (BTMEC701)



1) Strictly For MCQ write correct option in the answer sheet (1 Marks each question).

Q. No.	Questions
1	A) Direction Control valve is used for a) Directing the fluid to different sections    b) Controlling the directions of the fluid c) Controlling the system    d) None of the above
	B) To restrict the flow in particular direction which one is used a) Direction control valve    b) Non return valve c) Plug valve    d) Diaphragm valve
	C) Infrared sensor is used for a) Object detection    b) Temperature detection c) Pressure detection    d) Flow detection
	D) The output of the sensor is always a) Analog    b) Digital c) Both A and B    d) None of the above
	E) The main function of the amplifier is a) To amplify the input    b) To amplify the output c) Control the input    d) Control the output
	F) To store the measured data which one is preferred a) Data acquisition system    b) Data logger system c) Hard Disc    d) RAM

Q 2) Attempt any two (2\*3 = 6 Marks)

- 1) Explain data logger and data acquisition system in brief.
- 2) Explain types of electronic signals with neat sketch.
- 3) Explain seven segment display with neat sketch

Q3. Attempt any one (1\*8 = 8 Marks)

- 1) Explain operational amplifier with its classification.
- 2) Explain meter in and meter out circuit with neat sketch.



DR. BABASAHEB AMBEDKAR TECHNICAL UNIVERSITY, LONERE.

Sanjeevan Engineering & Technology Institute, Panhala

Department of Mechanical Engineering

CA II



SEMESTER:III

ACADEMIC YEAR:2021-22

NAME OF STUDENT:

ROLL NO.:

CLASS:S.E.

MARKS:10

DAY & DATE : Monday, 07/02/2022

TIME:9.30am To 10.00 am

SUBJECT: Fluid Mechanics

### INSTRUCTIONS:

- 1) All questions are compulsory.
- 2) Q.1 to Q.10 multiple choice question 1 mark each.
- 3) Tick mark the correct answer. multiple tick mark considered as zero marks.

Q. No.	Question	Marks
Q. 1.	Which among the following is an assumption of Hagen-Poiseuille equation? a) Fluid is compressible                      b) Fluid is uniform c) Fluid is laminar                              d) Fluid is turbulent	1
Q. 2.	The main property that affects a boundary layer is _____ a) Temperature                                  b) Pressure c) Viscosity                                        d) Surface tension	1
Q. 3.	The flow separation occurs when the fluid travels away from the _____ a) Surface    b) Fluid body c) Adverse pressure gradient              d) Inter-molecular spaces	1
Q. 4.	How does a turbulent boundary layer produce swirls? a) Due to random motion                      b) Collision of molecules c) Due to non-uniform cross section        d) Due to eddies	1
Q. 5.	With the decrease in the viscosity, Reynolds number _____ a) Increases                                        b) Decreases c) Same    d) Independent	1
Q. 6.	Ratio of inertia force to viscous force is known as a) Grashof number                                b) Reynolds number c) Peclet number                                  d) Stanton number	1



Q. 7.	There will be a transition from laminar flow to turbulent flow when _____ a) Reynolds number increases      b) Reynolds number decreases c) Reynolds number is the same      d) Froude's number increases	1
Q. 8.	The friction factor in fluid flowing through pipe depends upon a) Reynold's number      b) relative roughness of pipe surface c) both a. and b.      d) none of the above	1
Q. 9.	The head loss through fluid flowing pipe due to friction is a) the minor loss      b) the major loss c) both a. and b.      d) none of the above	1
Q. 10.	What is the ratio of maximum velocity to average velocity, when the fluid is passing through the pipe and flow is laminar? a) 3      b) 2      c) 3 / 2      d) 2/3	1

\*\*\*\*\*END\*\*\*\*\*



DR. BABASAHEB AMBEDKAR TECHNICAL UNIVERSITY, LONERE.

Sanjeevan Engineering & Technology Institute, Panhala

Department of Mechanical Engineering

CA-II



SEMESTER: III

ACADEMIC YEAR: 2021-22

NAME OF STUDENT:

ROLL No.:

CLASS: S.Y. B.Tech

MARKS: 10

DAY & DATE : Monday, 07/12/2021



SUBJECT: Machine Drawing & CAD

### INSTRUCTIONS:

1. All questions are compulsory.
2. Circle on the correct answer for objective questions. Multiple circles or ticks are not allowed and considered as zero marks.
3. Que. 1 to 6 1 mark each, Que.7 having 4 marks.

Q. No.	Questions	Examine r Marks
1.	When the interior of an object is complicated, which of the following view is used? (a) Front view (b) Side View (c) Top view (d) Sectional view	
2.	When the cutting plane cuts the entire object the section is known as _____ a) Full section b) Half section c) Revolved section d) Removed section	
3.	The section in which the sectional views are not drawn there itself, but at a place adjacent to it is known as _____ a) removed section b) broken out section c) auxiliary section d) assembly section	
4.	Crane hook is to drawn by _____ method. a) full section b) half section c) removed section d) revolved section	
5.	The relation between mating parts is called _____ a) Connection b) Fits c) Joints d) Link	
6.	The difference between the maximum and minimum permissible limits of the sizes is called _____ a) Deviation b) Allowance c) Tolerance d) Actual deviation	
7.	Draw the conventional symbols of following a) Glass b) Bearings c) Internal screw threads d) Cylindrical compression spring	



	DR. BABASAHEB AMBEDKAR TECHNICAL UNIVERSITY, LONERE.	
	Sanjeevan Engineering & Technology Institute, Panhala	
	Department of Mechanical Engineering	
	CA-I	
	SEMESTER: IV	ACADEMIC YEAR:2021-22
	NAME OF STUDENT:	ROLL NO.:
	CLASS: S.Y.	MARKS: 10
	DAY & DATE : Wednesday, 18/05/2021	Time: 10.00 am to 10.30am
	SUBJECT: Numerical Methods in Mechanical Engineering (BTMEC404)	

### INSTRUCTIONS:



Q.1 to Q.6 multiple choice question 1 marks each  
 Que 7. and Que8 Descriptive 2 marks each

Q. No.	Question	Marks
Q. 1.	Numerical techniques more commonly involve _____	
	a) Elimination method b) Reduction method c) Iterative method d) Direct method	
Q. 2.	Errors may occur in performing numerical computation on the computer due to which of the following reasons?	
Ans.	a) Operator fatigue b) Back substitution c) Rounding errors d) Power fluctuation	
3.	What is no. of significant figure in 433.00	
Ans.	a) 2 b) 3 c) 5 d) 4	
4.	No. of significant figure in 42306, 0.0007 and $6.5 \times 10^{-3}$ are respectively	
Ans.	a) 4,4,2 b) 5,5,2 c) 5,1,2 d) 5,1,5	

Q. 5.	The Newton Raphson method is also called as _____	
Ans.	<ul style="list-style-type: none"> <li>a) Diameter method</li> <li>b) Secant method</li> <li>c) Tangent method</li> <li>d) Chord method</li> </ul>	
6.	The points where the Newton Raphson method fails are called?	
Ans.	<ul style="list-style-type: none"> <li>a) floating</li> <li>b) continuous</li> <li>c) stationary</li> <li>d) non-stationary</li> </ul>	

Q. No.	Question	Marks
7.	<p>Que. What are the Rules for significant figures:</p> <p>Ans:</p>	
8.	<p>Que. Define Precision and Accuracy?</p> <p>Ans:</p>	

\*\*\*\*\* END \*\*\*\*\*

	<b>DR. BABASAHEB AMBEDKAR TECHNICAL UNIVERSITY, LONERE.</b>	
	<b>Sanjeevan Engineering &amp; Technology Institute, Panhala</b>	
	<i>Department of Mechanical Engineering</i>	
	CA-I	
	SEMESTER:IV	ACADEMIC YEAR:2021-22
	NAME OF STUDENT:	ROLL No.:
	CLASS: Second Year	MARKS: 10
	DAY & DATE : Tuesday, 17/05/2022, 2:30 pm to 3:00 pm	
	SUBJECT: Strength of Materials (BTMEC403)	

- 1) Q. 1 carries 6 marks (1x6) Q.2 carries 4 marks (2x2)  
 2) For MCQ write correct option (Like - a, b, c, or d in the answer column).

Q. No	Questions	Answer (Option)
1	i) The slope of the stress-strain curve in the elastic deformation region is _____ a) Elastic modulus b) Plastic modulus c) Poisson's ratio d) None of the mentioned	
	ii) Where in the stress-strain curve, the hooke's law is valid? a) Strain hardening region b) Elastic range c) Necking region d) Valid everywhere	
	iii) What is the limiting value of Poisson's ratio? a) -1 and 0.5 b) -1 and -0.5 c) 0 and 0.5 d) -1 and -0.5	
	iv) Bulk modulus is applicable for _____ a) Solids b) Liquids c) Gases d) All of the above	
	v) What is the expression for modulus of rigidity in terms of modulus of elasticity and the Poissons ratio? a) $G = E / 2(1 + \mu)$ b) $G = 5E / (1 + \mu)$ c) $G = 3E / 2(1 + \mu)$ d) $G = E / (1 + 2\mu)$	
	vi) How the total strain in any body subjected to different loads at different sections can be calculated? a) The resultant strain calculated by the trigonometry b) The resultant strain is the algebraic sum of the individual strain c) The resultant will be through Lamé's theorem d) None of the mentioned	

**i) Write short notes on Thermal Stresses**

**2**

**ii) Write short notes on Composite bar**

**DR. BABASAHEB AMBEDKAR TECHNOLOGICAL UNIVERSITY, LONERE**

Mid Semester Examination – MAY 2022

Course: T.Y. B Tech in Mechanical Engineering      Sem: VI

Subject Name: ATD-II      Subject Code: BTMEC603



Max Marks: 20

Date:-17/05/2022 Duration:- 1 Hr.

**Instructions to the Students:**

1. All questions are compulsory
2. Assume suitable data if necessary
3. Use of non-programmable calculator is allowed

		CO	PO	Marks
<b>Q. 1</b>	<b>Attempt following Questions</b>			<b>6</b>
	1. The bank of tubes at the back of domestic refrigerator is A) condenser tubes                      B) evaporator tubes C) capillary tubes                      D) all of above	3	1	
	2. The pressure at the inlet of a refrigerant compressor is called A) discharge pressure B) suction pressure C) critical pressure D) back pressure	3	1	
	3. The coefficient of performance of heat pump is always one A) equal to                      B) less than C) greater than                      D) none of these	4	2	
	4. An Evaporator is also known as A) Freezing coil                      B) cooling coil C) chilling coil                      D) All of these	3	1	
	5. During a refrigeration cycle, heat is rejected by the refrigerant in a A) compressor                      B) condenser C) evaporator                      D) expansion valve	3	1	
	6. An important characteristic of absorption system of refrigeration is A) noisy operation                      B) quiet operation C) more cooling                      D) very little power consumption	4	1	
<b>Q.2</b>	<b>Solve Any Two of the following</b>			<b>3 x 2</b>
(A)	Methods of Refrigeration	3	1	
(B)	What is the major component of vapour compression system?	3	1	
(C)	Effect of operating variables on performance of vapour compression system	4	2	
<b>Q. 3</b>	<b>Solve Any One of the following</b>			<b>8 x 1</b>
(A)	Applications of Refrigeration	3	1	
(B)	Explain Multi-pressure System	4	1	

	<b>DR. BABASAHEB AMBEDKAR TECHNICAL UNIVERSITY, LONERE.</b>	
	<b>Sanjeevan Engineering &amp; Technology Institute, Panhala</b>	
	<b>Department of Mechanical Engineering</b>	
	<b>MSE</b>	
	<b>SEMESTER:VI</b>	<b>ACADEMIC YEAR:2021-22</b>
	<b>NAME OF STUDENT:</b>	<b>ROLL No.:</b>
	<b>CLASS: Third Year</b>	<b>MARKS: 20</b>
	<b>DAY &amp; DATE : Tuesday, 17/05/2022, 12 am to 1 pm</b>	
	<b>SUBJECT: Machine design II (BTMEC602)</b>	

1) For MCQ write correct option (Like – a, b, c, or d in the answer Sheet).

Q. No	Questions	CO	PO
1	1) Teeth of spur gear are a) Parallel to axis      b) Inclined to axis	1	1
	2) Teeth of helical gear are a) Inclined to axis      b) Inclined to axis		
	3) In higher speed application which of the following gear is used a) Spur Gear      b) Helical      c) Bevel      d) Parallel to axis		
	4) In sliding mesh gear box which of the following gear is used a) Bevel Gear      b) Spur Gear      c) Helical gear      d) Worm wheel		
	5) In 20° full depth involute teeth profile minimum number of teeth on the pinion should be a) 20      b) 40      c) 18      d) 30		
	6) For transmitting power in right angle direction which of the following gear is used a) Spur Gear      b) Helical      c) Bevel      d) Worm wheel		
2	<p>Attempt any 2 question (Total 8 Marks).</p> <p>A) In a particular type of the application, the radial load on the a ball bearing is 5 kN and expected life of the 90% of the bearings is 8000 hr. Calculate dynamic load carrying capacity of the bearing, when the shaft rotates at 1450 rpm.</p> <p>B) Explain different types of gears in brief.</p> <p>C) Explain methods for the bearing lubrication.</p>	3	2
3	<p>Attempt any 1 question (Total 6 Marks).</p> <p>A) A pair of spur gear with 20° full depth involute teeth consists of 20 teeth pinion meshing with a 41 teeth gear. The module and face width of the gears are 3 and 40 mm; respectively. Pinion as well as gear is made of same material (<math>S_{ut} = 600 \text{ N/mm}^2</math>). The gears are heat treated to 400 BHN. The pinion rotate at 1450 rpm and the service factor for the application is 1.75. Assume that velocity factor to account for the dynamic load and the f.S is 1.5 determine rated power that the gear can transmit.</p> <p>B) A pair of parallel helical gear consists of 20 teeth pinion with 100 teeth gear. The pinion rotates at 720 rpm. The normal pressure angle is 20°, while the helix angle is 25°. The face width is 40 mm and the normal module is 4 mm. The pinion and gear are made up of steel 40C8 (<math>S_{ut} = 600 \text{ N/mm}^2</math>) and heat treated to surface hardness of 300 BHN. The CS and FS are 1.5 and 2 respectively. Assume that velocity factor to account for dynamic load and calculate power transmitting capacity of the gears.</p>	3	2

Y values are 20 = 0.32, 26 = 0.344, 27 = 0.348, for helical gear at  $Z'_p = 26.87$  Y = 0.3475.



	<b>DR. BABASAHEB AMBEDKAR TECHNICAL UNIVERSITY, LONERE.</b>	
	<b>Sanjeevan Engineering &amp; Technology Institute, Panhala</b>	
	<b>Department of Mechanical Engineering</b>	
	<b>Mid Semester Examination</b>	
	<b>SEMESTER: VIII</b>	<b>ACADEMIC YEAR: 2021-22</b>
	<b>NAME OF STUDENT:</b>	<b>ROLL NO.:</b>
	<b>CLASS: B. Tech. Final Year</b>	<b>MARKS: 20</b>
	<b>DAY &amp; DATE : Monday, 17/05/2022</b>	<b>12.00pm – 1.00 pm.</b>
	<b>SUBJECT: Non-conventional Energy Resources (BTMEC801F)</b>	

**INSTRUCTIONS:**

- i. All questions are compulsory.

Q. No.	Question	Marks	CO	PO
Q.1.	Select and Write the appropriate option			
1.	Which of the following statements is not true about Renewable Energy? a) They do not cause pollution      b) Their transportation is difficult c) They cause ecological imbalance      d) They have a low gestation period	1	1	1
2.	Which of the following has caused global warming? a) Burning of biomass      b) Burning of fossil fuels c) Releasing CFCs into the atmosphere      d) Melting metals	1	1	1
3.	What does ozone protect the earth from? a) Sound waves      b) Harmful UV radiation c) Visible radiation      d) Greenhouse effect	1	1	1
4.	What is a solar collector? a) A system to collect heat by absorbing sunlight b) A system to collect rainwater using sunlight c) A system to collect electricity by using sunlight d) A device to reflect sunlight back	1	1	1
5.	Which of the following is a circulating fluid in evacuated flat-plate solar collectors? a) Water      b) Steam c) Nitrogen      d) Hydrogen	1	1	1
6.	Which of the following is not used in a passive solar heating/cooling system? a) Building walls      b) Building roofs c) Air conditioners      d) Building floors	1	1	1
Q.2	Calculate energy received by Earth from the Sun	3	2	2
Q.3	Explain with neat Diagram Flat plate collector and Concentric plate collector	3	2	1
Q.4	Express how the incoming solar energy is distributed across the earth with neat diagram	8	3	7

\*\*\*\*\* END \*\*\*\*\*

	<b>DR. BABASAHEB AMBEDKAR TECHNICAL UNIVERSITY, LONERE.</b>	
	<b>Sanjeevan Engineering &amp; Technology Institute, Panhala</b>	
	<i>Department of Mechanical Engineering</i>	
	<b>CA-II</b>	
	<b>SEMESTER:VI</b>	<b>ACADEMIC YEAR:2021-22</b>
	<b>NAME Of STUDENT:</b>	<b>ROLL NO.:</b>
	<b>CLASS: T.Y. Mechanical</b>	<b>MARKS: 10</b>
	<b>DAY &amp; DATE : Tuesday, 21/06/2022</b>	
	<b>SUBJECT: Manufacturing Processes – II (BTMEC601)</b>	

### INSTRUCTIONS:



- All questions are compulsory.
- Q. No.1 to Q. No.6 are objective type questions (1 Marks each) and Q. No.7 & Q. No.8 are descriptive type questions carrying 2 Marks each.

Q. No.	Questions	Examiner Marks
1.	Which forming method is used for the production of hollow glasses? a) Blowing b) Pressing c) Drawing d) Casting	
2.	Which method of forming cannot be used to produce sheet glass? a) Casting b) Rolling c) Drawing d) Floating	
3.	What does the term 'green' refer to for drying and firing operations? a) Fired but not dried b) Dried but not fired c) Dried then fired d) Fired then dried	
4.	Which of the following is not a process involved in glass production? a) Forming and shaping b) Extrusion c) Heat treatment d) Finishing	
5.	Which of the following is a property of ceramics? a) Low strength b) Low melting point c) Resistant to corrosion d) Bad insulation	
6	Which of the following is not a step in making ceramics? a) Powder pressing b) Sintering c) Alloying d) Vitrification	



Q. No	Questions	Examiner Marks
7.	Que: Differentiate between thermosetting plastics & thermoplastics	02 Marks
8.	Que: What are monomers and polymers? Give suitable examples	02 Marks

\*\*\*\*\* END \*\*\*\*\*

	DR. BABASAHEB AMBEDKAR TECHNICAL UNIVERSITY, LONERE.	
	Sanjeevan Engineering & Technology Institute, Panhala	
	Department of Mechanical Engineering	
	CA-2	
	SEMESTER:VI	ACADEMIC YEAR:2021-22
	NAME OF STUDENT:	ROLL No.:
	CLASS:T.Y. B. Tech.	MARKS: 10
	DAY & DATE : Tuesday, 21/06/2022	
	SUBJECT:IC Engines (BTMEC604B)	

### INSTRUCTIONS:

1. All questions are compulsory.
2. Circle on the correct answer for objective questions. Multiple circles or ticks are not allowed and considered as zero mark.

Q. No.	Questions
1.	<p><b>During idling, a petrol engine requires _____ mixture.</b></p> <p>a) lean    b) rich    c) chemically correct    d) none of the mentioned</p>
2.	<p><b>What is the requirement met by the injection system?</b></p> <p>a) Proper atomization of fuel into very fine droplets  b) Proper spray pattern to ensure rapid mixing of fuel and air  c) Uniform distribution of fuel droplets throughout the combustion chamber  d) All of the mentioned</p>
3.	<p><b>A spark can be caused by applying a sufficiently low voltage between two electrodes separated by a gap.</b></p> <p>a) True    b) False</p>
4.	<p><b>Wet sump lubrication system employ a large capacity oil sump at the base of crank chamber, from which the oil is drawn by a low pressure oil pump and delivered to various parts.</b></p> <p>a) True    b) False</p>
5.	<p><b>_____ in supercharging pressure increases the tendency to detonate and pre-ignite.</b></p> <p>a) Decrease    b) Increase    c) Unpredictable    d) None of the mentioned</p>
6.	<p><b>Turbochargers are centrifugal compressors driven by the exhaust gas turbines.</b></p> <p>a) True  b) False</p>

**Q.7. Which are the various alternative fuels for IC Engines?**

**Answer:**

---

---

---

---

---

---

---

---

---

---

---

---

---

---

---

---

---

---

---

---

---

---

---

---

**Q. 8. What are the pollutants from SI & CI Engines?**

**Answer:**

---

---

---

---

---

---

---

---

---

---

---

---

---

---

---

---

---

---

---

---



---

---

---

---

\*\*\*\*\* END \*\*\*\*\*

	DR. BABASAHEB AMBEDKAR TECHNICAL UNIVERSITY, LONERE.	
	Sanjeevan Engineering & Technology Institute, Panhala	
	Department of Mechanical Engineering	
	CA-II	
	SEMESTER: VI	ACADEMIC YEAR:2021-22
	NAME OF STUDENT:	ROLL No.:
	CLASS: T.Y. B. Tech	MARKS: 10
	DAY & DATE : Tuesday, 21/06/2022	Time:1.30 pm to 2.00 pm
	SUBJECT: QTPM	

### INSTRUCTIONS:

1. All questions are compulsory.

Q. 1. Consider the assignment problem as shown in below table and solve it using Hungarian method. In this problem 5 different jobs are to be assigned to 5 different operators such that the total processing time is minimized. The matrix entries represent processing times in hours. (5 marks)

		Operator				
		1	2	3	4	5
Job	1	10	12	15	12	8
	2	7	16	14	14	11
	3	13	14	7	9	9
	4	12	10	11	13	10
	5	8	13	15	11	15

Q. 2 The following table shows the network along with duration.

1. Draw the project network. 2. Find the critical path and critical duration. (5 marks)

Activity	Immediate Predecessor	Duration
A	--	5
B	--	4
C	A	8
D	B	8
E	B	8
F	B	5
G	C,D	8
H	E,I	22
I	F	2
J	F	12



Title

Student Marks

Exam Season

Winter Semester Examinations 2021

6315 / Sanjeevan Engineering and Technology Institute, Panhala

Course

11612 / 2017 / Bachelor of Technology (Mechanical Engineering)

Subject

BTMC302 / 2021 / Fluid Mechanics

Exported On

2022/08/13 11:10:37

Enrollment Number	Full Name	Continuous Assessment 2 Marks / 10		Continuous Assessment 1 Marks / 10		Mid Exam Marks / 20
		Template	Upload	Template	Upload	Template
T2063151612001	AHAD SAMAD KHOCHIKAR .	7		6		16
T2063151612002	NIKHIL BHIMRAO KADAM	8		7		18
T2063151612003	PRADIP SHAMRAO MANE	8		4		16
T2063151612004	PRANALI BABASAHEB KUMBHAR	9		7		18
T2063151612005	PRANAV JOTIRAM GUJAR	9		3		16
T2063151612006	PRATHMESH SUDHIR MANDUM	8		5		16
T2063151612007	SHUBHAM TUKARAM KHOT	8		6		16
T2063151612008	SHUBHAM MARUTI SHETE	8		4		16
T2063151612009	SIDDHESH SUNIL SHINDE	8		6		16
T2063151612010	SIDDHESH SANTOSH BENDKHALE	8		1		16
T2163151612501	POWAR SOURAV SHASHIKANT	10		10		6
T2163151612502	NAIK SHRIDHAR YUVRAJ	7		2		11
T2163151612503	SHIKHARE PRAMOD GUNDA	5		5		10
T2163151612504	SHIKHARE NILESH SHIVAJI	5		7		8
T2163151612505	DHERE SAURABH SATISH	7		9		4
T2163151612506	DHERE HARSH SATISH	10		9		8
T2163151612507	DESAI VISHWAJEET VIKAS	8		9		3
T2163151612508	KADAVEKAR ANIKET RAJENDRA	8		9		5
T2163151612509	SAWANT SUNIL BHAGAWAN	10		8		3
T2163151612510	KHOT VIVEK MADHUKAR	10		8		8

Enrollment Number	Full Name	Continuous Assessment		Marks / 20
		2 Marks / 10	1 Marks / 10	
T2163151612511	ARAB MOHMADSADD ZAKIRHUSEN	10	9	12
T2163151612512	OMKAR SHASHIKANT JADHAV	7	10	3
T2163151612513	JADHAV ALIAS MITHARI KAUSTUBH RAJENDRA	8	8	6
T2163151612514	GARAD NILESH JAYSING	4	6	10
T2163151612515	PATIL ANISH VASANT	10	7	3
T2163151612516	SHUBHAM BAJIRAO KAMBLE	10	10	5
T2163151612517	BAHADURE NITIN AMBADAS	9	9	12
T2163151612518	POPHALE YASH PRAVIN	6	9	5
T2163151612519	MANE PAVAN MAHADEV	5	9	6
T2163151612520	SHINDE SAHIL NITIN	7	10	5
T2163151612521	SAPALE GAURESH RAJESH	6	8	6
T2163151612522	KATE RAJVARDHAN KAMALAKAR	8	8	7
T2163151612523	LOHAR PRATHAMESH MANIK	7	2	11
T2163151612524	KADAM PRANAV JAGDISH	8	8	9
T2163151612525	GURAV ROHIT HINDURAO	6	4	10
T2163151612526	JAGDALE ABHISHEK VIJAY	10	4	12
T2163151612527	LOHAR DHIRAJ SHIVAJI	5	4	11
T2163151612528	JADHAV NIRANJAN JAYWANT	9	9	6
T2163151612529	MHAMULKAR ABHIJIT HINDURAO	6	9	5
T2163151612530	KHOT SWAPNIL SHASHIKANT	4	6	10
T2163151612531	NAGARI DIPAK DEVENDRA	7	8	5
T2163151612532	BHAT SAHIL PUNDLIK	10	10	3
T2163151612533	BAWALE VISHWESH PRASANNA	3	10	7
T2163151612534	PATIL NIKHIL DNYANDEV	6	10	4
T2163151612535	SAWRATKAR VISHAL UTTAM	7	9	4
T2163151612536	TARALEKAR PRUTHVIRAJ CHANDRAKANT	5	9	6
T2163151612537	JARAG SIDDESH VIKRAM	4	6	10
T2163151612538	SHINDE CHAITANYA DILIP	7	8	5
T2163151612539	KHADE ROHIT VISHWAS	9	9	6
T2163151612540	SATHAM DIGAMBAR SUNIL	7	10	3
T2163151612541	PADALKAR ANIKET ASHOK	7	4	9

Enrollment Number	Full Name	Continuous Assessment 2 Marks / 10		Continuous Assessment 1 Marks / 10		Mid Exam Marks / 20	
		Template	Upload	Template	Upload	Template	Upload
T2163151612542	GHATAGE SARADAR KRUSHNAT	6		4		10	
T2163151612543	BAGADI DHAIRYASHIL HINDURAO	4		10		6	
T2163151612544	PATIL SUSHANT SANJAY	4		10		6	
T2163151612545	WAIKAR RAHIL ANIS	4		6		10	
T2163151612546	PATIL SHUBHAM RAGHUNATH	5		5		10	
T2163151612547	NAGARJI ADIL KASAM	6		10		4	
T2163151612548	SAVARE AKANSHA AKARAM	10		7		18	
T2163151612549	KONDE SAMRUDDHI BABASAHEB	10		10		20	
T2163151612550	WANGIKAR RUTUJA AAPPASO	5		7		8	
T2163151612551	KUMBHAR ABHIJEET VILAS	9		8		5	
T2163151612552	CHOUGULE SUMIT MANOHAR	9		8		5	
T2163151612553	KHOT RUSHIKESH NAMDEV	4		10		6	
T2163151612554	SASWADE SHRIKANT ARUN	9		1		10	
T2163151612555	POWAR SHUBHAM SANJAY	4		10		6	
T2163151612556	SHIDHARTH SAMBHAJI CHOUGULE	4		7		9	
T2163151612557	JUBER SAMEER MULLA	8		9		6	
T2163151612558	MOHITE VIVEK SHRIKANT	6		9		5	
T2163151612559	SHINDE PRATHAMESH BHAGAVAN	7		5		8	
T2163151612560	SATHE MAHESH SARJERAO	5		7		8	

Subject Teacher

D. V. Patil,   
(Name and Signature)

HOD

  
(Name and Signature)



Principal/Director

(Name and Signature)



Title

Student Marks

Exam Season

Winter Semester Examinations 2021

6315 / Sanjeevan Engineering and Technology Institute, Panhala

Course

11612 / 2017 / Bachelor of Technology (Mechanical Engineering)

Subject

BTMC303 / 2021 / Thermodynamics

Exported On

2022/07/21 12:42:18

Enrollment Number	Full Name	Continuous Assessment 2 Marks / 10	Continuous Assessment 1 Marks / 10	Mid Exam Marks / 20	End Exam Marks / 60
		<input type="button" value="Template"/> <input type="button" value="Upload"/>	<input type="button" value="Template"/> <input type="button" value="Upload"/>	<input type="button" value="Template"/> <input type="button" value="Upload"/>	
T2063151612001	AHAD SAMAD KHOCHIKAR	7	7	16	
T2063151612002	NIKHIL BHIMRAO KADAM	8	8	18	
T2063151612003	PRADIP SHAMRAO MANE	6	8	16	
T2063151612004	PRANALI BABASAHEB KUMBHAR	8	9	19	
T2063151612005	PRANAV JOTIRAM GUJAR	7	9	16	
T2063151612006	PRATHMESH SUDHIR MANDUM	7	8	16	
T2063151612007	SHUBHAM TUKARAM KHOT	8	8	16	
T2063151612008	SHUBHAM MARUTI SHETE	6	8	16	
T2063151612009	SIDDHESH SUNIL SHINDE	7	8	18	
T2063151612010	SIDDHESH SANTOSH BENDKHALE	5	8	16	
T2163151612501	POWAR SOURAV SHASHIKANT	5	6	15	
T2163151612502	NAIK SHRIDHAR YUVRAJ	6	6	14	
T2163151612503	SHIKHARE PRAMOD GUNDA	6	6	15	
T2163151612504	SHIKHARE NILESH SHIVAJI	5	7	14	
T2163151612505	DHERE SAURABH SATISH	6	7	15	
T2163151612506	DHERE HARSH SATISH	5	6	14	
T2163151612507	DESAI VISHWAJEET VIKAS	6	7	16	



Enrollment Number	Full Name	Assessment 2 Marks / 10	Assessment 1 Marks / 10	Mid Exam Marks / 20	End Exam Marks / 60
		Template Upload	Template Upload	Template Upload	
T2163151612508	KADAVEKAR ANIKET RAJENDRA	5	6	15	
T2163151612509	SAWANT SUNIL BHAGAWAN	6	7	14	
T2163151612510	KHOT VIVEK MADHUKAR	5	6	15	
T2163151612511	ARAB MOHMADSADD ZAKIRHUSEN	5	7	14	
T2163151612512	OMKAR SHASHIKANT JADHAV	6	6	15	
T2163151612513	JADHAV ALIAS MITHARI KAUSTUBH RAJENDRA	6	6	14	
T2163151612514	GARAD NILESH JAYSING	7	9	17	
T2163151612515	PATIL ANISH VASANT	6	7	14	
T2163151612516	SHUBHAM BAJIRAO KAMBLE	5	7	16	
T2163151612517	BAHADURE NITIN AMBADAS	8	8	18	
T2163151612518	POPHALE YASH PRAVIN	5	7	14	
T2163151612519	MANE PAVAN MAHADEV	6	6	15	
T2163151612520	SHINDE SAHIL NITIN	5	7	14	
T2163151612521	SAPALE GAURESH RAJESH	5	6	15	
T2163151612522	KATE RAJWARDHAN KAMALAKAR	6	7	14	
T2163151612523	LOHAR PRATHAMESH MANIK	6	6	15	
T2163151612524	KADAM PRANAV JAGDISH	5	6	14	
T2163151612525	GURAV ROHIT HINDURAO	6	6	16	
T2163151612526	JAGDALE ABHISHEK VIJAY	5	7	15	
T2163151612527	LOHAR DHIRAJ SHIVAJI	6	7	14	
T2163151612528	JADHAV NIRANJAN JAYWANT	5	6	15	
T2163151612529	MHAMULKAR ABHIJIT HINDURAO	6	7	15	
T2163151612530	KHOT SWAPNIL SHASHIKANT	6	6	14	
T2163151612531	NAGARI DIPAK DEVENDRA	5	7	15	
T2163151612532	BHAT SAHIL PUNDLIK	5	6	14	


Enrollment Number	Full Name	Continuous Assessment 2 Marks / 10	Continuous Assessment 1 Marks / 10	Mid Exam Marks / 20	End Exam Marks / 60
		Template Upload	Template Upload	Template Upload	
T2163151612533	BAWALE VISHWESH PRASANNA	6	7	15	
T2163151612534	PATIL NIKHIL DNYANDEV	6	6	14	
T2163151612535	SAWRATKAR VISHAL UTTAM	5	6	16	
T2163151612536	TARALEKAR PRUTHVIRAJ CHANDRAKANT	6	6	15	
T2163151612537	JARAG SIDDESH VIKRAM	5	7	14	
T2163151612538	SHINDE CHAITANYA DILIP	6	7	15	
T2163151612539	KHADE ROHIT VISHWAS	5	6	15	
T2163151612540	SATHAM DIGAMBAR SUNIL	6	7	14	
T2163151612541	PADALKAR ANIKET ASHOK	6	6	15	
T2163151612542	GHATAGE SARADAR KRUSHNAT	5	7	14	
T2163151612543	BAGADI DHAIRYASHIL HINDURAO	5	6	15	
T2163151612544	PATIL SUSHANT SANJAY	6	7	14	
T2163151612545	WAIKAR RAHIL ANIS	6	6	16	
T2163151612546	PATIL SHUBHAM RAGHUNATH	5	6	15	
T2163151612547	NAGARJI ADIL KASAM	6	6	14	
T2163151612548	SAVARE AKANSHA AKARAM	8	9	19	
T2163151612549	KONDE SAMRUDDHI BABASAHEB	8	9	19	
T2163151612550	WANGIKAR RUTUJA AAPPASO	5	6	14	
T2163151612551	KUMBHAR ABHIJEET VILAS	6	7	15	
T2163151612552	CHOUGULE SUMIT MANOHAR	6	6	14	
T2163151612553	KHOT RUSHIKESH NAMDEV	5	7	15	
T2163151612554	SASWADE SHRIKANT ARUN	5	6	14	
T2163151612555	POWAR SHUBHAM SANJAY	6	7	16	
T2163151612556	SHIDHARTH SAMBHAJI CHOUGULE	6	7	15	
T2163151612557	JUBER SAMEER MULLA	5	6	14	
T2163151612558	MOHITE VIVEK SHRIKANT	6	7	15	


Enrollment Number	Full Name	Continuous Assessment 2 Marks / 10	Continuous Assessment 1 Marks / 10	Mid Exam Marks / 20	End Exam Marks / 60
T2163151612559	SHINDE PRATHAMESH BHAGAVAN	5	6	14	
T2163151612560	SATHE MAHESH SARJERAO	6	7	15	

Template  
Upload

Template  
Upload

Template  
Upload

Subject Teacher  
  
(Name and Signature)

HOD  
  
(Name and Signature)



Principal/Director  
(Name and Signature)



Title

Student Marks

Exam Season

Winter Semester Examinations 2021

6315 / Sanjeevan Engineering and Technology Institute, Panhala

Course

11612 / 2017 / Bachelor of Technology (Mechanical Engineering)

Subject

BTMEC502 / 2021 / Applied Thermodynamics - I

Exported On

2022/06/27 11:40:46

Enrollment Number	Full Name	Continuous Assessment 2 Marks / 10		Continuous Assessment 1 Marks / 10		Mid Exam Marks / 20	End Exam Marks / 60
		<input type="button" value="Template"/>	<input type="button" value="Upload"/>	<input type="button" value="Template"/>	<input type="button" value="Upload"/>	<input type="button" value="Template"/> <input type="button" value="Upload"/>	
1963151612009	BHOSALE SONALI SHIVAJI	9		10		20	60
1963151612010	PATIL TEJAS SHAMRAO	10		10		19	60
1963151612026	SHINDE OMKAR SURESH	8		5		14	60
1963151612030	SHINDE KEDAR RAMESH	10		5		11	60
1963151612052	SANKPAL KAMLESH PRAKASH	10		9		20	60
1963151612056	PATIL VAIBHAV UTTAM	10		10		16	60
1963151612065	MUGDAR RAHUL NILESH	10		10		19	59
2063151612019	JADHAV SANKET SANJAY	10		7		11	60
2063151612020	SAWANT RUSHIRAJ RAJENDRA	8		6		18	60
2063151612021	PAWAR OMKAR BHAGAWAN	10		6		18	60
2063151612022	SNEHAL SUNIL KASHID	10		10		12	60
2063151612023	POWAR RAHUL GANAPATI	10		9		20	53
2063151612024	MUJAWAR ASIF SHABBIR	10		8		19	60
2063151612025	JANGAM SANKET ASHOK	9		10		20	60

Enrollment Number	Full Name	Assessment 2 Marks / 10		Assessment 1 Marks / 10		End Exam Marks / 10	ment er	Full Name
		Template	Upload	Template	Upload			
2063151612026	PATIL SOURAV SANJAY	10		8		9	60	51612051 MAI
2063151612027	PATIL RAHUL MAHADEV	10		7		18	60	151612053 G
2063151612028	PATIL SAURABH PANDIT	10		8		18	60	151612054
2063151612029	PATIL DIGVIJAY BALASAHEB	6		6		8	60	15161205
2063151612030	PATIL AVADHUT RAGHUNATH	9		8		11	60	15161205
2063151612031	MANE SUNIL VISHAVNATH	10		7		9	60	3151
2063151612032	SAKATE AJAY SANJAY	10		8		16	60	
2063151612033	BHOSALE SATYAMRAJE PANDITRAO	9		10		20	60	
2063151612035	NAIK PRASANNA PRAKASH	8		7		12	60	
2063151612037	DALVI SIDDHESH DHANAJI	10		8		12	60	
2063151612038	CHAVAN SAIPRASAD MADHUKAR	9		8		12	60	
2063151612039	MUJAWAR NAWAJSHARIF MOULA	10		5		11	60	
2063151612040	MELAKERI SHRIDHAR BASAPPA	10		5		12	57	
2063151612041	PATIL SHUBHAM RAGHUNATH	8		7		18	60	
2063151612042	PATIL PRASHANT ISHWARA	9		9		11	60	
2063151612043	SHINDE PRANAY BABURAO	9		8		10	60	
2063151612044	JADHAV SAGAR MAHIPATI	8		9		12	60	
2063151612045	PATIL GAURAV KRISHNAT	10		9		10	60	
2063151612046	POWAR SURAJ SANJAY	9		7		17	60	
2063151612047	KOINGADE MAHESH DILIP ALIAS DIPAK	10		5		9	39	
2063151612048	BOLAVE VINAYAK BALU	10		8		12	60	
2063151612049	CHAVAN SUSHANT BAJRANG	10		6		13	60	
2063151612050	MUJAWAR ARSHAD KARIMBAKSH	10		9		9	60	

Enrollment Number	Full Name	Continuous Assessment 2 Marks / 10		Continuous Assessment 1 Marks / 10		Mid Exam Marks / 20	End Exam Marks / 60
		Template	Upload	Template	Upload	Template Upload	
2063151612051	MALI ROHIT RAMRAO	10		8		12	60
2063151612053	GAIKWAD TUSHAR MAHENDRA	9		8		20	60
2063151612054	GOURAV SANJAY PATIL	10		8		9	60
2063151612055	BIDKAR SHUBHAM APPASAHEB	9		5		9	60
2063151612056	MAHADIK ADITYA ATUL	7		10		9	60
2063151612057	SOURABH UDAY THOMBARE	10		10		16	60
2063151612062	DEVANE RAGHVENDRA SADASHIV	10		9		19	60
2063151612063	GAIKWAD NETRA GAJANAN	9		9		12	59

*S.P. Nangare*  
Subject Teacher

*S.P. Nangare*  
(Name and Signature)

HOD

*A*  
(Name and Signature)

*[Signature]*  
Principal/Director

(Name and Signature)



Title

Student Marks

Exam Season

Winter Semester Examinations 2021

6315 / Sanjeevan Engineering and Technology Institute, Panhala

Course

11612 / 2017 / Bachelor of Technology (Mechanical Engineering)

Subject

BTMEC503 / 2021 / Machine Design - I

Exported On


2022/06/13 15:39:35


Enrollment Number	Full Name	Continuous Assessment 2 Marks / 10	Continuous Assessment 1 Marks / 10	Mid Exam Marks / 20	End Exam Marks / 60
		<input type="button" value="Template"/> <input type="button" value="Upload"/>	<input type="button" value="Template"/> <input type="button" value="Upload"/>	<input type="button" value="Template"/> <input type="button" value="Upload"/>	<input type="button" value="Template"/> <input type="button" value="Upload"/>
1963151612009	BHOSALE SONALI SHIVAJI	9	9	17	60
1963151612010	PATIL TEJAS SHAMRAO	9	8	15	60
1963151612026	SHINDE OMKAR SURESH	10	AB	7	50
1963151612030	SHINDE KEDAR RAMESH	9	AB	8	44
1963151612052	SANKPAL KAMLESH PRAKASH	7	9	4	39
1963151612056	PATIL VAIBHAV UTTAM	4	4	8	48
1963151612065	MUGDAR RAHUL NILESH	7	8	3	54
2063151612019	JADHAV SANKET SANJAY	7	8	3	60
2063151612020	SAWANT RUSHIRAJ RAJENDRA	6	7	4	54
2063151612021	PAWAR OMKAR BHAGAWAN	6	8	3	33
2063151612022	SNEHAL SUNIL KASHID	8	9	AB	60
2063151612023	POWAR RAHUL GANAPATI	10	9	4	54
2063151612024	MUJAWAR ASIF SHABBIR	10	7	9	57


Enrollment Number	Full Name	Assessment 2 Marks / 10	Assessment 1 Marks / 10	Mid Exam Marks / 20	End Exam Marks / 60
		Template Upload	Template Upload	Template Upload	Template Upload
2063151612025	JANGAM SANKET ASHOK	9	9	14	60
2063151612026	PATIL SOURAV SANJAY	9	8	AB	60
2063151612027	PATIL RAHUL MAHADEV	8	7	2	50
2063151612028	PATIL SAURABH PANDIT	6	9	2	48
2063151612029	PATIL DIGVIJAY BALASAHEB	3	5	10	48
2063151612030	PATIL AVADHUT RAGHUNATH	9	4	6	60
2063151612031	MANE SUNIL VISHAVNATH	7	AB	10	50
2063151612032	SAKATE AJAY SANJAY	9	7	4	54
2063151612033	BHOSALE SATYAMRAJE PANDITRAO	9	8	5	60
2063151612035	NAIK PRASANNA PRAKASH	8	6	4	60
2063151612037	DALVI SIDDHESH DHANAJI	7	7	3	53
2063151612038	CHAVAN SAIPRASAD MADHUKAR	8	7	3	60
2063151612039	MUJAWAR NAWAJSHARIF MOULA	8	AB	9	45
2063151612040	MELAKERI SHRIDHAR BASAPPA	7	6	6	47
2063151612041	PATIL SHUBHAM RAGHUNATH	8	5	9	54
2063151612042	PATIL PRASHANT ISHWARA	8	5	9	48
2063151612043	SHINDE PRANAY BABURAO	3	7	7	59
2063151612044	JADHAV SAGAR MAHIPATI	7	6	4	54
2063151612045	PATIL GAURAV KRISHNAT	5	7	5	50
2063151612046	POWAR SURAJ SANJAY	9	6	3	51
2063151612047	KOINGADE MAHESH DILIP ALIAS DIPAK	8	AB	8	42



Enrollment Number	Full Name	Continuous Assessment 2 Marks / 10	Continuous Assessment 1 Marks / 10	Mid Exam Marks / 20	End Exam Marks / 60
		<input type="button" value="Template"/> <input type="button" value="Upload"/>	<input type="button" value="Template"/> <input type="button" value="Upload"/>	<input type="button" value="Template"/> <input type="button" value="Upload"/>	<input type="button" value="Template"/> <input type="button" value="Upload"/>
2063151612048	BOLAVE VINAYAK BALU	10	7	7	54
2063151612049	CHAVAN SUSHANT BAJRANG	8	7	2	60
2063151612050	MUJAWAR ARSHAD KARIMBAKSH	9	6	3	57
2063151612051	MALI ROHIT RAMRAO	8	5	2	60
2063151612053	GAIKWAD TUSHAR MAHENDRA	7	7	3	53
2063151612054	GOURAV SANJAY PATIL	4	4	8	47
2063151612055	BIDKAR SHUBHAM APPASAHEB	4	5	8	54
2063151612056	MAHADIK ADITYA ATUL	9	5	3	60
2063151612057	SOURABH UDAY THOMBARE	8	6	4	48
2063151612062	DEVANE RAGHVENDRA SADASHIV	6	9	3	50
2063151612063	GAIKWAD NETRA GAJANAN	6	8	3	45

Subject Teacher  
  
 (Name and Signature)  
 R.U. Urunkar

HOD  
  
 (Name and Signature)

  
 Principal/Director

(Name and Signature)



DR. BABASAHEB AMBEDKAR TECHNICAL UNIVERSITY, LONERE.

Sanjeevan Engineering & Technology Institute, Panhala

Department of Mechanical Engineering

CA-I

ACADEMIC YEAR: 2021-22

SEMESTER: III

NAME OF STUDENT: KADAM NIKHIL BHIMRAO. ROLL No.: 8

CLASS: S.Y. B.Tech

MARKS: 10

DAY & DATE : Monday, 06/12/2021

SUBJECT: Fluid Mechanics (BTMEC303)



07/10

### INSTRUCTIONS:

1. All questions are compulsory.
2. Q. No. 1 to 6 are objective (1 marks each) and Q. No. 7 & 8 are descriptive (2 marks each)
3. Circle on the correct answer for objective questions. Multiple circles or ticks are not allowed and considered as zero marks.

Q. No.	Questions	Examiner Marks
1.	<p>The specific gravity of a liquid has</p> <p>(a) the same unit as that of mass density</p> <p>(b) the same unit as that of weight density</p> <p>(c) the same unit as that of specific volume</p> <p><input checked="" type="radio"/> (d) no unit</p>	1
2.	<p>Which one of the following is the CGS unit of dynamic viscosity?</p> <p>(a) Stokes (b) Pa-s</p> <p>(c) <math>m^2/s</math> <input checked="" type="radio"/> (d) Poise</p>	1
3.	<p>The specific volume of a liquid is the reciprocal of</p> <p>(a) weight density <input checked="" type="radio"/> (b) mass density</p> <p>(c) specific weight (d) specific volume</p>	1
4.	<p>If a person studies about a fluid which is at rest, what will you call his domain of study?</p> <p>(a) Fluid Mechanics <input checked="" type="radio"/> (b) Fluid Statics</p> <p>(c) Fluid Kinematics (d) Fluid Dynamics</p>	1
5.	<p>The value of the surface tension of an ideal fluid is</p> <p><input checked="" type="radio"/> (a) zero (b) unity</p> <p>(c) infinity (d) more than that of a real fluid</p>	1
6.	<p>In liquids in order to measure the viscosity of fluid experimentally we consider the variation of shear stress with respect to what property?</p> <p>(a) strain (b) shear strain</p> <p><input checked="" type="radio"/> (c) rate of shear strain (d) none of the mentioned</p>	1



7. Define the terms : (i) Weight Density (ii) Bulk modulus.

i) Weight Density :- weight density it is the ratio of weight of fluid to the volume of fluid.

$$\omega = \frac{\text{weight of fluid}}{\text{volume of fluid.}}$$

ii) Bulk Modulus :- It is the ratio of shears stress to the shears strain is called as Bulk modulus.

$$\text{Bulk modulus} = \frac{\text{shear stress.}}{\text{shear strain.}}$$

8. Define Viscosity and write its SI and CGS unit.

viscosity :- viscosity it is the variation of pressure with respect to temperature is called as viscosity.

\*CGS unit :-


\*SI unit :-

Name of the Student: Bahadure Nitin Ambardekar

Class: DSY Mechanical Roll No.: 13

Subject: Fluid Mechanics Date: 08/02/2022

Language of Answer English

Question No.	1	2	3	4	5	6	7	8	9	10	Total	out of	Examiner's Sign.
Marks obtained											12	20	

Main Answersheet + No. of Supplement = Total		
01	+	=

Supervisor's Signature

Q 1)

Q 1) → c) Surface tension force

Q 2) → a) Increases.

Q 3) → b) Circular notch.

Q 4) → 0.125m

Q 5) → d) all of the above.

Q 6) → c) Velocity.

06

Q 2) Following are the assumptions made in the derivation of Bernoulli's Equation

- 1) the fluid is ideal, viscosity is zero.
- 2) the fluid is steady
- 3) the flow is incompressible
- 4) the flow is irrotational.
- 5) the flow along stream line
- 6) the velocity is uniform over the section
- 7) only gravity force and pressure force considered.

03

98. \* Velocity Potential Function  
It is defined as a Scalar function of space and time such that its negative derivative with respect to any direction gives the fluid velocity in that direction is called as Velocity potential function

— It is denoted by  $\phi$

— For steady flow

$$\phi = f(x, y, z)$$

$$u = -\frac{\partial \phi}{\partial x}, \quad v = \frac{\partial \phi}{\partial y}, \quad w = \frac{\partial \phi}{\partial z}$$

# Stream function

— It is defined as a Scalar function of space and time such that its partial derivative with respect to any direction gives the velocity component at right angle to that direction is called as Stream function



— It is denoted by  $\psi$

— only for a two-dimensional flow

— For steady flow

$$\psi = f(x, y)$$

$$\frac{\partial \psi}{\partial x} = v, \quad \frac{\partial \psi}{\partial y} = -u$$

	DR. BABASAHEB AMBEDKAR TECHNICAL UNIVERSITY, LONERE.	
	Sanjeevan Engineering & Technology Institute, Panhala	
	Department of Mechanical Engineering	
	CA II	
	SEMESTER: III	ACADEMIC YEAR: 2021-22
	NAME OF STUDENT: KAMBLE, SHUBHAM, B	ROLL NO.: 31
	CLASS: S.E.	MARKS: 10
	DAY & DATE : Monday, 21/02/2022	TIME: 9.30am To 10.00 am
	SUBJECT: Fluid Mechanics	

10  
10

### INSTRUCTIONS:



- 1) All questions are compulsory.
- 2) Q.1 to Q.10 multiple choice question 1 mark each.
- 3) Tick mark the correct answer. multiple tick mark considered as zero marks.

Q. No.	Question	Marks
Q. 1.	Which among the following is an assumption of Hagen-Poiseuille equation? a) Fluid is compressible                      b) Fluid is uniform c) Fluid is laminar                                d) Fluid is turbulent	1
Q. 2.	The main property that affects a boundary layer is _____ a) Temperature                                    b) Pressure c) Viscosity                                         d) Surface tension	1
Q. 3.	The flow separation occurs when the fluid travels away from the _____ a) Surface    b) Fluid body c) Adverse pressure gradient                 d) Inter-molecular spaces	1
Q. 4.	How does a turbulent boundary layer produce swirls? a) Due to random motion                      b) Collision of molecules c) Due to non-uniform cross section        d) Due to eddies	1
Q. 5.	With the decrease in the viscosity, Reynolds number _____ a) Increases                                        b) Decreases c) Same    d) Independent	1
Q. 6.	Ratio of inertia force to viscous force is known as a) Grashof number                                b) Reynolds number c) Peclet number                                    d) Stanton number	1

Q. 7.	There will be a transition from laminar flow to turbulent flow when _____ <del>a) Reynolds number increases</del> b) Reynolds number decreases <del>c) Reynolds number is the same</del> d) Froude's number increases	1
Q. 8.	The friction factor in fluid flowing through pipe depends upon <del>a) Reynold's number</del> b) relative roughness of pipe surface <del>c) both a. and b.</del> d) none of the above	1
Q. 9.	The head loss through fluid flowing pipe due to friction is <del>a) the minor loss</del> <del>b) the major loss</del> <del>c) both a. and b.</del> d) none of the above	1
Q. 10.	What is the ratio of maximum velocity to average velocity, when the fluid is passing through the pipe and flow is laminar? <del>a) 3</del> <del>b) 2</del> c) 3/2      d) 2/3	1

\*\*\*\*\*END\*\*\*\*\*



	DR. BABASAHEB AMBEDKAR TECHNICAL UNIVERSITY, LONERE.	
	Sanjeevan Engineering & Technology Institute, Panhala	
	Department of Mechanical Engineering	
	CA-I	
	SEMESTER: VI	ACADEMIC YEAR: 2021-22
	NAME OF STUDENT: <i>Jangam Sanjeet A</i>	ROLL No.: <i>04</i>
	CLASS: T.Y. B. Tech	MARKS: 10
	DAY & DATE: Wednesday, 13/04/2022	Time: 3.00 pm to 3.30 pm
	SUBJECT: QTPM	

12/10

**INSTRUCTIONS:**

- All questions are compulsory.
- Q. No. 1 to 2 are objective (1 mark each). Q. No. 3 descriptive (2 marks). Q. No. 4 and 5 are descriptive (3 marks each)
- Circle on the correct answer for objective questions. Multiple circles or ticks are not allowed and considered as zero marks.

Q. No.	Questions	Examiner Marks
1.	Operation Research approach is ..... <input checked="" type="radio"/> A. multi-disciplinary <input checked="" type="radio"/> B. scientific <input type="radio"/> C. intuitive <input type="radio"/> D. collect essential data	1
2.	A feasible solution to a linear programming problem ..... <input checked="" type="radio"/> A. must satisfy all the constraints of the problem simultaneously <input type="radio"/> B. need not satisfy all of the constraints, only some of them <input type="radio"/> C. must be a corner point of the feasible region. <input type="radio"/> D. must optimize the value of the objective function	1

Q. 3. What is Operation Research? Write scope of Operation research.

(2 marks)

Operation research:-

Operation research is scientific approach to problem solving and decision making based in management. In OR problems are breaking down in component & then resolved by defined steps steps by using mathematics.

- Defense application
- In Industry
- Marketing.
- Programming decision.

Q. 4. A company manufactures two types of products,  $P_1$  and  $P_2$ . Each product uses lathe and milling machine. The processing time per unit of  $P_1$  on the lathe is 5 hours and on the milling machine is 4 hours. The processing time per unit of  $P_2$  on the lathe is 10 hours and on the milling machine 4 hours. The maximum number of hours available per week on the lathe and the milling machine are 60 hours and 40 hours respectively. Also the profit per unit of selling  $P_1$  and  $P_2$  are Rs. 6 and Rs. 8 respectively. Formulate a linear programming model to determine the production volume of each of the products such that, the total profit is maximized. (3 marks)

→  $x_1, x_2$  are the manufacturer of product  $P_1$  &  $P_2$

machine	Product 1	Product 2	available hr/week
Lathe	5	10	60
milling	4	4	40
	6	8	

→ objective function, maximise  $Z = 6x_1 + 8x_2$

subject to

$$5x_1 + 10x_2 \leq 60$$

$$4x_1 + 4x_2 \leq 40$$

OB

non-negative constraints

$$x_1, x_2 \geq 0$$

Q. 5. Solve graphically the following LPP:

(3 marks)

Minimise

$$Z = 40X_1 + 24X_2$$

Subject to

$$20X_1 + 50X_2 \geq 4800$$

$$80X_1 + 50X_2 \geq 7200$$

$$X_1, X_2 \geq 0$$

$$\rightarrow 20x_1 + 50x_2 = 4800$$

$$x_1 = 0 \quad x_2 = 96$$

$$x_2 = 0 \quad x_1 = 240$$

$$80x_1 + 50x_2 = 7200$$

$$x_1 = 0 \quad x_2 = 144$$

$$x_2 = 0 \quad x_1 = 90$$

pt	$x_1$	$x_2$	$Z = 40x_1 + 24x_2$
O	0	0	0
A	144	0	3456 ← minimise
E	45	75	3600
B	90	0	3600

$x_1 = 0$  &  $x_2 = 144$  are the minimum optimal sol<sup>n</sup>

$$\boxed{40x_1 + 24x_2 = 3456}$$

OB

No. C/F No.

2928

SHIVAJI UNIVERSITY, KOLHAPUR  
Centimeter Graph Paper

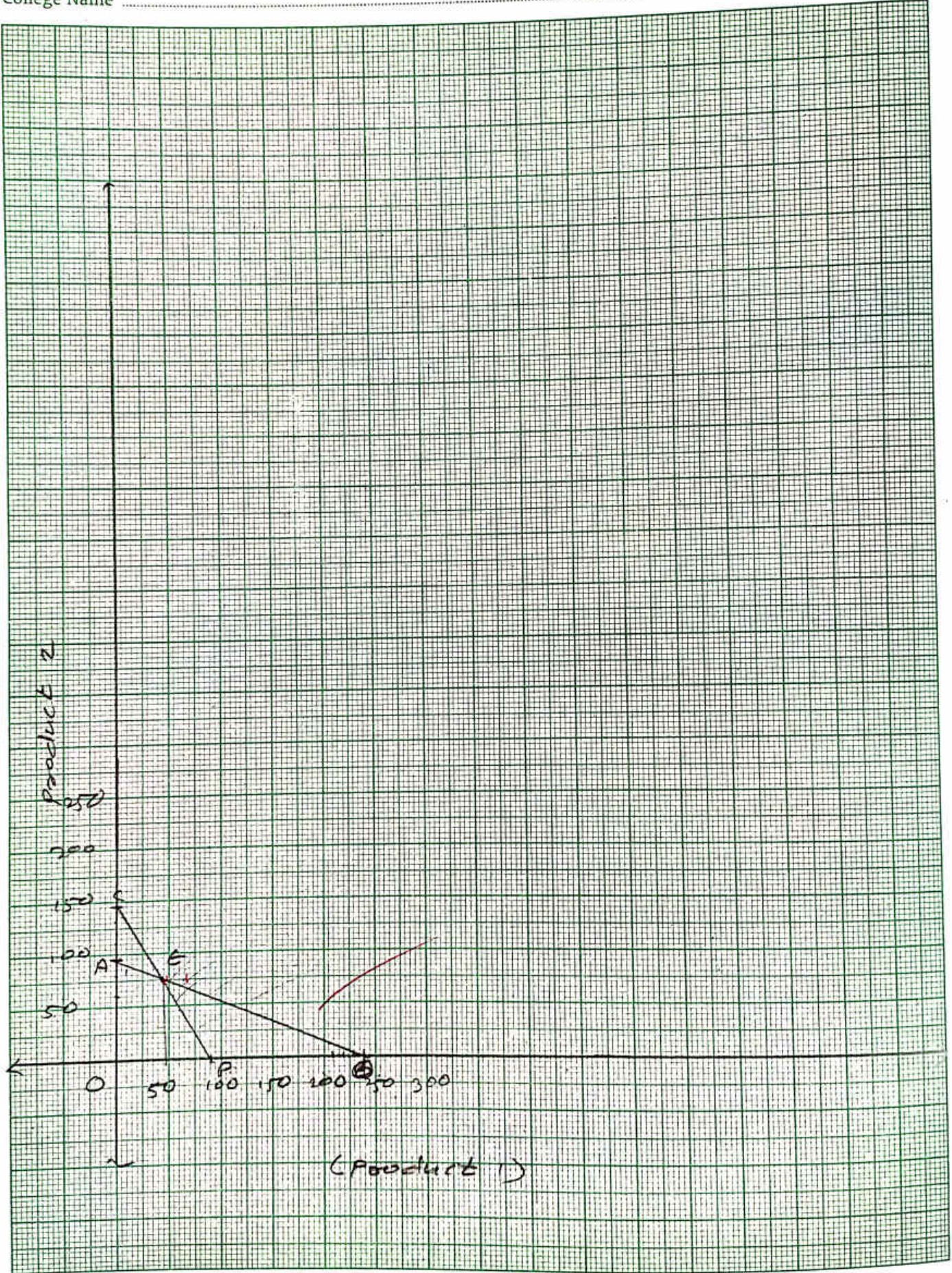
Code No. :

Q. No. ....

..... Examination

College Name .....

Seat No.




Name of the Student : Nehru Gajanan Gaikwad.

Class : TY mechanical Roll No. : 21

Subject : QTPM Date : 18-05-22

Language of Answer \_\_\_\_\_

Question No.	1	2	3	4	5	6	7	8	9	10	Total	out of	Examiner's Sign.
Marks obtained											07+05 =12	20	

Main Answersheet + No. of Supplement = Total		
01	+	=

  
Supervisor's Signature

- Q
- ① This innovative science of operations Research was discovered during world war II.
  - ② An Iso-profit line represents - An infinite number of solutions all of which yield the same profit.
  - ③ Decision variable are entities whose value is determined from the solution of LPP.
  - ④ The region of feasible solution in LPP graphical method is called feasible region.
  - ⑤ When the solution is degenerate in transportation problem, we add a epsilon.
  - ⑥ Hungarian method is used in Assignment Problem.

05

Q7.

→ Maximize  $Z = 10x_1 + 15x_2 + 20x_3$

subjected to

$$2x_1 + 4x_2 + 6x_3 \leq 24$$

$$3x_1 + 9x_2 + 6x_3 \leq 30$$

$$x_1, x_2, x_3 \geq 0$$

$$Z = 10x_1 + 15x_2 + 20x_3 + 0s_1 + 0s_2$$

$$2x_1 + 4x_2 + 6x_3 + s_1 = 24$$

$$3x_1 + 9x_2 + 6x_3 + s_2 = 30$$

$$x_1, x_2, x_3, s_1, s_2 \geq 0$$

Simple table - not optimal sol<sup>n</sup>.

Basic	$x_1$	$x_2$	$x_3$	$s_1$	$s_2$	b1	$b_i / a_{ij}$
$s_1$ 0	2	4	6	1	0	24	4
$s_2$ 0	3	9	6	0	1	30	5
C <sub>j</sub>	10	15	20	0	0		
Sol <sup>n</sup>	0	0	0	24	30		outgoing variable (key row)
$\Delta_j = C_j - z_j$	10	15	20	0	0		

↑ incoming variable (key column)

Replacement row,  $\frac{1}{2}, \frac{2}{3}, 1, \frac{1}{6}, 0, 4$

old row - key element  $\times$  replacement row  
 In old row = new row

$$3 - 6 \times \frac{1}{3} = 1$$

$$9 - 6 \times \frac{2}{3} = 5$$

$$6 - 6 \times 1 = 0$$

$$0 - 6 \times \frac{1}{6} = -1$$

$$1 - 6 \times \frac{1}{6} = 0$$

$$30 - 6 \times 4 = 6$$

### Simplex table - 2 Not optimal sol<sup>n</sup>

Basic	$x_1$	$x_2$	$x_3$	$s_1$	$s_2$	$b_i$	$b_i/a_{ij}$
$x_3$ 20	1/3	2/3	1	1/6	0	4	12
$s_2$ 0	1	5	0	-1	1	6	6 ←
$c_j$	10	15	20	0	0		outgoing
sol <sup>n</sup>	0	0	4	0	6		variable
$\Delta_j = c_j - z_j$	10/3	5/3	0	-10/3	0		

↑  
incoming variable.

Replacement row = 1, 5, 0, -1, 1, 6

Old row = old row key  $\times$  Replacement row = New row element

$$\frac{1}{3} - 1/3 \times 1 = 0$$

$$2/3 - 1/3 \times 5 = -1$$

$$1 - 1/3 \times 0 = 1$$

$$1/6 - 1/3 \times -1 = 1/2$$

$$0 - 1/3 \times 1 = -1/3$$

$$4 - 1/3 \times 6 = 2$$

### Simplex table - 3 - optimal sol<sup>n</sup>

Basic	$x_1$	$x_2$	$x_3$	$s_1$	$s_2$	$b_i$
$x_3$ 20	0	-1	1	1/2	-1/3	2
$x_1$ 10	1	5	0	-1	1	6
$c_j$	10	15	20	0	0	
sol <sup>n</sup>	6	0	2	0	0	
$\Delta_j = c_j - z_j$	0	-5	0	0	-10/3	

The all  $\Delta_j$  values are zero and negative then given sol<sup>n</sup> is optimal sol<sup>n</sup>.

$$x_1 = 6, x_2 = 0, x_3 = 2, s_1 = 0, s_2 = 0$$

$$z = 10x_1 + 15x_2 + 20x_3 + 0s_1 + 0s_2$$

$$z = (10 \times 6) + (15 \times 0) + (20 \times 2) + (0 \times 0) + (0 \times 0)$$

$$z = 100$$

✓

**Suppliment**

No. \_\_\_\_\_

Name of the Student Bhasule Satyamraje Pandit Rao

Class : TY Mech

Roll No. : 06

Subject : GTPM

Date : 21/6/22

$5 \times 5 = 10$

Supervisor's Signature

Q 11

Operator

	1	2	3	4	5
1	10	12	15	12	8
Job 2	7	16	14	14	11
3	13	14	7	9	9
4	12	10	11	13	10
5	8	13	15	11	15

Phase-I

Operator

	1	2	3	4	5	Row Mini
1	10	12	15	12	8	8
2	7	16	14	14	11	7
Job 3	13	14	7	9	9	7
4	12	10	11	13	10	10
5	8	13	15	11	15	8

operator

	1	2	3	4	5
1	2	4	7	4	0
2	0	4	7	7	4
Job 3	6	7	0	2	2
4	2	0	1	3	0
5	0	5	7	3	7
Column Mini	0	0	0	2	0



### Operators

		1	2	3	4	5
Job	1	2	4	7	2	0
	2	0	9	7	5	4
	3	6	7	0	0	2
	4	2	0	1	1	0
	5	0	5	7	1	7

### Operators

		1	2	3	4	5
Job	1	2	4	7	2	0
	2	0	9	7	5	4
	3	6	7	0	0	2
	4	2	0	1	1	0
	5	0	5	7	1	7

### Operators

		1	2	3	4	5
Job	1	2	4	6	2	0
	2	0	9	6	4	4
	3	7	8	0	0	3
	4	2	0	0	0	0
	5	0	5	6	0	7

No.	Operator	Time
1	5	8
2	1	7
3	3	7
4	2	10
5	4	11

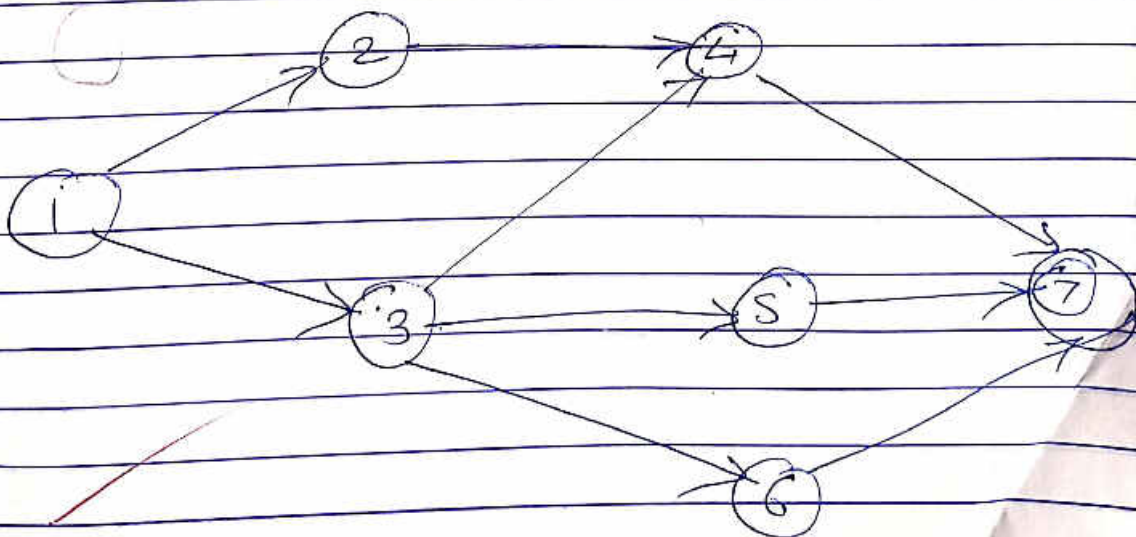
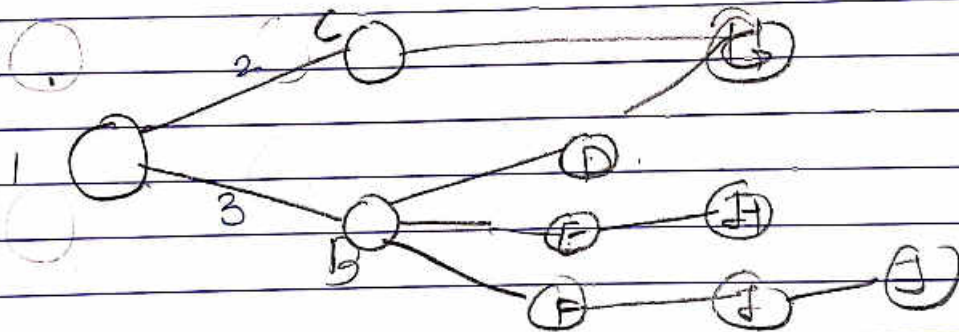
Processing Time      48 hr.

0)

Case)

Activity	Immediate Predecessor	Duration
A	-	5
B	-	4
C	A	8
D	B	8
E	B	8
F	B	5
G	C, D	8
H	E, I	22
I	F	2
J	F	12

Network Dia.



$$A - C - G = 5 + 8 + 8 = 21$$

$$B - D - G = 4 + 8 + 8 = 20$$

$$B - E - H = 4 + 8 + 22 = \underline{\underline{34}}$$

$$B - F - J = 4 + 5 + 12 = 21$$

$$B - F - J - H = 4 + 5 + 2 + 22 = 33$$

Critical path = B - E - H

Critical duration = 34

or

Summer Semester Examinations 2022

MECHENG\_SEM6 - B.Tech MECH Sem 6

[Show](#)Winter Semester Examinations 2021

MECHENG\_SEM5 - B.Tech MECH Sem 5

[Show](#)Summer Semester Examinations 2021

BTECH\_MECHENG\_SEM4 - B.Tech MECH Sem 4

[Show](#)Winter Semester Examinations 2020

BTECH\_MECHENG\_SEM3 - B.Tech MECH Sem 3

Subject Code	Subject Name	Total Credits	Max Marks	CA1	CA2	MTE	IPR	PR	ETE	REM	Grace Marks	Total Marks	Out of 100 Marks	Grade	Grade Points	Result
BTBSC301	Engineering Mathematics-III	4	100	9	10	20	-	-	60	-	-	99	99	EX	10	PASS
BTMEF310	Field Training	1	50	-	22	-	-	21	-	-	-	43	86	AA	9	PASS
BTMEC302	Material Science and Metallurgy	4	100	10	10	20	-	-	60	-	-	100	100	EX	10	PASS
BTMEC303	Fluid Mechanics	4	100	10	10	18	-	-	60	-	-	98	98	EX	10	PASS
BTMEC304	Machine Drawing and CAD	2	100	10	10	20	-	-	60	-	-	100	100	EX	10	PASS
BTMEC305	Thermodynamics	4	100	9	10	19	-	-	60	-	-	98	98	EX	10	PASS
BTMEL307	Materials Science and Metallurgy Lab	1	50	14	14	-	9	9	-	-	-	46	92	EX	10	PASS
BTHM3401	Basic Human Rights	AU	50	23	24	-	-	-	-	-	-	47	94	PP	0	PASS
BTMEL308	Fluid Mechanics Lab	1	50	14	14	-	9	9	-	-	-	46	92	EX	10	PASS
BTMEL309	Machine Drawing and CAD Lab	2	50	13	14	-	10	10	-	-	-	47	94	EX	10	PASS

## Current Semester Performance

## Cumulative Performance

Credits	Grade Points	SGPA	Credits	Grade Points	CGPA
23	229	9.96	60	544	9.07

Summer Semester Examinations 2022

## MECHENG\_SEM6 - B.Tech MECH Sem 6

[Show](#)Winter Semester Examinations 2021

## MECHENG\_SEM5 - B.Tech MECH Sem 5

[Show](#)Summer Semester Examinations 2021

## BTECH\_MECHENG\_SEM4 - B.Tech MECH Sem 4

Subject Code	Subject Name	Total Credits	Max Marks	CA1	CA2	MTE	IPR	PR	ETE	REM	Grace Marks	Total Marks	Out of 100 Marks	Grade	Grade Points	Result
BTMEC401	Manufacturing Processes-I	3	100	10	10	20	-	-	60	-	-	100	100	EX	10	PASS
BTMEL410	Numerical Methods Lab	1	50	13	13	-	9	9	-	-	-	44	88	AA	9	PASS
BTMEC402	Theory of Machines-I	4	100	10	10	20	-	-	60	-	-	100	100	EX	10	PASS
BTMEC403	Strength of Materials	4	100	10	10	20	-	-	60	-	-	100	100	EX	10	PASS
BTMEC404	Numerical Methods in Mechanical Engineering	3	100	10	9	20	-	-	60	-	-	99	99	EX	10	PASS
BTID405	Product Design Engineering	2	50	13	13	-	9	9	-	-	-	44	88	AA	9	PASS
BTHM3402	Interpersonal Communication Skills and Self Development for Engineer	3	100	10	9	19	-	-	60	-	-	98	98	EX	10	PASS
BTMEL407	Manufacturing Processes Lab - I	1	50	15	15	-	10	10	-	-	-	50	100	EX	10	PASS
BTMEL408	Theory of Machines Lab-I	1	50	15	15	-	10	9	-	-	-	49	98	EX	10	PASS
BTMEL409	Strength of Materials Lab	1	50	14	15	-	10	9	-	-	-	48	96	EX	10	PASS

## Current Semester Performance

## Cumulative Performance

Credits	Grade Points	SGPA	Credits	Grade Points	CGPA
23	227	9.87	83	771	9.29



Summer Semester Examinations 2022

MECHENG\_SEM6 - B.Tech MECH Sem 6

Show

Winter Semester Examinations 2021

MECHENG\_SEM5 - B.Tech MECH Sem 5

Show

Summer Semester Examinations 2021

BTECH\_MECHENG\_SEM4 - B.Tech MECH Sem 4

Show

Winter Semester Examinations 2020

BTECH\_MECHENG\_SEM3 - B.Tech MECH Sem 3

Subject Code	Subject Name	Total Credits	Max Marks	CA1	CA2	MTE	IPR	PR	ETE	REM	Grace Marks	Total Marks	Out of 100 Marks	Grade	Grade Points	Result
BTBSC301	Engineering Mathematics-III	4	100	4	5	8	-	-	56	-	-	73	73	BC	7.5	PASS
BTMEF310	Field Training	1	50	-	21	-	-	22	-	-	-	43	86	AA	9	PASS
BTMEC302	Material Science and Metallurgy	4	100	10	10	18	-	-	60	-	-	98	98	EX	10	PASS
BTMEC303	Fluid Mechanics	4	100	8	9	18	-	-	60	-	-	95	95	EX	10	PASS
BTMEC304	Machine Drawing and CAD	2	100	9	10	18	-	-	60	-	-	97	97	EX	10	PASS
BTMEC305	Thermodynamics	4	100	8	10	18	-	-	60	-	-	96	96	EX	10	PASS
BTMEL307	Materials Science and Metallurgy Lab	1	50	12	11	-	8	7	-	-	-	38	76	BB	8	PASS
BTHM3401	Basic Human Rights	AU	50	21	20	-	-	-	-	-	-	41	82	PP	0	PASS
BTMEL308	Fluid Mechanics Lab	1	50	12	12	-	6	7	-	-	-	37	74	BC	7.5	PASS
BTMEL309	Machine Drawing and CAD Lab	2	50	12	11	-	8	9	-	-	-	40	80	BB	8	PASS

Current Semester Performance

Cumulative Performance

Credits	Grade Points	SGPA	Credits	Grade Points	CGPA
23	211	9.17	23	211	9.17



Summer Semester Examinations 2022

MECHENG\_SEM6 - B.Tech MECH Sem 6

Show

Winter Semester Examinations 2021

MECHENG\_SEM5 - B.Tech MECH Sem 5

Show

Summer Semester Examinations 2021

BTECH\_MECHENG\_SEM4 - B.Tech MECH Sem 4

Subject Code	Subject Name	Total Credits	Max Marks	CA1	CA2	MTE	IPR	PR	ETE	REM	Grace Marks	Total Marks	Out of 100 Marks	Grade	Grade Points	Result
BTMEC401	Manufacturing Processes-I	3	100	10	10	18	-	-	60	-	-	98	98	EX	10	PASS
BTMEL410	Numerical Methods Lab	1	50	8	7	-	4	5	-	-	-	24	48	EE	5	PASS
BTMEC402	Theory of Machines-I	4	100	10	9	17	-	-	54	-	-	90	90	AA	9	PASS
BTMEC403	Strength of Materials	4	100	10	10	20	-	-	60	-	-	100	100	EX	10	PASS
BTMEC404	Numerical Methods in Mechanical Engineering	3	100	5	8	13	-	-	60	-	-	86	86	AA	9	PASS
BTID405	Product Design Engineering	2	50	10	10	-	9	9	-	-	-	38	76	BB	8	PASS
BTHM3402	Interpersonal Communication Skills and Self Development for Engineer	3	100	10	10	17	-	-	60	-	-	97	97	EX	10	PASS
BTMEL407	Manufacturing Processes Lab - I	1	50	14	14	-	9	9	-	-	-	46	92	EX	10	PASS
BTMEL408	Theory of Machines Lab-I	1	50	14	14	-	10	9	-	-	-	47	94	EX	10	PASS
BTMEL409	Strength of Materials Lab	1	50	14	15	-	10	9	-	-	-	48	96	EX	10	PASS

Current Semester Performance

Cumulative Performance

Credits	Grade Points	SGPA	Credits	Grade Points	CGPA
23	214	9.30	46	425	9.24

Summer Semester Examinations 2022

MECHENG\_SEM6 - B.Tech MECH Sem 6

[Show](#)Winter Semester Examinations 2021

MECHENG\_SEM5 - B.Tech MECH Sem 5

[Show](#)Summer Semester Examinations 2021

BTECH\_MECHENG\_SEM4 - B.Tech MECH Sem 4

[Show](#)Winter Semester Examinations 2020

BTECH\_MECHENG\_SEM3 - B.Tech MECH Sem 3

Subject Code	Subject Name	Total Credits	Max Marks	CA1	CA2	MTE	IPR	PR	ETE	REM	Grace Marks	Total Marks	Out of 100 Marks	Grade	Grade Points	Result
BTBSC301	Engineering Mathematics-III	4	100	10	10	19	-	-	60	-	-	99	99	EX	10	PASS
BTMEF310	Field Training	1	50	-	22	-	-	22	-	-	-	44	88	AA	9	PASS
BTMEC302	Material Science and Metallurgy	4	100	10	10	14	-	-	60	-	-	94	94	EX	10	PASS
BTMEC303	Fluid Mechanics	4	100	10	10	19	-	-	60	-	-	99	99	EX	10	PASS
BTMEC304	Machine Drawing and CAD	2	100	8	10	20	-	-	60	-	-	98	98	EX	10	PASS
BTMEC305	Thermodynamics	4	100	9	9	19	-	-	60	-	-	97	97	EX	10	PASS
BTMEL307	Materials Science and Metallurgy Lab	1	50	11	12	-	7	7	-	-	-	37	74	BC	7.5	PASS
BTHM3401	Basic Human Rights	AU	50	21	21	-	-	-	-	-	-	42	84	PP	0	PASS
BTMEL308	Fluid Mechanics Lab	1	50	12	11	-	7	6	-	-	-	36	72	BC	7.5	PASS
BTMEL309	Machine Drawing and CAD Lab	2	50	13	13	-	9	10	-	-	-	45	90	AA	9	PASS

## Current Semester Performance

## Cumulative Performance

Credits	Grade Points	SGPA	Credits	Grade Points	CGPA
23	222	9.65	23	222	9.65



Summer Semester Examinations 2022

MECHENG\_SEM6 - B.Tech MECH Sem 6

[Show](#)Winter Semester Examinations 2021

MECHENG\_SEM5 - B.Tech MECH Sem 5

[Show](#)Summer Semester Examinations 2021

BTECH\_MECHENG\_SEM4 - B.Tech MECH Sem 4

Subject Code	Subject Name	Total Credits	Max Marks	CA1	CA2	MTE	IPR	PR	ETE	REM	Grace Marks	Total Marks	Out of 100 Marks	Grade	Grade Points	Result
BTMEC401	Manufacturing Processes-I	3	100	10	10	20	-	-	60	-	-	100	100	EX	10	PASS
BTMEL410	Numerical Methods Lab	1	50	13	14	-	10	9	-	-	-	46	92	EX	10	PASS
BTMEC402	Theory of Machines-I	4	100	10	10	20	-	-	60	-	-	100	100	EX	10	PASS
BTMEC403	Strength of Materials	4	100	10	10	20	-	-	60	-	-	100	100	EX	10	PASS
BTMEC404	Numerical Methods in Mechanical Engineering	3	100	9	10	20	-	-	60	-	-	99	99	EX	10	PASS
BTID405	Product Design Engineering	2	50	14	14	-	9	9	-	-	-	46	92	EX	10	PASS
BTHM3402	Interpersonal Communication Skills and Self Development for Engineer	3	100	10	9	19	-	-	60	-	-	98	98	EX	10	PASS
BTMEL407	Manufacturing Processes Lab - I	1	50	15	15	-	10	10	-	-	-	50	100	EX	10	PASS
BTMEL408	Theory of Machines Lab-I	1	50	15	15	-	10	9	-	-	-	49	98	EX	10	PASS
BTMEL409	Strength of Materials Lab	1	50	14	15	-	10	9	-	-	-	48	96	EX	10	PASS

## Current Semester Performance

## Cumulative Performance

Credits	Grade Points	SGPA	Credits	Grade Points	CGPA
23	230	10.00	46	452	9.83



DR. BABASAHEB AMBEDKAR TECHNICAL UNIVERSITY, LONERE.

Sanjeevan Engineering & Technology Institute, Panhala

Department of Mechanical Engineering

CA-I



SEMESTER: 1

ACADEMIC YEAR: 2021-22

NAME OF STUDENT: *Granditkor Sandhya Apporoo* ROLL No.: *101*

CLASS: F.Y. Betch Div-A

MARKS: 10

DAY & DATE : Monday, 07/02/2022

SUBJECT: Energy and Environment Engineering

**INSTRUCTIONS:**

1. All questions are compulsory.
2. Circle on the correct answer for objective questions. Multiple circles or ticks are not allowed and considered as zero mark.

*10/10*  
*17*

Q. No.	Questions	Examiner Marks
1.	In all power plants, minimum quantity of fuel is required in..... a) Thermal power plant      b) Hydro electric power plant c) Nuclear power plant      d) Gas turbine plant	
2.	Which of the following is renewable source of energy? a) solar energy      b) natural gas c) mineral      d) coal	
3.	Which of the following is required for the installation of a wind turbine system? a) A weak wind flow b) A consistent and strong wind flow c) Still air d) A consistent wind flow with obstructions	
4.	Renewable energy plants require _____ than traditional generators. a) more fuel b) less maintenance c) higher operating cost d) more uranium	
5.	_____ energy sources provide energy in dilute form. a) Non-Renewable      b) Conventional c) Nuclear      d) Renewable	

6. Based on the following options, choose the correct option.  
Statement I: Non-Conventional energy is available in nature free of cost.  
Statement II: Non-Conventional energy is exhaustible in nature.

- a) Statement I and Statement II are correct and Statement II is the correct explanation of Statement I
- b) Statement I and Statement II are correct and Statement II is not the correct explanation of Statement I
- c) Statement I is true and Statement II is false
- d) Statement II is true and Statement I is false

7. A moderator, in nuclear power plants, is a medium introduced into the fuel mass in order to \_\_\_\_\_

- a) control the reaction
- b) reduce the temperature
- c) extract heat from nuclear reaction
- d) slow down the speed of fast moving neutrons

8. Which Uranium isotope is used in nuclear power plants?

- a) U-235
- b) U-234
- c) U-215
- d) U-218

9. Which of these Energy resources is/are widely used in industries?

- a) Coal and Gasoline
- b) Wood
- c) Biogas
- d) Crop Residue

10. What is a solar collector?

- a) A system to collect heat by absorbing sunlight
- b) A system to collect rainwater using sunlight
- c) A system to collect electricity by using sunlight
- d) A device to reflect sunlight back



DR. BABASAHEB AMBEDKAR TECHNICAL UNIVERSITY, LONERE.

Sanjeevan Engineering & Technology Institute, Panhala

Department of Mechanical Engineering

CA-II

ACADEMIC YEAR: 2021-22

SEMESTER: 1

NAME OF STUDENT: *Ganditkar Sandhya* ROLL No.: 101

CLASS: F.Y. Div-A

MARKS: 10

DAY & DATE : Tuesday, 05/04/2022

SUBJECT: Energy and Environment Engineering



### INSTRUCTIONS:

1. All questions are compulsory.
2. Circle on the correct answer for objective questions. Multiple circles or ticks are not allowed and considered as zero mark.

09/10

Q. No.	Questions	Examiner Marks
1.	Sound becomes hazardous noise pollution at decibels a) above 30      b) above 80 <input checked="" type="checkbox"/> c) above 100      d) above 120	c ✓
2.	The ozone layer in the atmosphere acts as an efficient filter for.. a) X-rays <input checked="" type="checkbox"/> b) UV-A rays      c) UV-B rays      d) IR rays	b ✓
3.	Which of these is water borne disease? a) gastroenteritis      b) typhoid <input checked="" type="checkbox"/> c) cholera <del>d) all of these</del>	c ✓
4.	Mobility analysers are used to measure particle size of a) 0.02-10 micron <input checked="" type="checkbox"/> b) 0.008-1 micron      c) 0.005-0.2 micron <del>d) 0.001-100 micron</del>	b ✓
5.	Impacters are used to measure particle size of <input checked="" type="checkbox"/> a) 0.02-10 micron      b) 0.008-1 micron      c) 0.005-0.2 micron <del>d) 0.001-100 micron</del>	a ✓
6.	Municipal solid waste was implemented in a) 2010 <input checked="" type="checkbox"/> b) 2005 <input checked="" type="checkbox"/> c) 2000      d) 1990	c ✓
7.	A diesel generator has decibel rating a) 100      b) 110 <input checked="" type="checkbox"/> c) 120      d) 130	c ✓
8.	Acid rain is caused by <input checked="" type="checkbox"/> a) SO <sub>x</sub> and NO <sub>x</sub> b) CO <sub>2</sub> <input checked="" type="checkbox"/> c) nitrogen      d) NH <sub>3</sub>	a ✓
9.	Pyrolysis occurs at temperature above _____ degree celcius a) 300 <input checked="" type="checkbox"/> b) 400 <input checked="" type="checkbox"/> c) 500      d) 600	b ✓
10.	Air pollution is likely to be most severe a) in the summer      b) in the interior of continents <input checked="" type="checkbox"/> c) when the atmosphere is turbulent      d) near the center of an anticyclone	c ✓



SEMESTER: 1

ACADEMIC YEAR: 2021-22

NAME OF STUDENT: Pranab Kant KambaleROLL No.: 102

CLASS: F.Y. Div-A

MARKS: 10

DAY &amp; DATE : Tuesday, 05/04/2022

SUBJECT: Energy and Environment Engineering

08  
/ 10

## INSTRUCTIONS:

- All questions are compulsory.
- Circle on the correct answer for objective questions. Multiple circles or ticks are not allowed and considered as zero mark.

Q. No.	Questions	Examiner Marks
1.	Sound becomes hazardous noise pollution at decibels a) above 30      b) above 80 <u>c) above 100</u> d) above 120	C ✓
2.	The ozone layer in the atmosphere acts as an efficient filter for.. a) X-rays      b) <u>UV-A rays</u> c) UV-B rays      d) IR rays	b ✓
3.	Which of these is water borne disease? a) gastonteritis      b) typhoid      c) cholera <u>d) all of these</u>	C ✓
4.	Mobility analysers are used to measure particle size of a) 0.02-10 micron      b) 0.008-1 micron      c) 0.005-0.2 micron <u>d) 0.001-100 micron</u>	d ✓
5.	Impacters are used to measure particle size of <u>a) 0.02-10 micron</u> b) 0.008-1 micron      c) 0.005-0.2 micron      d) 0.001-100 micron	a ✓
6.	Municipal solid waste was implemented in a) 2010 <u>b) 2005</u> <u>c) 2000</u> d) 1990	b ✓
7.	A diesel generator has decibel rating a) 100 <u>b) 110</u> <u>c) 120</u> d) 130	c ✓
8.	Acid rain is caused by <u>a) SO<sub>x</sub> and NO<sub>x</sub></u> b) CO <sub>2</sub> <u>c) nitrogen</u> d) NH <sub>3</sub>	a ✓
9.	Pyrolysis occurs at temperature above _____ degree celcius a) 300 <u>b) 400</u> <u>c) 500</u> d) 600	b ✓
10.	Air pollution is likely to be most severe a) in the summer      b) in the interior of continents <u>c) when the atmosphere is turbulent</u> d) near the center of an anticyclone	c ✓

Name of the Student Joaquina Gabriel lobo

Class: F.Y

Roll No.: 221

Subject: Mathematics

Date: 21/06/2022

Supervisor's Signature

CA-1-m-1

Q1

$$1 \quad x^6 - 1 = 0$$

$$x^6 = 1$$

$$x = (1)^{1/6}$$

$$= [\cos 0 + i \sin 0]^{1/6}$$

$$= [\cos 2k\pi + i \sin 2k\pi]^{1/6}$$

$$= \left[ \cos \frac{2k\pi}{6} + i \sin \frac{2k\pi}{6} \right]$$

where  $k = 0, 1, 2, 3, 4, 5$

put  $k=0 \quad x_1 = \cos 0 + i \sin 0$

$k=1 \quad x_2 = \cos \frac{2\pi}{6} + i \sin \frac{2\pi}{6}$

$k=2 \quad x_3 = \cos \frac{4\pi}{6} + i \sin \frac{4\pi}{6}$

$k=3 \quad x_4 = \cos \pi + i \sin \pi$

$k=4 \quad x_5 = \cos \frac{8\pi}{6} + i \sin \frac{8\pi}{6}$

$k=5 \quad x_6 = \cos \frac{10\pi}{6} + i \sin \frac{10\pi}{6}$

2/10

3  $\sin 4\theta$

$$\rightarrow (\cos\theta + i\sin\theta)^n = \cos n\theta + i\sin n\theta$$

$$\begin{array}{ccccccc} & & & & 1 & & \\ & & & & 2 & & \\ & & & 1 & 2 & & 1 \\ & & 1 & 3 & 3 & & 1 \\ & 1 & 4 & 6 & 4 & & 1 \end{array}$$

$$(\cos\theta + i\sin\theta)^4 = \cos 4\theta + i\sin 4\theta$$

$$\begin{array}{c} i^2 \cdot i \\ -1 \cdot i \\ -i \end{array}$$

$$(\cos\theta + i\sin\theta)^4 = \cos^4\theta + 4\cos^3\theta \cdot i\sin\theta + 6\cos^2\theta \cdot i^2\sin^2\theta + 4\cos\theta \cdot i\sin^3\theta + i\sin^4\theta$$

$$= \cos^4\theta + 4\cos^3\theta \cdot i\sin\theta - 6\cos^2\theta \cdot \sin^2\theta - 4\cos\theta \cdot i\sin^3\theta + \sin^4\theta$$

$$\cos 4\theta + i\sin 4\theta = \cos^4\theta - 6\cos^2\theta \cdot \sin^2\theta + \sin^4\theta + i(4\cos^3\theta \cdot \sin\theta - 4\cos\theta \cdot \sin^3\theta)$$

$$\boxed{\sin 4\theta = 4\cos^3\theta \cdot \sin\theta - 4\cos\theta \cdot \sin^3\theta}$$

2  $x+iy$

$$\frac{(3+i)^2}{2+i}$$

$$\rightarrow = \frac{3^2 + 6i + i^2}{2+i}$$

$$= \frac{16 + 4i - 6i^2}{4+i}$$

$$= \frac{9 + 6i - 1}{2+i}$$

$$= \frac{22 + 4i}{5}$$

$$= \frac{8 + 6i}{2+i}$$

$$\boxed{= \frac{22}{5} + \frac{4i}{5}}$$

$$= \frac{8 + 6i \times (2-i)}{2+i \times 2-i}$$

$$= \frac{16 - 8i + 12i - 6i^2}{(2)^2 - (i)^2}$$

Name of the Student Joaquina Crabbie

Class: F.Y

Roll No.: 221

Subject: Mathematics

Date: 21/06/22

  
Supervisor's Signature

Q2

1  $(2xy + y^2)dx + (x^2 + 2xy + \sin y)dy = 0$

$$M = 2xy + y^2$$

$$N = x^2 + 2xy + \sin y$$

$$\frac{\partial M}{\partial y} = 2x + 2y$$

$$\frac{\partial N}{\partial x} = 2x + 2y$$

$$\therefore \frac{\partial M}{\partial y} = \frac{\partial N}{\partial x}$$

$\therefore$  Given eq<sup>n</sup> is exact diff<sup>n</sup> eq<sup>n</sup>.

Solution is.

$$= \int_{y \text{ const}} M dx + \int_{\text{terms free from } x} N dy$$

$$= \int_{y \text{ const}} 2xy + y^2 + \int \sin y$$

$$= 2y \frac{x^2}{2} + y^2 \cdot x + (-\cos y)$$

$$= yx^2 + xy^2 - \cos y$$



$$\arg(z+1) = \frac{\pi}{6} \text{ and } \arg(z-1) = \frac{2\pi}{3} \text{ find } z$$

$$\arg(x+iy+1) = \frac{\pi}{6}$$

$$\arg(x+1+iy) = \frac{\pi}{6}$$

$$\tan^{-1} \frac{y}{x+1} = \frac{\pi}{6}$$

$$y + xy^2 dx + x - x^2y dy = 0 \quad \text{--- (1)}$$

$$M = y + xy^2$$

$$N = x - x^2y$$

$$\frac{\partial M}{\partial y} = 1 + 2xy$$

$$\frac{\partial N}{\partial x} = 1 - 2xy$$

$$\frac{\partial M}{\partial y} \neq \frac{\partial N}{\partial x}$$

The given eq<sup>n</sup> is non-exact.

$$f(x,y) y dx + g(x,y) x dy = 0$$

$$= \frac{\frac{\partial M}{\partial y} - \frac{\partial N}{\partial x}}{Mx - Ny} \text{ I.F.} = \frac{1}{Mx - Ny}$$

$$= \frac{1}{xy + x^2y^2 - xy + x^2y^2}$$

~~$$= \frac{1 + 2xy - 1 - 2xy}{x - x^2y}$$~~

$$\text{I.F.} = \frac{1}{2x^2y^2}$$

~~$$\frac{1}{My} =$$~~

Multiply eq<sup>n</sup> (1) by I.F.

$$\frac{y + xy^2}{2x^2y^2} dx + \frac{x - x^2y}{2x^2y^2} dy = 0$$

~~$$\frac{1}{2x^2y} + \frac{1}{2x} + \frac{1}{2xy^2} - \frac{1}{2y} = 0$$~~

~~$$\frac{1}{2x} \left( \frac{1}{xy} + 1 \right) + \frac{1}{2y} \left( \frac{1}{xy} - 1 \right) = 0$$~~

~~$$\frac{xy + x^2}{2y}$$~~

$$4 \quad x^9 - x^5 + x^4 - 1 = 0$$

$$x^5(x^4 - 1) + (x^4 - 1) = 0$$

$$(x^4 - 1)(x^5 + 1) = 0$$

$$x^4 = 1 \quad \text{or} \quad x^5 = -1$$

$$x = 1^{1/4} \quad x = (-1)^{1/5}$$

$$x = 1^{1/4}$$

$$= [\cos 0 + i \sin 0]^{1/4}$$

$$= \cos \frac{2k\pi}{4} + i \sin \frac{2k\pi}{4}$$

$$k = 0, 1, 2, 3,$$

$$\text{put } k=0 \quad x_1 = \cos 0 + i \sin 0.$$

$$k=1 \quad x_2 = \cos \frac{2\pi}{4} + i \sin \frac{2\pi}{4}$$

$$k=2 \quad x_3 = \cos \pi + i \sin \pi$$

$$k=3 \quad x_4 = \cos \frac{6\pi}{4} + i \sin \frac{6\pi}{4}$$

$$\text{Now } x = (-1)^{1/5}$$

$$= [\cos \pi + i \sin \pi]^{1/5}$$

$$= [\cos(2k\pi + \pi) + i \sin(2k\pi + \pi)]^{1/5}$$

$$= \cos \left( \frac{2k+1}{5} \pi \right) + i \sin \left( \frac{2k+1}{5} \pi \right)$$

$$k = 0, 1, 2, 3, 4$$

$$\text{put } k=0 \quad x_5 = \cos \frac{\pi}{5} + i \sin \frac{\pi}{5}$$

$$k=1 \quad x_6 = \cos \frac{3\pi}{5} + i \sin \frac{3\pi}{5}$$



$$k=2 \quad x_2 = \cos \frac{5\pi}{5} + i \sin \frac{5\pi}{5}$$

$$k=3 \quad x_3 = \cos \frac{7\pi}{5} + i \sin \frac{7\pi}{5}$$

$$k=4 \quad x_4 = \cos \frac{9\pi}{5} + i \sin \frac{9\pi}{5}$$

~~k~~

$$\therefore x_1 = \cos 0 + i \sin 0$$

$$x_2 = \cos \frac{\pi}{2} + i \sin \frac{\pi}{2}$$

$$x_3 = \cos \pi + i \sin \pi$$

$$x_4 = \cos \frac{3\pi}{2} + i \sin \frac{3\pi}{2}$$

$$x_5 = \cos \frac{\pi}{5} + i \sin \frac{\pi}{5}$$

$$x_6 = \cos \frac{3\pi}{5} + i \sin \frac{3\pi}{5}$$

$$x_7 = \cos \frac{5\pi}{5} + i \sin \pi$$

$$x_8 = \cos \frac{7\pi}{5} + i \sin \frac{7\pi}{5}$$

$$x_9 = \cos \frac{9\pi}{5} + i \sin \frac{9\pi}{5}$$

Seat No.							
----------	--	--	--	--	--	--	--



HOLY-WOOD ACADEMY'S  
SANJEEVAN ENGINEERING & TECHNOLOGY INSTITUTE  
B.Tech-I (First Year Engineering) 2021-22

CONTINUOUS ASSESMENT TEST-I

Day & Date: Monday, 07<sup>th</sup> Feb 2022


Time: 05


Subject & Code: Communication Skills (BTHM104)

Marks: 10

- 1) Name of The Student : Granditkar Sandhya Apparao  
2) Enrollment No :  
3) Roll No : 01.

  
Signature of Student

  
Signature of Supervisor

  
Signature of Examiner

Q. 1 Write an appropriate option in the bracket to complete the following sentences (10)

1. A certain look or glance is an example of \_\_\_\_\_  
a. verbal communication. b. oral communication. c. written Communication. d. non verbal communication

d

2. \_\_\_\_\_ is the first enemy of communication.  
a) Noise b) Clarity c) Politeness d) Completeness

a

3. What body language shows you are listening?

a) turning away from the speaker b) nodding and making eye contact c) looking out of the window d) looking at talker's body

b

4. Once the message is encoded in a desired format it is transferred through a medium called \_\_\_\_\_

a

a) Channel b) Medium c) Media d) Way

5. The person who transmits the message is called the \_\_\_\_\_

a) Sender b) Gives c) Taker d) Receiver

d

Seat No.							
----------	--	--	--	--	--	--	--



HOLY-WOOD ACADEMY'S  
SANJEEVAN ENGINEERING & TECHNOLOGY INSTITUTE  
B.Tech-I (First Year Engineering) 2021-22

CONTINUOUS ASSESMENT TEST-I

Day & Date: Monday, 07<sup>th</sup> Feb 2022

Time: 10

Subject & Code: Communication Skills (BTHM104)

Marks: 10

- 1) Name of The Student : Kiran Vasant Rathod  
2) Enrollment No :  
3) Roll No : 105

Kiran  
Signature of Student

[Signature]  
Signature of Supervisor

[Signature]  
Signature of Examiner

Q. 1 Write an appropriate option in the bracket to complete the following sentences (10)

1. A person's nonverbal behavior is often used to gauge whether he or she is telling the truth. Which of the following facial clues often reveals lying?

d

- a) Crooked smile b) Facial shift c) Failure to look you in the eye  
d) All of the above are indicators of lying.

2. Visual communication uses \_\_\_\_\_ to communicate messages.

c

- a. Space b. Words c. Signs d. feedback

3. Which of these elements is not involved in the process of communication?

- a) Pipe b) Sender c) Message d) Channel

a

4. Which of these is the third element of communication?

- a) Sender b) Channel c) Message d) Receiver

b



Name of the Student: Granditkar Sandhya Appasa Roll No.: 101

Class: FY

Subject: Communication Skills Date: 04/03/2022

Language of Answer: English.

Question No.	1	2	3	4	5	6	7	8	9	10	Total	out of	Examiner's Sign.
Marks obtained	6	3	1								11	20	

Main Answersheet + No. of Supplement = Total		
01	+	=

Supervisor's Signature

- 1) ✓ c) 44.
- 2) ✓ a) Back
- 3) ✓ e) freely
- 4) ✓ d) Feedback
- 5) ✓ e) Physical
- 6) ✓ d) soft.

A → The functions of communication are  
① Informing      ② Providing data  
③ Motivate      ④ contacting.  
This function can inform and provide data to the peoples.

B) 7Cs of Communication  
→ ① Courtesy      ② consideration  
③ completeness      ④ Correctness  
⑤ coherence      ⑥ consistency  
⑦ Concertness      ⑧ coherent  
⑨ consciousness

C) The movements of Body part and their ~~is~~ is known as body language or kinesics. Kinesics is the interpretation of motion body communication by facial expressions, gestures, etc. And also non-verbal movement of body parts.



# A) Eight Essential Components of Communication.

- ① Channel    ② Message  
③ Receiver    ④ Feedback  
⑤ Environment    ⑥ Source  
⑦ Contact    ⑧ Sender

① Source → imagines, creat

② Message → Message is a stimulus or meaning produced to contact.

③ Channel → Channel is the source of message or messages between receiver and sender

④ Sender → A meaningful information send to contact.

⑤ Receiver → A message receives by sender.

⑥ Feedback → Response to received message

⑦ Environment → Atmosphere between sender and receiver.

## Continuous assessment 2

Course: B. Tech(All Branches)

Subject Name: Communication Skills

Max Marks: 10

Date:-5 Apr,2022


Sem: I

Subject Code: BTBS104

Duration:- 1/2 Hr.

08  
10

Dink

Roll no.	122	PRN No.	
Name of Student	Sonam Ramesh prasad		
Name and Sign of Supervisor			

Q.1	The cashers as well as the accountant.....come. <input checked="" type="checkbox"/> a. has                      b. have <input type="checkbox"/> c. been                      d. be	a ✓
Q.2	I love singing old Hindi songs. <input checked="" type="checkbox"/> a. present progressive      b. simple present <input type="checkbox"/> c. present perfect              d. past perfect	b ✓
Q.3	Sir, I ..... my B. Tech. degree in 2008. <input type="checkbox"/> a. pass                      b. had passed <input checked="" type="checkbox"/> c. passed                      d. passing	c ✓
Q.4	I am sure I.....about the episode in some magazine. <input checked="" type="checkbox"/> a) have read                      b) has read <input type="checkbox"/> c) having read                      d) All of the mentioned.	a ✓
Q.5	The children:.....playing cricket in the garden. (a) was <input checked="" type="checkbox"/> (b) were (c) have                      (d) had	b ✓
Q.6	We advise the patients of the swine flew to wear a mask. (change the voice)	
Q.7	The patients of the swine flew advise to wear a mask by us.	
Q.8	Sham is fixing the computer. (change the voice) The computer <del>is</del> being fixingd by sham.	✓
Q.9	Who is doing the dishes? (change the voice) The dishes is doing by them.	
Q.10	A mango was being eaten by Ram. (change the voice) Ram <del>was</del> being eating a mango.	✓
	Mother writes an email. (change the voice) An email <del>is</del> been written by mother.	✓

## Continuous assessment 2

Course: B. Tech(All Branches)

Sem: I

Subject Name: Communication Skills

Subject Code: BTBS104

Max Marks: 10

Date:-5 Apr,2022

Duration:- 1/2 Hr.

Roll no.	102	PRN No.	
Name of Student	Prem shrikant kamble		
Name and Sign of Supervisor	CAH		

Q.1	I .....my lunch before the kids <u>came</u> from school. <input checked="" type="checkbox"/> a. have finished                      b. has finished <input type="checkbox"/> c. had finished                      d. none of above	
Q.2	By next Thursday, I ..... on this project. <input type="checkbox"/> a. am working <input checked="" type="checkbox"/> b. will be working <input type="checkbox"/> c. will have been working      d. both A and B	
Q.3	He.....daily for a year. <input type="checkbox"/> a. excises <input checked="" type="checkbox"/> b. have been exercising <input type="checkbox"/> c. has been exercising      d. Both B and C	
Q.4	The researchers .....several countries in order to collect the significant data. <input type="checkbox"/> a. has travelled <input checked="" type="checkbox"/> b. have travelled <input type="checkbox"/> c. is travelling                      d. All of the mentioned	
Q.5	The cake ..... sweet. <input checked="" type="checkbox"/> a. smells                      b. smell <input type="checkbox"/> c. are smell                      d. is smell	
Q.6	Geeta will have written a letter. (change the voice) The letter will <u>be</u> written by Geeta.	
Q.7	Maria has been helped with her project by John. (change the voice) John <u>has</u> maria helped with her project.	
Q.8	Please help me. (change the voice) help me please.	
Q.9	Sameer has written a story. (change the voice) Story <u>was</u> written by sameer	
Q.10	The function will be organized in the auditorium by them. (change the voice) They <u>will</u> organized function in auditorium	

DR. BABASAHEB AMBEDKAR TECHNOLOGICAL UNIVERSITY, LONERE

Continuous Assessment-I Examination - 2021-22

Course: F.Y. B. Tech (Chem Group)

Subject Name: Engineering Chemistry

Max Marks: 10

Date: -07/02/2022

Sem: I

Subject Code: BTBS102

Duration: - 1/2 Hr.

Instructions: Attempt all multiple choice questions

Roll No:		PRN No.		Marks
Name of Student:				

Q.1 Pick the correct answer of choices given:

1)	Permanent hardness is also known as ----- a) Carbonate hardness c) Total hardness	b) Non- carbonate hardness d) None of above	
2)	A non-condensable gas is found a) Above the critical point c) On the critical point	b) Below the critical point d) None of the mentioned	
3)	According to condensed phase rule at eutectic point system is ---- a) Invariant b) Bivariant c)Both d)None		
4)	Hardness of water is mainly due to --- and --- salts . a)Zinc and Iron c) Calcium and magnesium	b) Carbonate and non carbonate d) Nitrates and sulphates	
5)	In water system at triple point the system is----- a)Uni variant b) Bivariant c) Invariant d) None of above		
6)	What is the degree of freedom of a system with 3 phases and 5 components? a)4 b)3 c)2 d)1		
7)	III effects of scale formation in boilers are ----- . a) Wastage of fuel c) Lowering safety of boilers	b) Overheating of boilers d) All of above	
8)	The correct phase rule expression for Ag - Pb system is -----. a) $F = C - P + 2$ b) $F = C - P + 1$ c) $F = 3 - P$ d) None of above		
9)	Indicator used in EDTA method method to determine hardness of water is --- a) Thymol blue c) Eriochrome black T	b) Alizarin Yellow R d) Bromocresol red	
10)	What is the degree of freedom of a system with 2 phases and 1 component? a)4 b)3 c)1 d)2		

\*\*\* End \*\*\*

**Hollywood Academy's**  
**SANJEEVAN ENGINEERING AND TECHNOLOGY INSTITUTE, PANHALA**  
**BASIC SCIENCES AND HUMANITIES DEPARTMENT**  
**CONTINUOUS ASSESSMENT TEST - I**

Class : F.Y. ( Div A )

Date : 07/02/2022

Time : 11.00 am To 12.00 noon

Name of Student: \_\_\_\_\_

PRN / Roll No.: \_\_\_\_\_

Subject: Engineering Mathematics -I(BTBSC101)

Marks : 20Marks

INSTRUCTIONS: 1) Solve any five. 2) Use nonprogrammable Calculator only.

Q. No.	Question	Marks	CO	PO
1	Find the rank of matrix $A = \begin{bmatrix} 1 & 1 & -1 & 1 \\ 1 & -1 & 2 & -1 \\ 3 & 1 & 0 & 1 \end{bmatrix}$	04	1	2
2	Test the consistency and solve $2x - 3y + 7z = 5$ , $3x + y - 3z = 13$ $2x + 19y - 47z = 32$	04	1	2
3	For what values of k the following system of equations have non trivial solution $x + y + 3z = 0$ , $4x + 3y + kz = 0$ , $2x + y + 2z = 0$	04	1	2
4	Find the Eigen values and Eigen vector for largest Eigen value for the matrix $A = \begin{bmatrix} 1 & 1 & 3 \\ 1 & 5 & 1 \\ 3 & 1 & 1 \end{bmatrix}$	04	1	2
5	Verify Cayley Hamilton Theorem for the matrix $A = \begin{bmatrix} 1 & 2 \\ 2 & -2 \end{bmatrix}$ And hence find $A^{-1}$ .	04	1	2
6	Using Gauss Jordan Method find $A^{-1}$ for $\begin{bmatrix} 2 & 1 & -1 \\ 0 & 2 & 1 \\ 5 & 2 & -3 \end{bmatrix}$	04	1	2

\*\*\*\*\*BEST OF LUCK\*\*\*\*\*



DR. BABASAHEB AMBEDKAR TECHNOLOGICAL UNIVERSITY, LONERE

Mid Semester Examination – 2021-22

Course: B. Tech First Year

Sem: I

Subject Name: Communication Skills

Subject Code: BTHM204

Marks: 20

Date:- 05/07/2022

Duration:- 1 Hr.

Instructions to the Students:

- All questions are compulsory
- Figures to right indicate full marks
- Illustrate your answers with neat sketches, diagrams etc. whenever necessary

	(Level/CO)	Marks
Q.1		6
1. _____ is the study of use of time in non-verbal communication a. Chronemics b. Paralinguistics c. Haptic d. Oculistics	Remember	
2. The Definitive meaning of a word is called _____ a. Connotative b). Denotative c. Definition d. Abstract	Remember	
3. Which of these are vital for any organisation? a) Debates b) Group discussions c) Speeches d) Arguments	Remember	
4. _____ is related with eye contact. a. Gestures b. Proxemics c. Kinesics d. Oculistics	Remember	
5. 'Extempore' means _____ a. A group discussion by many people b. A stage performance of speech done without preparation of any kind c. Elocution Speech which is performed by full preparation d. Presentation by using audio visual aids	Remember	
6. _____ is called technical language in communication a. Elocution b. Syntax c. Proxemics d. Jargon	Remember	
Q.2 Solve Any Two of the following.		3 X 2
(A) Which are the techniques of effective listening	Understand	
(B) Explain the major hurdles in developing efficient reading skill	Understand	
(C) Ways to communicate effectively in the Workplace	Understand	
Q.3 Solve Any One of the following.		1 X 8
(A) Explain Various Barriers to Communication	Understand	
(B) Draw a figure of 'Functions of Communication' and provide explanations of each component	Understand	

Sem II

Academic Year: 2021-2022

Subject Name: Engineering Mechanics

Subject Code: BIES103

Max Marks: 20

Date: -05/07/2022

Time: 12:30 to 01:30 pm

		Marks
Q 1	Attempt following Questions	6
	<p>1. Three forces acting on a rigid body are represented in magnitude, direction and line of action by the three sides of a triangle taken in order. The forces are equivalent to a couple whose moment is equal to _____</p> <p>a) Area of the triangle                      b) Twice the area of the triangle c) Half the area of the triangle            d) None of these</p>	
	<p>2. For the conditions of the equilibrium of the body, i.e. the rigid body only the external forces defines the equilibrium. Because the internal forces cancels out so not to be considered.</p> <p>a) The first part of the statement is false and other part is true b) The first part of the statement is false and other part is false too c) The first part of the statement is true and other part is false d) The first part of the statement is true and other part is true too</p>	
	<p>3. A force is developed by a support that not allows the _____ of its attached member:</p> <p>a) Translation                                  b) Rotation c) Addition                                      d) Subtraction</p>	
	<p>4. The co-efficient of friction depends upon _____</p> <p>a) nature of surfaces                          b) area of contact c) shape of the surfaces                      d) none of these</p>	
	<p>5. A couple moment is developed when _____ of the attached member is prevented.</p> <p>a) Translation                                  b) Rotation c) Addition                                      d) Subtraction</p>	
	<p>6. Which of the following is not a type of support for beam?</p> <p>a) Fixed    b) Flexible c) Simple    d) Roller</p>	

DR. BABASAHEB AMBEDKAR TECHNOLOGICAL UNIVERSITY, LONERE

Continuous Assessment-I Examination - June 2022

Course: F.Y. B. Tech (Chem Group)

Sem: II

Subject Name: Engineering Chemistry

Subject Code: BTBS102

Max Marks: 10

Date: -21/06/2022

Duration: - 1/2 Hr.

Instructions: Attempt all multiple choice questions

Roll No:		PRN No.		Marks
Name of Student:				

Pick the correct answer of choices given:

Which of following is not a term in Gibbs phase rule. a) Degree of ionization    b) Degree of freedom    c) Phases    d) Components	
Representation of the different phase of a compound on a two or three dimensional graph is a) Block diagram    b) Equilibrium diagram c) Phase diagram    d) None of the mentioned	
Mixture (solution) of water and alcohol is considered as ----phase where as of water and oil as ----- phase. a) One, Two    b) Two, one    c) Uniform, separate    d) All of above	
Ion exchange method is known as ----- . a) Zeolite    b) Osmosis    c) Demineralisation    d) Neutralisation	
In phase diagram for one component system along curve, ----- phases exist in equilibrium. a) All    b) None    c) Two    d) All of above	
Salts causing ----- hardness are treated by soda. a) Non carbonate    b) Temporary    c) Permaament    d) All of above	
In EDTA titration , the addition of buffer solution maintains - a) Alkalinity    b) Acidity    c) pH    d) Neutrality	
The permitted hardness of water for low pressure boilers is -- . a) 25- 50 ppm    b) 10-25 ppm    c) 0-2 ppm    d) None of the above	
Metal-EBT complex is ----- . a) Blue coloured    b) Wine red coloured    c) Pink coloured    d) Colourless	
What is the number of phases in a system with 2 degrees of freedom and 2 components? a)1    b)3    c)4    d)2	

\*\*\* End \*\*\*





DR. BABASAHEB AMBEDKAR TECHNICAL UNIVERSITY, LONERE.

Sanjeevan Engineering & Technology Institute, Panhala

MID SEMESTER EXAM SEM-II

CLASS: F.E. DIV B & C

MARKS: 20

SUBJECT: EEE

DATE & Time : 05/07/2022

**Instructions:**

a) All questions are compulsory.

1. Explain with neat sketch working of steam power plant. (Marks 8)
2. Write short note on (any two) Marks 6

Solar energy

Wind energy

Tidal energy

Bio mass energy

3. Differentiate between reanable energy sources and Ion renewable energy sources (Marks 6)

CA1, MID TERM & CA2 Marks  
Sub- Engg. Chemistry

Sem-I  
Class-F.Y.B.Tech.

2021-22  
Div- C

Roll No	Candidate Name	CA1	MID	CA2	Total
301	PATIL EKNATH SHANKAR		7	3	10
302	PATIL MANASI DIPAK	8	18	5	31
303	PATIL NAMRATA PRASHANT	7	9	6	22
304	PATIL PRANAVI SUBHASH	8	19	6	33
305	PATIL ROSHANI ANANDA	7	14	6	27
306	PATIL SANIKA SANJAY	9	19	8	36
307	PATIL SHREYASH KRISHNA	9	7	6	22
308	PATIL SIDDHESH DINKAR	9	14	6	29
309	PATIL SNEHAL SANJAY	7	11	6	24
310	PATIL SNEHAL SARJERAO	8	11	5	24
311	PATIL SUSHANT DNYANESHWAR	8	8	9	25
312	PATIL VAISHNAVI SANJAY	10	12	4	26
313	PAWAR RITESH BAJARANG	7	6	7	20
314	POWAR PRASAD SANJAY	9	4	7	20
315	PRAJVAL SOMARAYA DHANAGAR	7	7	5	19
316	PRAJWAL BABAN PATIL	8	11	8	27
317	RAHUL SANJAYKUMAR BHADARGADE	8	9	5	22
318	SALOKHE ADITYA SHANKAR	9	9	3	21
319	SARUDKAR SHREYA RAMESH	9	19	8	36
320	SAWANT MAYURI SHANTARAM	3	10	6	19
321	SAWANT SAMRUDDHI RAVIKANT				0
322	SHAIKH JUNED SHAKIL	7	9	9	25
323	SHITOLE PRANJALI RAMDAS	7	17	10	34
324	SOURABH VIJAY JADHAV	7	11	10	28
325	TEKALE POOJA KUBER	9	16	10	35
326	TILAWE SANIKA DHANAJI	10	19	9	38
327	TURKE ANIKET SURESH	4	8	7	19
328	VADAM RUTURAJ MARUTI	8	8	5	21
329	VHANKALI SUSHILKUMAR KIRAN	7	10	5	22
330	YADAV SNEHAL VILAS	8	17	8	33
331	KHARADE ATHARVA NITIN	9	10	0	19
332	PATIL HARSHVARDHAN NIVAS	4	7	4	15

CH

# Dr. Babasaheb Ambedkar Technological University



Title

Student Marks

Exam Session

Summer Semester Examinations 2022

8015 / Sanjeevan Engineering and Technology Institute, Panhala

Course

11612 / 2017 / Bachelor of Technology (Mechanical Engineering)

Subject

BTSS202 / 2020 / Engineering Chemistry

Exported On

2022/09/22 16:16:32

Enrollment Number	Full Name	Continuous Assessment 1 Marks / 10		Continuous Assessment 2 Marks / 10		Mid Exam Marks / 20
		<input type="button" value="Template"/>	<input type="button" value="Upload"/>	<input type="button" value="Template"/>	<input type="button" value="Upload"/>	<input type="button" value="Template"/>
2163151612001	PATIL AMRUTA ASHOK	9		6		16
2163151612002	PATIL ROHIT DNYANDEV	9		5		10
2163151612003	CHAVAN SURAJ RANGRAO	9		5		9
2163151612004	CHOUGALE ABHIJEET VITTHAL	9		10		6
2163151612005	CHOUGULE SHUBHAM SHIVAJI	4		2		4
2163151612006	GAIKWAD JITENDRA PRAMOD	9		6		10
2163151612007	KUMBHAR OMKAR SANJAY	9		6		3
2163151612008	PATIL OMKAR PRAKASH	3		4		8
2163151612009	JADHAV SWAPNIL PANDURANG	2		1		12
2163151612010	YADAV BHARAT JAYSING	9		7		8



# Dr. Babasaheb Ambedkar Technological University



Title

Student Marks

Exam Season

Summer Semester Examinations 2022

6315 / Sanjeevan Engineering and Technology Institute, Panhala

Course

11293 / 2017 / Bachelor of Technology (Electrical Engineering)

Subject

BTBS202 / 2020 / Engineering Chemistry

Exported On

2022/09/22 16:13:55

Enrollment Number	Full Name	Continuous Assessment 1 Marks / 10		Continuous Assessment 2 Marks / 10		Mid Exam Marks / 20
		<input type="button" value="Template"/>	<input type="button" value="Upload"/>	<input type="button" value="Template"/>	<input type="button" value="Upload"/>	<input type="button" value="Template"/> <input type="button" value="Upload"/>
2163151293001	GHATAGE PRADHUMNA PRAKASH	9		5		12
2163151293002	PATIL KARTIK SANJAY	7		7		15
2163151293003	PATIL RUTUJA RAJU	9		9		12
2163151293004	LALE ASHWINI MANGESH	9		9		16
2163151293005	SHETE JYOTI NAMDEV	9		9		16
2163151293006	KAMBLE ADITYA ARJUN	9		8		16
2163151293007	KAMBLE SUJATA PRALHAD	9		6		7
2163151293008	PATIL YASH LAXMAN	9		7		11
2163151293009	PATIL AVINASH MARUTI	8		8		8
2163151293010	BIDKAR SANIKA BALASO	9		4		16
2163151293011	PRASAD SONAM RAMESH	8		5		17
2163151293012	PATIL PRATIK JOTIRAM	7		6		9
2163151293013	BANGE RUSHIKESH NANDKUMAR	9		9		11
2163151293014	PATIL SAURABH SURESH	9		7		14
2163151293015	PATANKAR AKIB SHABBIR	9		4		13
2163151293016	MHETAR SAURABH SARJERAO	9		7		17

CAH






7th  
 Semester Marks  
 Summer Session  
 Summer Semester Examinations 2022  
 WTS / Sanjeevan Engineering and Technology Institute, Panhala  
 2016 / 2017 / Bachelor of Technology (Electrical Engineering)  
 2016 / 2020 / Engineering Chemistry Lab  
 Reported On  
 2022/09/22 16:14:49

Enrollment Number	Full Name	Continuous Assessment 1 Marks / 30	Continuous Assessment 2 Marks / 30	Internal Practical Marks / 20	Practical Marks / 20
		<input type="button" value="Template"/> <input type="button" value="Upload"/>	<input type="button" value="Template"/> <input type="button" value="Upload"/>	<input type="button" value="Template"/> <input type="button" value="Upload"/>	<input type="button" value="Template"/> <input type="button" value="Upload"/>
2163151293001	GHATAGE PRADHUMNA PRAKASH	24	30	10	12
2163151293002	PATIL KARTIK SANJAY	30	24	17	18
2163151293003	PATIL RUTUJA RAJU	24	24	16	15
2163151293004	LALE ASHWINI MANGESH	30	30	17	16
2163151293005	SHETE JYOTI NAMDEV	29	29	19	19
2163151293006	KAMBLE ADITYA ARJUN	30	30	14	15
2163151293007	KAMBLE SUJATA PRALHAD	24	24	16	15
2163151293008	PATIL YASH LAXMAN	30	24	16	15
2163151293009	PATIL AVINASH MARUTI	18	12	10	10
2163151293010	BIDKAR SANIKA BALASO	24	30	17	16
2163151293011	PRASAD SONAM RAMESH	24	24	19	18
2163151293012	PATIL PRATIK JOTIRAM	24	30	15	15

PH

Enrollment Number	Full Name	Continuous Assessment 1 Marks / 30	Continuous Assessment 2 Marks / 30	Internal Practical Marks / 20	Practical Marks / 20
		<input type="button" value="Template"/> <input type="button" value="Upload"/>	<input type="button" value="Template"/> <input type="button" value="Upload"/>	<input type="button" value="Template"/> <input type="button" value="Upload"/>	<input type="button" value="Template"/> <input type="button" value="Upload"/>
2163151293013	BANGE RUSHIKESH NANDKUMAR	30	30	16	16
2163151293014	PATIL SAURABH SURESH	24	12	14	13
2163151293015	PATANKAR AKIB SHABBIR	30	30	16	15
2163151293016	MHETAR SAURABH SARJERAO	24	30	19	18

Subject Teacher




(Name and Signature)



HOD

(Name and Signature)



Principal/Director

(Name and Signature)



Holy-wood Academy, Kolhapur's  
**SANJEEVAN ENGINEERING AND TECHNOLOGY INSTITUTE**

Sanjeevan Knowledge City, Somwar Peth- Injole, Panhala, Tal. Panhala, Dist. Kolhapur Pin- 416 201 (MS.)

Phone : Dept: 0231 - 2686613, PBX: 0231 - 2686600, Fax: 0231 - 2686629

Approved By AICTE - New Delhi ■ Recognized by Govt. of Maharashtra & DTE ■ Affiliated to Shivaji University, Kolhapur

Website : www.seti.edu.in Email : principal@seti.edu.in / office@seti.edu.in

**EN 6315**

**DEPARTMENT OF CIVIL ENGINEERING**

## NOTICE

CA -I

S.Y (SEM-IV)

Date -09/05/22

The CA-I test for S.Y scheduled on 18<sup>th</sup> May 2022. In regard all the staff here by informed that , they have to submit their CA-I TEST question paper hard copy 2 set Exam co-ordinator on or before 12<sup>th</sup> May 2022 till 4 pm, otherwise they have to make Xerox set with number of student & submit to Exam co-ordinator

  
Prof. A. C. Thoke

Exam co-ordinator

1 EPS



2 SSC



3 AND



4 AMM



5 JIG



6 SMS



  
Prof. J.S. Mevekari

Civil Engineering

HOD Civil

Sanjeevan Engineering and Technology Institute  
Somwar Peth, Panhala, Dist. Kolhapur. (416 201)

Holy-wood Academy, Kolhapur's

**seti**  
SANJEEVAN ENGINEERING AND TECHNOLOGY INSTITUTE

Sanjeevan Knowledge City, Sonwar Peth, Injale, Panhala, Tal. Panhala, Dist. Kolhapur (Pin-416 201 (MS.))  
Phone : Dept : 0231 - 2686613, PBX : 0231 - 2686600, Fax : 0231 - 2686629

Approved By AICTE - New Delhi ■ Recognized by Govt. of Maharashtra & DTE ■ Affiliated to Shivaji University, Kolhapur


Website : www.seti.edu.in Email : principal@seti.edu.in / office@seti.edu.in **EN 6315**


**DEPARTMENT OF CIVIL ENGINEERING**


CA-I TIME TABLE 2021-2022		
DATE	TIME	S.Y.
<b>18/05/22</b>	10:00AM To 10.30AM	SM-I
	10:40AM To 11:10AM	HYD-II
	11:20AM To 11:50AM	WRE
	12:00 To 12:30PM	EE
	2:15PM To 2:45PM	EG
	3:00PM To 3:30PM	BPD


  
Dept Exam. Incharge


  
**HOD**  
Civil Engineering  
Sanjeevan Engineering & Technology Institute  
Sonwar Peth, Panhala, Dist. Kolhapur. (416 201)

EPS - 

AND - 

SSC - 

AMM - 

SMS - 





Holy-wood Academy, Kolhapur's

**SANJEEVAN ENGINEERING AND TECHNOLOGY INSTITUTE**

Sanjeevan Knowledge City, Somwar Peth- Injole, Panhala, Tal. Panhala, Dist. Kolhapur Pin- 416 201 (MS.)  
Phone : Dept. 0231 - 2686613, PBX : 0231 - 2686600, Fax : 0231 - 2686629

Approved By AICTE - New Delhi ■ Recognized by Govt. of Maharashtra & DTE ■ Affiliated to Shivaji University, Kolhapur

Website : www.seti.edu.in Email : principal@seti.edu.in / office@seti.edu.in


**EN 6315**

**DEPARTMENT OF CIVIL ENGINEERING**

**CA-I TIME TABLE 2021-2022**

**SEATING ARRANGEMENT**

DATE	CLASS	A106	A108 (CPH)
18/05/22	S.Y.	1 To 35	36 To 70

  
Dept. Exam. Incharge

  
HOD

Civil Engineering

Sanjeevan Engineering & Technology Institute  
Somwar Peth, Panhala, Dist. Kolhapur, (416 201)

Holy-wood Academy, Kolhapur's  
**SANJEEVAN ENGINEERING AND TECHNOLOGY INSTITUTE**  
 Sanjeevan Knowledge City, Somwar Peth- Injole, Panhala, Tal. Panhala, Dist. Kolhapur Pin- 416 201 (MS.)  
 Phone : Dept.: 0231 - 2686613, PBX : 0231 - 2686600, Fax : 0231 - 2686629

Approved By AICTE - New Delhi ■ Recognized by Govt. of Maharashtra & DTE ■ Affiliated to Shivaji University, Kolhapur

Website : www.seti.edu.in Email : principal@seti.edu.in / office@seti.edu.in






**EN 6315**

**DEPARTMENT OF CIVIL ENGINEERING**

CA-I (S.Y.) TIME TABLE 2021-2022			
SUPERVISION CHART			
DATE	TIME	A106	A108 (DH)
<b>18/05/22</b>	10:00AM To 10.30AM	Prof. Chavan S.S.	Prof. Gavade J.J.
	10:40AM To 11:10AM	Prof. Chavan S.S.	Prof. Gavade J.J.
	11:20AM To 11:50AM	Prof. Salokhe E.P.	Prof. Dhende A. N.
	12:00 To 12:30PM	Prof. Salokhe E.P.	Prof. Dhende A. N.
	2:15PM To 2:45PM	Prof. Chavan S.S.	Prof. Dhende A. N.
	3:00PM To 3:30PM	Prof. Salokhe E.P.	Prof. Shinde S.M.

  
 Dept. Exam. Incharge

  
**HOD**  
 Civil Engineering  
 Sanjeevan Engineering & Technology Institute  
 Somwar Peth, Panhala, Dist. Kolhapur, (416 201)

EPC -   
 AND -   
 SSC -   
 AMM -   
 S.M.J. - 

- Instructions:** – 1. All questions are compulsory.  
2. Write option of answer in Ans column

Q. No	Question	Ans	CO	PO	MI
1	_____ is the built-up covered area of a building measured at floor level of any story. a) Covered area                      b) Carpet area c) Total area                              d) Plinth area		1	1	
2	_____ area of a building is the area of verandahs, passage, corridors, balconies, porches, etc. a) Floor area                              b) Horizontal circulation area c) Vertical circulation area      d) Verandah area		1	1	
3	_____ of building is the useful area or liveable area or lettable area. This is the total floor area minus the circulation area, verandahs, corridors, passages, staircase, lifts, entrance hall, etc. minus other non-useable areas. a) Plinth area                              b) Floor area c) Carpet area                              d) Circulation area		1	1	
4	The placing of various rooms or units of a structure in proper correlation of their functions and in due proximity with each other is known as _____. a) Aspect                                      b) Prospect c) Circulation                                  d) Grouping		1	1	
5	What is the level below window called? a) Pane level                                  b) Lintel level c) Sill level                                      d) Plinth level		1	1	
6	Which is not a type of building? a) Educational Building      b) Mercantile Building c) Institutional Building      d) Domestic building		1	1	
7	Which is not included in building codes? a) Mechanical integrity      b) Safety c) Providing employment      d) Structural integrity		1	1	
8	Which among the following is not a principle of planning?*		1	1	
9	Green building practices include a) Only energy efficiency.              b) Only recycled materials c) Only Environmental Protection      d) All of these		1	1	
10	Residential building includes c) Bungalows                                  b) Apartments d) Row Housings                              d) All of above		1	1	

- Instructions:** – 1. All questions are compulsory.  
2. Write option of answer in Ans column

**Answer Solution**

Q. No	Question	Ans	CO	PO	MI
1	_____ is the built-up covered area of a building measured at floor level of any story. a) Covered area                      b) Carpet area c) Total area                            d) Plinth area	D	1	1	
2	_____ area of a building is the area of verandahs, passage, corridors, balconies, porches, etc. a) Floor area                            b) Horizontal circulation area c) Vertical circulation area    d) Verandah area	B	1	1	
3	_____ of building is the useful area or liveable area or lettable area. This is the total floor area minus the circulation area, verandahs, corridors, passages, staircase, lifts, entrance hall, etc. minus other non-useable areas. a) Plinth area                            b) Floor area c) Carpet area                            d) Circulation area	C	1	1	
4	The placing of various rooms or units of a structure in proper correlation of their functions and in due proximity with each other is known as _____ a) Aspect                                    b) Prospect c) Circulation                              d) Grouping	D	1	1	
5	What is the level below window called? a) Pane level                              b) Lintel level c) Sill level                                 d) Plinth level	C	1	1	
6	Which is not a type of building? a) Educational Building    b) Mercantile Building c) Institutional Building    d) Domestic building	D	1	1	
7	Which is not included in building codes? a) Mechanical integrity    b) Safety c) Providing employment    d) Structural integrity	C	1	1	
8	Which among the following is not a principle of planning?*	D	1	1	
9	Green building practices include a) Only energy efficiency.            b) Only recycled materials c) Only Environmental Protection    d) All of these	D	1	1	
10	Residential building includes a) Bungalows                              b) Apartments b) Row Housings                        d) All of above	D	1	1	

Holy-wood Academy, Kolhapur's  
**SANJEEVAN ENGINEERING AND TECHNOLOGY INSTITUTE**  
 Sanjeevan Knowledge City, Somwar Peth- Injole, Panhala, Tal. Panhala, Dist. Kolhapur Pin- 416 201 (MS.)  
 Phone : Dept.: 0231 - 2686613, PBX : 0231 - 2686600, Fax : 0231 - 2686629

Approved By AICTE - New Delhi ■ Recognized by Govt. of Maharashtra & DTE ■ Affiliated to Shivaji University, Kolhapur

Website : www.seti.edu.in Email : principal@seti.edu.in / office@seti.edu.in **EN 6315**

**DEPARTMENT OF CIVIL ENGINEERING**

## NOTICE

### CA-I

#### (T.Y.&B.Tech.)

Date -05/04/22







The CA-I test for T.Y. and B.Tech. is scheduled between 11<sup>th</sup> April 2022. In this regard all the staff are here by informed that, they have to submit their CA-I TEST question paper in prescribed format(hard copy 2 set) to Exam co-ordinator on or **before 8<sup>th</sup> April 2022** till 4 pm, otherwise they have to make Xerox set with number of student & submit to exam co-ordinator.

  
 Prof. A. C. Thoke

Exam co-ordinator

  
 Prof. J. S. Mevekari

**HOD Civil**  
**Sanjeevan Engineering & Technology Institute**  
 Somwar Peth, Panhala, Dist. Kolhapur. (416 201)

- 1 EPS 
- 2 SSC 
- 3 SMS 
- 4 AMM 
- 5 AND 
- 6 JJG 



Holy-wood Academy, Kolhapur's

**SANJEEVAN ENGINEERING AND TECHNOLOGY INSTITUTE**

Sanjeevan Knowledge City, Somwar Peth- Injole, Panhala, Tal. Panhala, Dist. Kolhapur Pin- 416 201 (MS.)

Phone : Dept.: 0231 - 2686613, PBX : 0231 - 2686600, Fax : 0231 - 2686628

Approved By AICTE - New Delhi ■ Recognized by Govt. of Maharashtra & DTE ■ Affiliated to Shivaji University, Kolhapur


Website : [www.seti.edu.in](http://www.seti.edu.in) Email : [principal@seti.edu.in](mailto:principal@seti.edu.in) / [office@seti.edu.in](mailto:office@seti.edu.in)

**EN 6315**

**DEPARTMENT OF CIVIL ENGINEERING**

**CA-I TIME TABLE 2021-2022**

DATE	TIME	T.E.	B.E.
11/04/22	10:00AM To 10.30AM	DCS-I	MROCS
	10:40AM To 11:10AM	FE	RSE
	11:20AM To 11:50AM	PM	-
	12:00 To 12:30PM	WWT	-
	2:15PM To 2:45PM	CT	-
	3:00PM To 3:30PM	BPD	-

  
Dept. Exam. Incharge

  
HOD  
Civil Engineering  
Sanjeevan Engineering & Technology Institute  
Somwar Peth, Panhala, Dist. Kolhapur. (416 201)



Holy-wood Academy, Kolhapur's

**SANJEEVAN ENGINEERING AND TECHNOLOGY INSTITUTE**

Sanjeevan Knowledge City, Somwar Peth- Injole, Panhala, Tal. Panhala, Dist. Kolhapur Pin- 416 201 (MS.)

Phone : Dept.: 0231 - 2686613, PBX : 0231 - 2686600, Fax : 0231 - 2686629

Approved By AICTE - New Delhi ■ Recognized by Govt. of Maharashtra & DTE ■ Affiliated to Shivaji University, Kolhapur

Website : [www.seti.edu.in](http://www.seti.edu.in) Email : [principal@seti.edu.in](mailto:principal@seti.edu.in) / [office@seti.edu.in](mailto:office@seti.edu.in)

**EN 6315**

**DEPARTMENT OF CIVIL ENGINEERING**

**CA-I TIME TABLE 2021-2022**

**SEATING ARRANGEMENT**

DATE	CLASS	A106	A107	A108	A103(DH)
11/04/22	T.Y.	-	1 To 35	6 To 62	-
	B.Tech.	1 To 35	-	-	36 To 73

  
Dept. Exam. Incharge

  
HOD  
Civil Engineering  
Sanjeevan Engineering & Technology Institute  
Somwar Peth, Panhala, Dist. Kolhapur. (416 201)



Holy-wood Academy, Kolhapur's  
**SANJEEVAN ENGINEERING AND TECHNOLOGY INSTITUTE**  
Sanjeevan Knowledge City, Somwar Peth- Injole, Panhala, Tal. Panhala, Dist. Kolhapur Pin- 416 201 (MS.)  
Phone : Dept.: 0231 - 2686613. PBX: 0231 - 2686600. Fax : 0231 - 2686629  
Approved By AICTE - New Delhi ■ Recognized by Govt. of Maharashtra & DTE ■ Affiliated to Shivaji University, Kolhapur  
Website : www.seti.edu.in Email : principal@seti.edu.in / office@seti.edu.in **EN 6315**  
**DEPARTMENT OF CIVIL ENGINEERING**

CA-I TIME TABLE 2021-2022						
SUPERVISION CHART						
DATE	TIME	A106	A107	A108	A103(DH)	
11/04/22	10:00AM To 10:30AM	Prof. Momin A.M.	Prof. Shinde S.M.	Prof. Dhende A. N.	Prof. Gavade J.J.	
	10:40AM To 11:10AM	Prof. Chavan S.S.	Prof. Momin A.M.	Prof. Shinde S.M.	Prof. Dhende A. N.	
	11:20AM To 11:50AM	-	Prof. Salokhe E.P.	Prof. Gavade J.J.	-	
	12:00 To 12:30PM	-	Prof. Shinde S.M.	Prof. Dhende A. N.	-	
	2:15PM To 2:45PM	-	Prof. Chavan S.S.	Prof. Salokhe E.P.	Prof. Salokhe E.P.	-
	3:00PM To 3:30PM	-	Prof. Salokhe E.P.	Prof. Momin A.M.	-	

Dept Exam. Incharge

  
Sanjeevan Engineering & Technology Institute  
Somwar Peth, Panhala, Dist. Kolhapur. (416 201)





Hollywood Academy's  
SANJEEVAN ENGINEERING AND TECHNOLOGY INSTITUTE, PANHALA  
DEPARTMENT OF CIVIL ENGINEERING

C.A.I

Class - T.Y. B. Tech Civil

Subject: Design of Concrete Structure-I (BTCVC601)

Marks -10

Date - 11/04/2022

Time - 10.00 to 10.30 am

Name of Student :

Roll No.

PRN No.

- Instructions :** - 1. All questions are compulsory.  
2. Use of non-programmable calculators is permitted.  
3. Write option of answer in Ans column

Q.No	Question	Ans	CO	PO	Mks
1.	1)The shape of stress strain curve for concrete as prescribed by IS 456 is A) a) Rectangular                      b) Parabolic c) Rectangular Parabolic              d) None of these	c	1	1	1
2.	2)An RCC beam can have maximum tension reinforcement as: a) 6 % bD    b) 2 % bD    c) 4 % bD    d) 3 % bD	c	1	1	1
3.	In a single reinforced beam, if the permissible stress in concrete reaches earlier than that in steel, the beam section is called (a)Under reinforced section    (b)Economic section (c)Over reinforced section    (d)Critical section	c	1	1	1
4.	Partial factor of safety for concrete and steel respectively may be taken as a) 1.5 and 1.78    b) 3 and 1.78    c) 1.5 and 1.15    d) 3 and 1.2	c	1	1	1
5.	The characteristic strength of concrete in the actual structure is taken as a) fck    b) 0.85 fck    c) 0.67 fck    d) 0.447 fck	c	1	1	1
6.	In limit state of collapse against flexure, the maximum strain in tension reinforcement at failure shall not be less than (a)0.002    (b)0.002 + fy/Es    (c)0.002 + fy/1.15Es    (d)0.002 + fy/0.87Es	c	1	1	1
7.	The characteristic strength of concrete is defined as that compressive strength below which NOT more than (a)2% of results fall    (b)10% of results fall (c)5% of results fall    (d)None of these	c	1	1	1
8.	8)partial safety for concrete and steel are 1.5 and 1.15 respectively, because a)Concrete is heterogeneous while steel is homogeneous (b)Concrete is weak in tension (c)The control on the quality of concrete is not as good as that of steel (d)Voids in concrete are 0.5% while those in steel are 0.15%	c	1	1	1
9.	9)The modulus of elasticity of concrete (in N/mm <sup>2</sup> ) can be assumed as follows where fck is the characteristic cube compressive strength of concrete(in N/mm <sup>2</sup> ) (a)4000 fck    (b)2000 fck    (c)5000 fck    (d)3000 fck	c	1	1	1
10.	The tensile strength of concrete to be used in the design of reinforced concrete members is (a)0.2 fck    (b)0.1 fck    (c)0    (d)0.7 fck	c	1	1	1



Holywood Academy's  
**SANJEEVAN ENGINEERING AND TECHNOLOGY INSTITUTE, PANHALA**  
**DEPARTMENT OF CIVIL ENGINEERING**

C.A.1

Class – B. Tech Civil  
 Date – 11/04/2022  
 Name of Student:

Subject – Remote Sensing Essentials  
 (BTCESS802C)

Roll No. PRN No.

Marks -10  
 Time – 10.40 to 11.10am

**Instructions :** – 1. All questions are compulsory. 2. Use of non-programmable calculators is permitted.  
 3. Write option of answer in Ans column

Q. No	Question	Ans	CO	PO	Mks
1.	Remote sensing techniques make use of the properties of _____ emitted; reflected or diffracted by the sensed objects. A) sonar waves B) sound waves C) electromagnetic waves D) wind waves	C			1
2.	Which of the following is not a principle of remote sensing? A) Interaction of energy with satellite B) Electromagnetic energy C) Electro-magnetic spectrum D) Interaction of energy with atmosphere	A			1
3.	The point just vertically below the observer's position, in celestial sphere is called _____. A) celestial point B) Nadir C) Zenith D) Pole	B			1
4.	The system that uses the Sun as a source of electromagnetic energy and records the naturally radiated and reflected energy from the object is called.. A) Geographical Information System B) Global Positioning System C) Passive Remote Sensing C) Active Remote Sensing	C			1
5.	The relation between velocity, wavelength and frequency can be given as ____ A) $C = v + \lambda r$ B) $C = \lambda / v$ C) $C = v * \lambda$ D) $\lambda = 1 / \lambda v$	C			1
6.	Which of the following is not a classification of scattering principle? A) Faraday scattering B) Rayleigh scattering C) Mie scattering D) Non-selective scattering	A			1
7.	Polar orbiting satellites are generally placed at an altitude range of _____. A) 7-15km B) 7000-15000km C) 700-1500km D) 70-150km	C			1
8.	Which one of the following frequency regions is a part of sun's radiation? A) Visible frequency region B) Radio frequency region C) Infrared frequency region D) All of the above	D			1
9.	The spectral region of the electromagnetic radiation which passes through the atmosphere without much attenuation is known as: A) Ozone hole B) Atmospheric window C) Ozone window D) Black hole	B			1
10.	A perfectly black body : A) emits power of every wave length B) is a diffuse emitter C) absorbs all the radiations of every wave lengths D) All the above	D			1



Holy-wood Academy, Kolhapur's  
**SANJEEVAN ENGINEERING AND TECHNOLOGY INSTITUTE**

Sanjeevan Knowledge City, Somwar Peth- Injole, Panhala, Tal. Panhala, Dist. Kolhapur Pin- 416 201 (MS.)  
Phone : Dept: 0231 - 2686613, PBX : 0231 - 2686600, Fax : 0231 - 2686629

Approved By AICTE - New Delhi ■ Recognized by Govt. of Maharashtra & DTE ■ Affiliated to Shivaji University, Kolhapur

Website : [www.seti.edu.in](http://www.seti.edu.in) Email : [principal@seti.edu.in](mailto:principal@seti.edu.in) / [office@seti.edu.in](mailto:office@seti.edu.in)

**EN 6315**

**DEPARTMENT OF CIVIL ENGINEERING**

## NOTICE

CA-I


S.Y. (SEM-III)

Date -08/01/22

The CA-I test for all students is scheduled on 10<sup>th</sup> January 2022. In this regard all the staff here by informed that, they have to prepare CA-I question paper in the Google form

  
HOD  
Civil Engineering  
Sanjeevan Engineering & Technology Institute  
Somwar Peth, Panhala, Dist. Kolhapur. (416 201)

ACT- 

AMM- 

JSL- 

SSC- 

AND- 

EPS- 



Holy-wood Academy, Kolhapur's  
**SANJEEVAN ENGINEERING AND TECHNOLOGY INSTITUTE**

Sanjeevan Knowledge City, Somwar Path- Injole, Panhala, Tal. Panhala, Dist. Kolhapur Pin- 416 201 (MS.)  
Phone : Dept.: 0231 - 2686613, PBX : 0231 - 2686600, Fax : 0231 - 2686629

Approved By AICTE - New Delhi ■ Recognized by Govt. of Maharashtra & DTE ■ Affiliated to Shivaji University, Kolhapur

Website : [www.seti.edu.in](http://www.seti.edu.in) Email : [principal@seti.edu.in](mailto:principal@seti.edu.in) / [office@seti.edu.in](mailto:office@seti.edu.in)

**EN 6315**

**DEPARTMENT OF CIVIL ENGINEERING**

## NOTICE

CA - I

S.Y (SEM-~~III~~)

Date -3/01/22

The CA-I test for S.Y scheduled on 10<sup>th</sup> January 2022. In regard all the staff here by informed that , they have to submit their CA-I TEST question paper hard copy 2 set Exam co-ordinator on or before 8<sup>th</sup> January 2022 till 4 pm, otherwise they have to make Xerox set with number of student & submit to Exam co-ordinator

  
Prof. A. C. Thoke

Exam co-ordinator

1 EPS 

2 SSC - 

3 AND - 

4 AMM 

5 NAGK 

  
Prof. J.S. Mevekari

HOD  
Civil Engineering

Sanjeevan Engineering & Technology Institute  
Somwar Peth, Panhala, Dist. Kolhapur, 416 201

Holy-wood Academy, Kolhapur's

**seti**  
SANJEEVAN ENGINEERING AND TECHNOLOGY INSTITUTE

Sanjeevan Knowledge City, Somwar Peth- Injole, Pannala, Tal. Panhala, Dist. Kolhapur Pin- 416 201 (MS.)  
Phone : Dept: 0231 - 2686613, PBX : 0231 - 2686600, Fax : 0231 - 2686629

Approved By AICTE - New Delhi • Recognized by Govt. of Maharashtra & DTE • Affiliated to Shivaji University, Kolhapur

Website : www.seti.edu.in Email : principal@seti.edu.in / office@seti.edu.in **EN 6315**

**DEPARTMENT OF CIVIL ENGINEERING**

<b>CA-I TIME TABLE 2021-2022</b>		
DATE	TIME	S.Y.
<b>10/01/22</b>	9:30AM To 10.30AM	BCD
	10:30AM To 11:30AM	MOS
	11:45AM To 12:45PM	M-III
	12:45PM To 1:45PM	HY-I
	2:30PM To 3:30PM	SUR-I

  
Dept. Exam. Incharge

  
**HOD**  
Civil Engineering  
Sanjeevan Engineering & Technology Institute  
Somwar Peth, Panhala

NAGK - Chakr  
EPS - SAB  
AND - Ashraf  
AMM - Am

Holy-wood Academy, Kolhapur's  
**SANJEEVAN ENGINEERING AND TECHNOLOGY INSTITUTE**  
 Sanjeevan Knowledge City, Somwar Peth- Injole, Panhala, Tal. Panhala, Dist. Kolhapur Pin- 416 201 (MS.)  
 Phone : Dept. : 0231 - 2686613, PBX : 0231 - 2686600, Fax : 0231 - 2686629

Approved By AICTE - New Delhi ■ Recognized by Govt. of Maharashtra & DTE ■ Affiliated to Shivaji University, Kolhapur





Website : www.seti.edu.in Email : principal@seti.edu.in / office@seti.edu.in **EN 6315**

**DEPARTMENT OF CIVIL ENGINEERING**

<b>CA-I TIME TABLE 2021-2022</b>			
<b>SUPERVISION CHART</b>			
<b>DATE</b>	<b>TIME</b>	<b>A106</b>	<b>A103(DH)</b>
<b>10/01/22</b>	9:30AM To 10.30AM	Prof. Dhende A. N.	Prof. Mevekari J.S.
	10:30AM To 11:30AM	Prof. Mevekari J.S.	Prof. Salokhe E.P.
	11:45AM To 12:45PM	Prof. Khan Na.G.	Prof. Momin A.M.
	12:45PM To 1:45PM	Prof. Momin A.M.	Prof. Gavade J.J.
	2:30PM To 3:30PM	Prof. Salokhe E.P.	Prof. Dhende A. N.

  
 Dept. Exam. Incharge

  
**HOD**  
 Civil Engineering  
 Sanjeevan Engineering & Technology Institute  
 Somwar Path, Panhala, Dist. Kolhapur. (416 201)

NAGK -   
 EPS -   
 AND -   
 AMM - 

Holy-wood Academy, Kolhapur's



**seti**  
SANJEEVAN ENGINEERING  
& TECHNOLOGY INSTITUTE

**SANJEEVAN ENGINEERING AND TECHNOLOGY INSTITUTE**

Sanjeevan Knowledge City, Somwar Peth- Injale, Panhala, Tal. Panhala, Dist. Kolhapur Pin- 416 201 (MS.)  
Phone : Dept: 0231 - 2586613, PBX : 0231 - 2686600, Fax : 0231 - 2586629

Approved By AICTE - New Delhi ■ Recognized by Govt. of Maharashtra & DTE ■ Affiliated to Shivaji University, Kolhapur




Website : [www.seti.edu.in](http://www.seti.edu.in) Email : [principal@seti.edu.in](mailto:principal@seti.edu.in) / [office@seti.edu.in](mailto:office@seti.edu.in) **EN 6315**

**DEPARTMENT OF CIVIL ENGINEERING**

CA-I TIME TABLE 2021-2022			
SEATING ARRANGEMENT			
DATE	CLASS	A106	A103(DH)
10/01/22	S.Y.	1 To 35	36 To 69

  
Dept. Exam. Incharge

  
HOD  
Civil Engineering  
Sanjeevan Engineering & Technology Institute  
Somwar Peth, Panhala, Dist. Kolhapur. (416 201)

NAGK -   
EPS -   
AMM - 



Holy-wood Academy, Kolhapur's  
**SANJEEVAN ENGINEERING AND TECHNOLOGY INSTITUTE**

Sanjeevan Knowledge City, Sonwar Peth- Injole, Panhala, Tal. Panhala, Dist. Kolhapur Pin- 416 201 (MS.)

Phone : Dept.: 0231 - 2686613, PBX : 0231 - 2686600, Fax : 0231 - 2686629

Approved By AICTE - New Delhi ■ Recognized by Govt. of Maharashtra & DTE ■ Affiliated to Shivaji University, Kolhapur

Website : [www.seti.edu.in](http://www.seti.edu.in) Email : [principal@seti.edu.in](mailto:principal@seti.edu.in) / [office@seti.edu.in](mailto:office@seti.edu.in)

**EN 6315**

**DEPARTMENT OF CIVIL ENGINEERING**

## NOTICE

### CA-I

### (T.Y.&B.Tech.)

Date -13/10/21

The CA-I test for T.Y. and B.Tech. is scheduled between 25<sup>th</sup> October 2021. In this regard all the staff are here by informed that, they have to submit their CA-I TEST question paper in prescribed format(hard copy 2 set) to Exam co-ordinator on or **before 21<sup>st</sup> October 2021** till 4 pm, otherwise they have to make Xerox set with number of student & submit to exam co-ordinator.

  
Prof. A. C. Thoke

Exam co-ordinator

  
Prof. J. S. Mevekari

H.O.D.  
Civil Engineering

Sanjeevan Engineering & Technology Institute  
Somwar Peth, Panhala, Dist. Kolhapur. (416 201)

1 EPS -  13/10/21

2 SSC - 

3 AND - 

4 AMM - 

5 PSS - 

6 JJG - 





Holy-wood Academy, Kolhapur's  
**SANJEEVAN ENGINEERING AND TECHNOLOGY INSTITUTE**

Sanjeevan Knowledge City, Somwar Peth- Injole, Panhala, Tal. Panhala, Dist. Kolhapur Pin- 416 201 (MS.)  
Phone : Dept.: 0231 - 2686613, PBX : 0231 - 2686600, Fax : 0231 - 2686629

Approved By AICTE - New Delhi Recognized by Govt. of Maharashtra & DTE Affiliated to Shivaji University, Kolhapur

Website : www.seti.edu.in Email : principal@seti.edu.in / office@seti.edu.in

**EN 6315**

**DEPARTMENT OF CIVIL ENGINEERING**

**CA-I TIME TABLE 2021-2022**

DATE	TIME	T.E.	B.E.
25/10/21	10:00AM To 10.30AM	DSS	DCS-II
	10:40AM To 11:10AM	SM-II	PP
	11:20AM To 11:50AM	SM	IE
	12:00 To 12:30PM	EE-I	WRE
	2:15PM To 2:45PM	TRE	CT
	3:00PM To 3:30PM	MTE	EQ

Dept. Exam. Incharge

  
MOD  
Civil Engineering  
Sanjeevan Engineering & Technology Institute  
Somwar Peth, Panhala, Dist. Kolhapur. (416 201)

1. P.S.S. - 
2. EPS - 
3. AMM - 
4. AND - 
5. JJE - 
6. SSC - 



Holy-wood Academy, Kolhapur's

**SANJEEVAN ENGINEERING AND TECHNOLOGY INSTITUTE**

Sanjeevan Knowledge City, Somwar Peth- Injole, Panhala, Tal. Panhala, Dist. Kolhapur Pin- 416 201 (MS.)

Phone : Dept: 0231 - 2686613, PBX : 0231 - 2686600, Fax : 0231 - 2686629

Approved By AICTE - New Delhi • Recognized by Govt. of Maharashtra & DTE • Affiliated to Shivaji University, Kolhapur

Website : [www.seti.edu.in](http://www.seti.edu.in) Email : [principal@seti.edu.in](mailto:principal@seti.edu.in) / [office@seti.edu.in](mailto:office@seti.edu.in)


**EN 6315**

**DEPARTMENT OF CIVIL ENGINEERING**

**CA-I TIME TABLE 2021-2022**

**SEATING ARRANGEMENT**

DATE	CLASS	A106	A107	A108	A103(DH)
25/10/21	T.Y.	1 To 35	36 To 62	-	-
	B.Tech.	-	-	1 To 35	36 To 73

  
Dept. Exam. Incharge

  
HOD  
Civil Engineering  
Sanjeevan Engineering & Technology Institute  
Somwar Peth, Panhala, Dist. Kolhapur. (416 201)



Holy-wood Academy, Kolhapur's  
**SANJEEVAN ENGINEERING AND TECHNOLOGY INSTITUTE**

Sanjeevan Knowledge City, Somwar Peth- Injole, Panhala, Tal. Panhala, Dist. Kolhapur Pin- 416 201 (MS.)  
Phone : Dept.: 0231 - 2686613, PBX : 0231 - 2686600, Fax : 0231 - 2686629

Approved By AICTE - New Delhi • Recognized by Govt. of Maharashtra & DTE • Affiliated to Shivaji University, Kolhapur

Website : www.seti.edu.in Email : principal@seti.edu.in / office@seti.edu.in

**EN 6315**

**DEPARTMENT OF CIVIL ENGINEERING**

**CA-I TIME TABLE 2021-2022**

**SUPERVISION CHART**

DATE	TIME	A106	A107	A108	A103(DH)
25/10/21	10:00AM To 10.30AM	Prof. Dhende A. N.	Prof. Shinde P.S.	Prof. Momin A.M.	Prof. Gavade J.J.
	10:40AM To 11:10AM	Prof. Shinde P.S.	Prof. Momin A.M.	Prof. Chavan S.S.	Prof. Dhende A. N.
	11:20AM To 11:50AM	Prof. Momin A.M.	Prof. Chavan S.S.	Prof. Shinde P.S.	Prof. Gavade J.J.
	12:00 To 12:30PM	Prof. Chavan S.S.	Prof. Dhende A. N.	Prof. Momin A.M.	Prof. Gavade J.J.
	2:15PM To 2:45PM	Prof. Dhende A. N.	Prof. Shinde P.S.	Prof. Gavade J.J.	Prof. Momin A.M.
	3:00PM To 3:30PM	Prof. Gavade J.J.	Prof. Shinde P.S.	Prof. Dhende A. N.	Prof. Chavan S.S.

Dept. Exam. Incharge

HOD  
Civil Engineering

Sanjeevan Engineering & Technology Institute  
Somwar Peth, Panhala, Dist. Kolhapur. (416 201)

1. ANO -

2. JJS -

3. PSS -

4. AMM -

5. SSC -



DR. BABASAHEB AMBEDKAR TECHNOLOGICAL UNIVERSITY, LONERE

Course: B. Tech in CIVIL Engineering

CA I – OCT 2021

Class: T.Y.B.Tech

Subject Name: SOIL MECHANICS

Subject Code: BTCVC 503

Max Marks: 10

Date:- 25 /10 /2021

11:20 to 11:50 Duration:- 30 min.

Instructions to the Students:


1. All questions are compulsory.
2. Figures to right indicate full marks
3. Assume suitable data whenever necessary.

Q. No.	QUESTIONS	(Level/ Marks CO)
1)	For engineering purposes, soil is defined as... a) The loose mantle at the surface of the earth which favours the growth of plant. b) A natural aggregate of mineral grains, loose or moderately cohesive, inorganic or organic in nature. c) A disintegrated rock. d) All of the above.	CO 1 1
2)	Silt is a..... a) material deposited by a glacier b) soil composed of two different soils c) fine grained soil with Little or no plasticity d) Clay with a high percentage of the clay mineral.	CO 1 1
3)	The ratio of the volume of voids to the total volume of soil mass is called? a) water content b) porosity c) void ratio d) degree of saturation	CO 1 1
4)	The relation between porosity (n) and void ratio (e) is given by a) $n = (1+e)/e$ b) $n = e/(1+e)$ c) $e = n/(1-n)$ d) $e = (1-n)/n$	CO 1 1
5)	The degree of saturation for fully saturated soil is a) 0.25 b) 0.5 c) 0.75 d) 1	CO 1 1
6)	The relation between void ratio (e) degree of saturation (s), water content (w) and specific gravity of solids (G) is given by a) $e+s = w+G$ b) $e s = w G$ c) $e-s = w-G$ d) $e w = s G$	CO 1 1
7)	A soil sample is having a specific gravity of 2.60 and void ratio 0.78. The water content in percentage required to fully saturate the soil at that void ratio would be a) 10 b) 30 c) 50 d) 70	CO 1 1
8)	If a soil sample is having porosity 40% and degree of saturation 80%, then its percentage air voids is a) 5 b) 6 c) 7 d) 8	CO 1 1

**Instructions :** – 1. All questions are compulsory. 2. Use of non-programmable calculators is permitted.

3. Write option of answer in Ans column

Q.No	Question	Ans	CO	PO	Mks
1.	In which method of population forecasting, increase in population from decade to decade is assumed constant? A) Arithmetical increase method      B) Geometrical increase method C) Incremental increase method      D) Decreased rate of growth		1	1	1
2.	What are the factors affecting per capita demand? A) Size of city B) Size of city, habit of people C) Cost of water, quality of water, size of city D) Cost of water, quality of water, size of city, habit of people		1	1	1
3.	The average quantity of water (in lpcd) required for domestic purposes according to IS code is _____ A) 100    B) 120    C) 70    D) 135		1	1	1
4.	_____ valve allows water to flow in one direction only. A) Air relief valve    B) Sluice valve    C) Reflux valve    D) Altitude valve		1	1	1
5.	The time period for which the water is stored in a sedimentation tank is called _____ A) Time of flow      B) Frequency of flow C) Settling time      D) Detention period		1	1	1
6.	Water lost in thef, pipes,water system and waste contributes to how much % of total consumption? A) 5    B) 10    C) 15    D) 20		1	1	1
7.	Identify the correct relation between the following? A) Dissolved solid = Total solid + Suspended solid B) Dissolved solid = Total solid – Suspended solid C) Total solid = Dissolved solid / Suspended solid D) Dissolved solid = Suspended solid – Total solid		1	1	1
8.	What is formed when coagulant is added to water? A) Scum    B) Soap    C) Bubbles    D) Floc		1	1	1
9.	The devices which are installed for drawing water from the sources are called A)Aquifers    B)Aquiclude    C) Intakes structure    D) Filters		1	1	1
10.	The reduction of carbon dioxide by cascade aerators is in the range of _____ A) 10-20%    B) 20-30%    C) 40-50%    D) 50-60%		1	1	1


**Holy-wood Academy, Kolhapur's**  
**SANJEEVAN ENGINEERING AND TECHNOLOGY INSTITUTE**  
 Sanjeevan Knowledge City, Somwar Peth, Injole, Panhala, Tal. Panhala, Dist. Kolhapur Pin- 416 201 (MS.)  
 Phone : Dept: 0231 - 2686613, PBX : 0231 - 2686600, Fax : 0231 - 2686629  
 ■ Approved By AICTE - New Delhi ■ Recognized by Govt. of Maharashtra & DTE ■ Affiliated to Shivaji University, Kolhapur  
 Website : www.seti.edu.in Email : principal@seti.edu.in / office@seti.edu.in **EN 6315**  
**DEPARTMENT OF CIVIL ENGINEERING**

## NOTICE


### CA-I Improvement Test

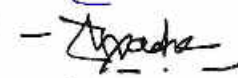
T.Y. and B.Tech. (SEM- V, VII)

Date -25/01/22

The CA-I Improvement Test for all students is scheduled on 29<sup>th</sup> January 2022. In this regard all the staff here by informed that, they have to prepare CA-I Improvement Test question paper in the Google form

  
**HOD**  
**Civil Engineering**  
 Sanjeevan Engineering & Technology Institute  
 Somwar Peth, Panhala, Dist. Kolhapur. (416 201)

EPS - 

DDG - 

SSC - 

AMM - 



Holy-wood Academy, Kolhapur's  
**SANJEEVAN ENGINEERING AND TECHNOLOGY INSTITUTE**

Sanjeevan Knowledge City, Somwar Peth- Injole, Panhala, Tal. Panhala, Dist. Kolhapur Pin- 416 201 (MS.)  
Phone : Dept : 0231 - 2686613, PBX : 0231 - 2686600, Fax : 0231 - 2686629

Approved By AICTE - New Delhi ■ Recognized by Govt. of Maharashtra & DTE ■ Affiliated to Shivaji University, Kolhapur

Website : [www.seti.edu.in](http://www.seti.edu.in) Email : [principal@seti.edu.in](mailto:principal@seti.edu.in) / [office@seti.edu.in](mailto:office@seti.edu.in)

**EN 6315**

**DEPARTMENT OF CIVIL ENGINEERING**

**CA-I Improvement Test**

**TIME TABLE 2021-2022**

DATE	TIME	T.Y.	B.Tech.
29/01/22	10:00AM To 10.30AM	DSS	DCS-II
	10:40AM To 11:10AM	SM-II	PP
	11:20AM To 11:50AM	SM	IE
	12:00 To 12:30PM	EE-I	WRE
	2:15PM To 2:45PM	TRE	CT
	3:00PM To 3:30PM	MTE	EQ

Dept. Exam. Incharge

HOD

Civil Engineering

Sanjeevan Engineering & Technology Institute  
Somwar Peth, Panhala, Dist. Kolhapur. (416 201)

EPS -

JJ4 -

SSC -

AMM -



Holy-wood Academy, Kolhapur's  
**SANJEEVAN ENGINEERING AND TECHNOLOGY INSTITUTE**

Sanjeevan Knowledge City, Somwar Peth- Injole, Panhala, Tal. Panhala, Dist. Kolhapur Pin- 416 201 (MS.)  
Phone : Dept. 0231 - 2686613, PBX : 0231 - 2686608, Fax : 0231 - 2686629

Approved By AICTE - New Delhi ■ Recognized by Govt. of Maharashtra & DTE ■ Affiliated to Shivaji University, Kolhapur

Website : [www.seti.edu.in](http://www.seti.edu.in) Email : [principal@seti.edu.in](mailto:principal@seti.edu.in) / [office@seti.edu.in](mailto:office@seti.edu.in)

**EN 6315**

**DEPARTMENT OF CIVIL ENGINEERING**

## NOTICE

CA-II

(S.Y.&T.Y.)

Date -27/06/22

The CA-II test for S.Y. and T.Y. is scheduled between 05<sup>th</sup> July 2022. In this regard all the staff are here by informed that, they have to submit their CA-II TEST question paper in prescribed format(hard copy 2 set) to Exam co-ordinator on or before 30<sup>th</sup> July 2022 till 4 pm, otherwise they have to make Xerox set with number of student & submit to exam co-ordinator.

Prof. A. C. Thoke

Exam co-ordinator

Prof. J. S. Mevekari

H.O.D. Civil

1 EPS

2 SSC

3 SMS

4 AMM

5 AND

6 JJG

**HOD**

**Civil Engineering**

**Sanjeevan Engineering & Technology Institute,  
Somwar Peth, Panhala, Dist. Kolhapur. (416 201)**





Holy-wood Academy, Kolhapur's  
**SANJEEVAN ENGINEERING AND TECHNOLOGY INSTITUTE**

Sanjeevan Knowledge City, Somwar Peth- Injole, Panhala, Tal. Panhala, Dist. Kolhapur Pin- 416 201 (MS.)  
Phone : Dept. : 0231 - 2686613, PBX : 0231 - 2686600, Fax : 0231 - 2686629

Approved By AICTE - New Delhi ■ Recognized by Govt. of Maharashtra & DTE ■ Affiliated to Shivaji University, Kolhapur

Website : [www.seti.edu.in](http://www.seti.edu.in) Email : [principal@seti.edu.in](mailto:principal@seti.edu.in) / [office@seti.edu.in](mailto:office@seti.edu.in)

**EN 6315**

**DEPARTMENT OF CIVIL ENGINEERING**

**CA-II TIME TABLE 2021-2022**

DATE	TIME	S.Y.	T.Y.
05/07/22	10:00AM To 10.30AM	SM-I	DCS-I
	10:40AM To 11:10AM	HYD-II	FE
	11:20AM To 11:50AM	WRE	PM
	12:00 To 12:30PM	EE	WWT
	2:15PM To 2:45PM	EG	CT
	3:00PM To 3:30PM	BCD	BPD

Dept. Exam. Incharge

EPS - *[Signature]*

AMM - *[Signature]*

JJH - *[Signature]*

SSL - *[Signature]*

AND - *[Signature]*

SNJ - *[Signature]*

*[Signature]*  
HOD  
Civil Engineering  
Sanjeevan Engineering & Technology Institute  
Somwar Peth, Panhala, Dist. Kolhapur. (416 201)



Holy-wood Academy, Kolhapur's  
**SANJEEVAN ENGINEERING AND TECHNOLOGY INSTITUTE**

Sanjeevan Knowledge City, Somwar Peth- Injole, Panhala, Tal. Panhala, Dist. Kolhapur Pin- 416 201 (M.S.)  
Phone : Dept. : 0231 - 2686613, PBX : 0231 - 2686600, Fax : 0231 - 2686629

Approved By AICTE - New Delhi Recognized by Govt. of Maharashtra & DTE Affiliated to Shivaji University, Kolhapur

Website : www.seti.edu.in Email : principal@seti.edu.in / office@seti.edu.in


**EN 6315**







**DEPARTMENT OF CIVIL ENGINEERING**

**CA-II TIME TABLE 2021-2022**

**SUPERVISION CHART**

DATE	TIME	A106	A107
05/07/22	10:00AM To 10.30AM	Prof. Salokhe E.P.	Prof. Dhende A. N.
	10:40AM To 11:10AM	Prof. Shinde S.M.	Prof. Momin A.M.
	11:20AM To 11:50AM	Prof. Momin A.M.	Prof. Chavan S.S.
	12:00 To 12:30PM	Prof. Chavan S.S.	Prof. Gavade J.J.
	2:15PM To 2:45PM	Prof. Dhende A. N.	Prof. Shinde S.M.
	3:00PM To 3:30PM	Prof. Gavade J.J.	Prof. Salokhe E.P.

  
Dept.Exam. Incharge

EPS.   
AMM -   
JH -   
SSC   
AND -   
SMS - 

  
**HOD**  
Civil Engineering

Sanjeevan Engineering & Technology Institute  
Somwar Peth, Panhala, Dist. Kolhapur. (416 201)

Holy-wood Academy, Kolhapur's

**seti**  
SANJEEVAN ENGINEERING AND TECHNOLOGY INSTITUTE

Sanjeevan Knowledge City, Somwar Peth- Inrde, Panhala, Tal. Panhala Dist. Kolhapur Pin- 416 201 (MS.)  
Phone : Dept: 0231 - 2686613, PBX : 0231 - 2686600, Fax : 0231 - 2686629

Approved By AICTE - New Delhi ■ Recognized by Govt. of Maharashtra & DTE ■ Affiliated to Shivaji University, Kolhapur





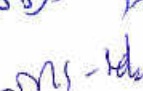
Website : [www.seti.edu.in](http://www.seti.edu.in) Email : [principal@seti.edu.in](mailto:principal@seti.edu.in) / [office@seti.edu.in](mailto:office@seti.edu.in) **EN 6315**

DEPARTMENT OF CIVIL ENGINEERING

CA-II TIME TABLE 2021-2022			
SEATING ARRANGEMENT			
DATE	CLASS	A106	A107
05/07/22	S.Y.	1 To 35	36 To 71
	T.Y.	1 To 35	36 To 62

  
Dept. Exam. Incharge

  
**HOD**  
Civil Engineering  
Sanjeevan Engineering & Technology Institute  
Somwar Peth, Panhala, Dist. Kolhapur. (416 201)

EPS -   
AMM -   
JJK -   
AND -   
SMS - 

- Instructions:** – 1. All questions are compulsory.  
2. Write option of answer in Ans column

Q. No	Question	Ans	CO	PO	Mks
1	The term _____ is used to mean the free passage of clean air in a structure. a) Circulation c) Dissipation	b) Ventilation d) Condensation	1	1	
2	It is quite evident that the incoming air for ventilation should be _____ in summer and _____ in winter before it enters the room. a) cool, warm c) humid, dry	b) warm, cool d) dry, humid	1	1	
3	In _____ system, the use is made of doors, windows, ventilators and skylights to make the room properly ventilated. a) Artificial ventilation c) Air conditioning	b) Natural ventilation d) Mechanical ventilation	1	1	
4	Exhaust system, supply system, air conditioning, etc. comes under _____ type of ventilation system. a) Natural c) Man made	b) Mechanical d) Doors	1	1	
5	One pipe system is cheaper than the single stack system for the drainage of buildings. a) True	b) False	1	1	
6	Which pipe is mostly used for carrying cold water? a) Copper pipe c) PVC pipe	b) Steel pipe d) Lead pipe	1	1	
7	Which pipe is used for carrying cold and hot water? a) Poly propylene c) High density poly ethylene	b) Poly propylene random co-polymer d) Low density poly ethylene	1	1	
8	State the two advantages of PVC pipes? a) Durable and corrosion free c) Light weight and economical	b) Durable and economical d) Light weight & corrosion free	1	1	
9	Green building practices include a) Only energy efficiency. c) Only Environmental Protection	b) Only recycled materials d) All of these	1	1	
10	Which of the following is not the purpose of a green building? a) To reduce use of water a) c) Re-use of waste materials	b) To minimize damage d) None of the above	1	1	



**Holy-wood Academy's**  
**SANJEEVAN ENGINEERING AND TECHNOLOGY INSTITUTE, PANHALA**  
**DEPARTMENT OF CIVIL ENGINEERING**

C. A. 2

Class – Second Year B. Tech Civil

Subject – Building Planning and Drawing (BTCVC 401)

Marks -10

Date – 05/07/2022

Time – 03:00 am to 03:30 am

Name of Student:

Roll No.

PRN No.

- Instructions:** – 1. All questions are compulsory.  
 2. Write option of answer in Ans column

**Answer Solution**

Q. No	Question	Ans	CO	PO	Mks
1	The term _____ is used to mean the free passage of clean air in a structure. a) Circulation b) Ventilation c) Dissipation d) Condensation	B	1	1	
2	It is quite evident that the incoming air for ventilation should be _____ in summer and _____ in winter before it enters the room. a) cool, warm b) warm, cool c) humid, dry d) dry, humid	A	1	1	
3	In _____ system, the use is made of doors, windows, ventilators and skylights to make the room properly ventilated. a) Artificial ventilation b) Natural ventilation c) Air conditioning d) Mechanical ventilation	B	1	1	
4	Exhaust system, supply system, air conditioning, etc. comes under _____ type of ventilation system. a) Natural b) Mechanical c) Man made d) Doors	B	1	1	
5	One pipe system is cheaper than the single stack system for the drainage of buildings. a) True b) False	B	1	1	
6	Which pipe is mostly used for carrying cold water? a) Copper pipe b) Steel pipe c) PVC pipe d) Lead pipe	C	1	1	
7	Which pipe is used for carrying cold and hot water? a) Poly propylene b) Poly propylene random co-polymer c) High density poly ethylene d) Low density poly ethylene	B	1	1	
8	State the two advantages of PVC pipes? a) Durable and corrosion free b) Durable and economical c) Light weight and economical d) Light weight & corrosion free	D	1	1	
9	Green building practices include a) Only energy efficiency. b) Only recycled materials c) Only Environmental Protection d) All of these	D	1	1	
10	Which of the following is not the purpose of a green building? a) To reduce use of water b) To minimize damage c) Re-use of waste materials d) None of the above	D	1	1	



Holy-wood Academy, Kolhapur's  
**SANJEEVAN ENGINEERING AND TECHNOLOGY INSTITUTE**

Sanjeevan Knowledge City, Somwar Peth- Injole, Panhala, Tal. Panhala, Dist. Kolhapur Pin- 416 201 (MS.)  
Phone : Dept. 0231 - 2688613, PBX : 0231 - 2688600, Fax : 0231 - 2686629

Approved By AICTE - New Delhi ■ Recognized by Govt. of Maharashtra & DTE ■ Affiliated to Shivaji University, Kolhapur

Website : [www.seti.edu.in](http://www.seti.edu.in) Email : [principal@seti.edu.in](mailto:principal@seti.edu.in) / [office@seti.edu.in](mailto:office@seti.edu.in)

**EN 6315**

**DEPARTMENT OF CIVIL ENGINEERING**

## NOTICE

### CA-II

#### (Final Year B.Tech.)

Date -20/06/22

The CA-II test Final Year B.Tech. is scheduled between 27<sup>th</sup> June 2022. In this regard all the staff are here by informed that , they have to submit their CA-II TEST question paper in prescribed format(hard copy 2 set) to Exam co-ordinator on or **before 24<sup>th</sup> June 2022** till 4 pm, otherwise they have to make Xerox set with number of student & submit to exam co-ordinator.

  
Prof. A. C. Thoke

Exam co-ordinator

  
Prof. J. S. Mevekari

H.O.D. Civil

1 EPS 

**HOD**  
**Civil Engineering**  
Sanjeevan Engineering & Technology Institute  
Somwar Peth, Panhala, Dist. Kolhapur. (416 201)

Holy-wood Academy, Kolhapur's

**seti**  
SANJEEVAN ENGINEERING & TECHNOLOGY INSTITUTE

Sanjeevan Knowledge City, Somwar Peth- Injole, Panhala, Tal. Panhala, Dist. Kolhapur Pin- 416 201 (MS.)  
Phone : Dept.: 0231 - 2686613, PBX : 0231 - 2686600, Fax : 0231 - 2686629

Approved By AICTE - New Delhi ■ Recognized by Govt. of Maharashtra & DTE ■ Affiliated to Shivaji University, Kolhapur

Website : [www.seti.edu.in](http://www.seti.edu.in) Email : [principal@seti.edu.in](mailto:principal@seti.edu.in) / [office@seti.edu.in](mailto:office@seti.edu.in) **EN 6315**

DEPARTMENT OF CIVIL ENGINEERING

CAII TIME TABLE 2021-2022		
DATE	TIME	B.TECH.
27/06/22	10:00AM To 10.30AM	MROCS
	11:00AM To 11:30AM	RSE

  
Dept. Exam. Incharge

  
**HOD**  
**Civil Engineering**  
Sanjeevan Engineering & Technology Institute  
Somwar Peth, Panhala, Dist. Kolhapur. 416 201



Holy-wood Academy, Kolhapur's

**SANJEEVAN ENGINEERING AND TECHNOLOGY INSTITUTE**

Sanjeevan Knowledge City, Somwar Peth- Injote, Panhala, Tal. Panhala, Dist. Kolhapur Pin- 416 201 (MS.)

Phone : Dept. 0231 - 2686613, PBX : 0231 - 2686600, Fax : 0231 - 2686629

Approved By AICTE - New Delhi ■ Recognized by Govt. of Maharashtra & DTE ■ Affiliated to Shivaji University, Kolhapur

Website : www.seti.edu.in Email : principal@seti.edu.in / office@seti.edu.in


**EN 6315**

**DEPARTMENT OF CIVIL ENGINEERING**

**CAII (B.Tech.) TIME TABLE 2021-2022**


**SUPERVISION CHART**

DATE	TIME	A106	A103(DH)
27/06/22	10:00AM To 10.30AM	Prof. Momin A.M.	Prof. Gavade J.J.
	11:00AM To 11:30AM	Prof. Momin A.M.	Prof. Shinde S.M.

  
Dept. Exam. Incharge

  
**HOD**  
**Civil Engineering**  
Sanjeevan Engineering & Technology Institute  
Somwar Peth, Panhala, Dist. Kolhapur. (416 201)

AMM - 

SMI - 

JJG - 





Holy-wood Academy, Kolhapur's

**SANJEEVAN ENGINEERING AND TECHNOLOGY INSTITUTE**

Sanjeevan Knowledge City, Somwar Peth- Injale, Panhala, Tal. Panhala, Dist. Kolhapur Pin- 416 201 (MS.)

Phone : Dept. 0231 - 2686613, FBX : 0231 - 2686630, Fax : 0231 - 2686629

Approved By AICTE - New Delhi ■ Recognized by Govt. of Maharashtra & DTE ■ Affiliated to Shivaji University, Kolhapur

Website : [www.seti.edu.in](http://www.seti.edu.in) Email : [principal@seti.edu.in](mailto:principal@seti.edu.in) / [office@seti.edu.in](mailto:office@seti.edu.in)


**EN 6315**

**DEPARTMENT OF CIVIL ENGINEERING**

**CAII (B.Tech.) TIME TABLE 2021-2022**

**SEATING ARRANGEMENT**

DATE	CLASS	A106	A103(DH)
27/06/2022	B.Tech.	1 To 35	36 To 73

  
Dept. Exam. Incharge

  
**HOD**

**Civil Engineering**  
Sanjeevan Engineering & Technology Institute  
Somwar Peth, Panhala, Dist. Kolhapur. (416 201)

AM



Class - B. Tech Civil

Date - 27/06/2022

Name of Student :

Roll No.

PRN No.

Hollywood Academy's  
SANJEEVAN ENGINEERING AND TECHNOLOGY INSTITUTE, PANHALA  
DEPARTMENT OF CIVIL ENGINEERING

C.A.2

Subject - Repair and maintenance of concrete structure Marks -10  
Time -10.00 to 10.30 am

Instructions: - 1. All questions are compulsory. 2. Write option of answer in Ans column

Q.No	Question	Ans	CO	PO	Mks
1.	Presence of drip edges in building components prevents the water infiltration due a. Surface tension      b. Capillary actions c. Gravity actions      d. Air current				1
2.	Following is not system to prevent water leakage a. Barrier      b. Drainage      c. Diversion      d. Water sink				1
3.	Weep holes provide an opening allows the drainage of any moisture that may come from back of wall through penetration, leakage or capillary action? a. True      b. False				1
4.	Brick bat coba is used for waterproofing of a. Terrace slab      b. Retaining wall      c. External wall      d. Floor slab				1
5.	Chlorinated Rubber Coatings is used in wet atmospheres for both steel and concrete substrates a. True      b. False				1
6.	Epoxy Coatings is used in a. Chemical atmospheres      c. dry atmospheres b. Wet atmospheres      d. None of the above				1
7.	In Nuclear power plant following type of coating is commonly used a. Epoxy coating      b. Polyurethane Coatings c. Zinc Coatings      d. Alkyd Coatings				1
8.	In sacrificial anode cathode protection method -----is used as anode a. Zinc      b. Steel      c. Concrete      d. None of these				1
9.	In electrochemical chloride extraction -----ions brought below threshold limit a. Chloride      b. Sulphur      c. Carbon      d. None of these				1
10.	Electrochemical realkalization is used to stop ----- corrosion a. Carbon induced corrosion      b. Chloride induced corrosion c. Sulphur induced corrosion      d. None of these				1

.....

# Answer key



Class – B. Tech Civil

Date – 27/06/2022

Name of Student :

Roll No.

PRN No.

Hollywood Academy's

SANJEEVAN ENGINEERING AND TECHNOLOGY INSTITUTE, PANHALA

DEPARTMENT OF CIVIL ENGINEERING

C.A.2

Subject – Repair and maintenance of concrete structure Marks -10

Time –10.00 to 10.30 am

**Instructions:** – 1. All questions are compulsory. 2. Write option of answer in Ans column

Q.No	Question	Ans	CO	PO	Mks
1.	Presence of drip edges in building components prevents the water infiltration due a. Surface tension      b. Capillary actions c. Gravity actions      d. Air current	A			1
2.	Following is not system to prevent water leakage a. Barrier      b. Drainage      c. Diversion      d. Water sink	D			1
3.	Weep holes provide an opening allows the drainage of any moisture that may come from back of wall through penetration, leakage or capillary action? a. True      b. False	A			1
4.	Brick bat coba is used for waterproofing of a. Terrace slab      b. Retaining wall      c. External wall      d. Floor slab	A			1
5.	Chlorinated Rubber Coatings is used in wet atmospheres for both steel and concrete substrates a. True      b. False	A			1
6.	Epoxy Coatings is used in a. Chemical atmospheres      c. dry atmospheres b. Wet atmospheres      d. None of the above	A			1
7.	In Nuclear power plant following type of coating is commonly used a. Epoxy coating      b. Polyurethane Coatings c. Zinc Coatings      d. Alkyd Coatings	A			1
8.	In sacrificial anode cathode protection method -----is used as anode a. Zinc      b. Steel      c. Concrete      d. None of these	A			1
9.	In electrochemical chloride extraction -----ions brought below threshold limit a. Chloride      b. Sulpher      c. Carbon      d. None of these	A			1
10.	Electrochemical realkalization is used to stop ----- corrosion a. Carbon induced corrosion      b. Chloride induced corrosion c. Sulpher induced corrosion      d. None of these	A			1

.....



Holy-wood Academy, Kolhapur's

**SANJEEVAN ENGINEERING AND TECHNOLOGY INSTITUTE**

Sanjeevan Knowledge City, Somwar Peth- Injole, Panhala, Tal. Panhala, Dist. Kolhapur Pin- 416 201 (MS.)

Phone : Dept: 0231 - 2686613, PBX : 0231 - 2686600, Fax : 0231 - 2686629

Approved By AICTE - New Delhi ■ Recognized by Govt. of Maharashtra & DTE ■ Affiliated to Shivaji University, Kolhapur

Website : [www.seti.edu.in](http://www.seti.edu.in) Email : [principal@seti.edu.in](mailto:principal@seti.edu.in) / [office@seti.edu.in](mailto:office@seti.edu.in)

**EN 6315**

**DEPARTMENT OF CIVIL ENGINEERING**

**NOTICE**

**CA-II Test**

**S.Y. (SEM- III)**

Date -14/02/22

The CA-II Test for all students is scheduled on **18<sup>th</sup> February 2022**. In this regard all the staff here by informed that, they have to prepare **CA-II Test** question paper in the **Google form**

  
**HOD**  
**Civil Engineering**  
Sanjeevan Engineering & Technology Institute  
Somwar Peth, Panhala, Dist. Kolhapur (416 201)



Holy-wood Academy, Kolhapur's  
**SANJEEVAN ENGINEERING AND TECHNOLOGY INSTITUTE**

Sanjeevan Knowledge City, Sonwar Path, Injole, Panhala, Tal. Panhala, Dist. Kolhapur Pin-416 201 (MS.)  
Phone : Dept: 0231 - 2686613, PBX : 0231 - 2686600, Fax : 0231 - 2686629

Approved By AICTE - New Delhi ■ Recognized by Govt. of Maharashtra & DTE ■ Affiliated to Shivaji University, Kolhapur

Website : [www.seti.edu.in](http://www.seti.edu.in) Email : [principal@seti.edu.in](mailto:principal@seti.edu.in) / [office@seti.edu.in](mailto:office@seti.edu.in)

**EN 6315**

DEPARTMENT OF CIVIL ENGINEERING

**CA-II TEST TIME TABLE 2021-2022**

DATE	TIME	S.Y.
18/02/22	9:30AM To 10.30AM	SUR-I
	10:30AM To 11:30AM	MOS
	11:45AM To 12:45PM	M-III
	12:45PM To 1:45PM	HY-I
	2:30PM To 3:30PM	BCD

Dept. Ex. Incharge

HOD

Civil Engineering  
Sanjeevan Engineering & Technology Institute  
Sonwar Path, Panhala, Dist. Kolhapur, (416 201)



Holy-wood Academy, Kolhapur's  
**SANJEEVAN ENGINEERING AND TECHNOLOGY INSTITUTE**

Sanjeevan Knowledge City, Somwar Peth- Injole, Panhala, Tal. Panhala, Dist. Kolhapur Pin- 416 201 (MS.)  
Phone : Dept: 0231 - 2686613, PBX - 0231 - 2686600, Fax : 0231 - 2686629

Approved By AICTE - New Delhi ■ Recognized by Govt. of Maharashtra & DTE ■ Affiliated to Shivaji University, Kolhapur

Website : [www.seti.edu.in](http://www.seti.edu.in) Email : [principal@seti.edu.in](mailto:principal@seti.edu.in) / [office@seti.edu.in](mailto:office@seti.edu.in)

**EN 6315**

**DEPARTMENT OF CIVIL ENGINEERING**

## NOTICE

### CA-II

**T.Y. and B.Tech. (SEM- V, VII)**

Date -12/01/22

The CA-II test for all students is scheduled on **20<sup>th</sup> January 2022**. In this regard all the staff here by informed that, they have to prepare CA-II question paper in the **Google form**

  
**HOD**  
**Civil Engineering**  
Sanjeevan Engineering & Technology Institute  
Somwar Peth, Panhala, Dist. Kolhapur, 416 201

ACT - AS

AND - AM

EPS - SA

AMM - AM

JJK - AM



Holy-wood Academy, Kolhapur's  
**SANJEEVAN ENGINEERING AND TECHNOLOGY INSTITUTE**

Sanjeevan Knowledge City, Somwar Peth- Injole, Panhala, Tal. Panhala, Dist. Kolhapur Pin- 416 201 (MS.)  
Phone : Dept: 0231 - 2686613, PBX : 0231 - 2686600, Fax : 0231 - 2686629

Approved By AICTE - New Delhi ■ Recognized by Govt. of Maharashtra & DTE ■ Affiliated to Shivaji University, Kolhapur

Website : [www.seti.edu.in](http://www.seti.edu.in) Email : [principal@seti.edu.in](mailto:principal@seti.edu.in) / [office@seti.edu.in](mailto:office@seti.edu.in)

**EN 6315**

**DEPARTMENT OF CIVIL ENGINEERING**

## NOTICE

### CA-II

### (T.Y.&B.Tech.)

Date -04/01/22

The CA-II test for T.Y. and B.Tech. is scheduled on **12<sup>th</sup> January 2022**. In this regard all the staff are here by informed that , they have to submit their CA-II TEST question paper in prescribed format(hard copy 2 set) to Exam co-ordinator on or **before 8<sup>th</sup> January 2022** till 4 pm, otherwise they have to make Xerox set with number of student & submit to exam co-ordinator.

  
Prof. A. C. Thoke

Exam co-ordinator

  
Prof. J. S. Mevekari


**HOD**  
**H.O.D. Civil**

Sanjeevan Engineering & Technology Institute  
Somwar Peth, Panhala, Dist. Kolhapur. (416-201)

1 EPS - 

2 SSC - 

3 AND - 

4 AMM - 

5 PSS - 

6 JJG - 



Holy-wood Academy, Kolhapur's

**SANJEEVAN ENGINEERING AND TECHNOLOGY INSTITUTE**

Sanjeevan Knowledge City, Somwar Peth- Injole, Panhala, Tal. Panhala, Dist. Kolhapur Pin-416 201 (MS.)

Phone : Dept: 0231 - 2686613, PBX : 0231 - 2686600, Fax : 0231 - 2686629

Approved By AICTE - New Delhi ■ Recognized by Govt. of Maharashtra & DTE ■ Affiliated to Shivaji University, Kolhapur

Website : [www.seti.edu.in](http://www.seti.edu.in) Email : [principal@seti.edu.in](mailto:principal@seti.edu.in) / [office@seti.edu.in](mailto:office@seti.edu.in)

**EN 6315**

**DEPARTMENT OF CIVIL ENGINEERING**

**CA-II TIME TABLE 2021-2022**

DATE	TIME	T.E.	B.E.
12/01/22	10:00AM To 10.30AM	DSS	DCS-II
	10:40AM To 11:10AM	SM-II	PP
	11:20AM To 11:50AM	SM	IE
	12:00 To 12:30PM	EE-I	WRE
	2:15PM To 2:45PM	TRE	CT
	3:00PM To 3:30PM	MTE	EQ

Dept.Exam. Incharge

*Shreevetani*  
HOD

Civil Engineering

Sanjeevan Engineering & Technology Institute  
Somwar Peth, Panhala, Dist. Kolhapur. (416 201)

EPS - *[Signature]*  
JJJ - *[Signature]*  
PSS - *[Signature]*  
AMM - *[Signature]*  
SEC - *[Signature]*  
AND - *[Signature]*





Holy-wood Academy, Kolhapur's  
**SANJEEVAN ENGINEERING AND TECHNOLOGY INSTITUTE**

Sanjeevan Knowledge City, Somwar Peth- Injole, Panhala, Tal. Panhala, Dist. Kolhapur Pin- 416 201 (MS.)  
Phone : Dept.: 0231 - 2686613, PBX : 0231 - 2686600, Fax : 0231 - 2686629

Approved By AICTE - New Delhi ■ Recognized by Govt. of Maharashtra & DTE ■ Affiliated to Shivaji University, Kolhapur

Website : [www.seti.edu.in](http://www.seti.edu.in) Email : [principal@seti.edu.in](mailto:principal@seti.edu.in) / [office@seti.edu.in](mailto:office@seti.edu.in)

**EN 6315**

**DEPARTMENT OF CIVIL ENGINEERING**

**CA-II TIME TABLE 2021-2022**

**SUPERVISION CHART**

DATE	TIME	A106	A107	A108	A103(DH)
12/01/22	10:00AM To 10.30AM	Prof. Dhende A. N.	Prof. Salokhe E.P.	Prof. Momin A.M.	Prof. Gavade J.J.
	10:40AM To 11:10AM	Prof. Salokhe E.P.	Prof. Momin A.M.	Prof. Chavan S.S.	Prof. Dhende A. N.
	11:20AM To 11:50AM	Prof. Momin A.M.	Prof. Chavan S.S.	Prof. Salokhe E.P.	Prof. Gavade J.J.
	12:00 To 12:30PM	Prof. Chavan S.S.	Prof. Dhende A. N.	Prof. Momin A.M.	Prof. Gavade J.J.
	2:15PM To 2:45PM	Prof. Dhende A. N.	Prof. Salokhe E.P.	Prof. Gavade J.J.	Prof. Momin A.M.
	3:00PM To 3:30PM	Prof. Gavade J.J.	Prof. Salokhe E.P.	Prof. Dhende A. N.	Prof. Chavan S.S.

Dept. Exam. Incharge

*Timevetkar*  
HOD

Civil Engineering  
Sanjeevan Engineering & Technology Institute  
Somwar Peth, Panhala, Dist. Kolhapur. (416 201)

EPS - *EPS*  
JSH - *JSH*  
AMM - *AMM*  
SSC - *SSC*  
AND - *AND*



Holy-wood Academy, Kolhapur's  
**SANJEEVAN ENGINEERING AND TECHNOLOGY INSTITUTE**

Sanjeevan Knowledge City, Somwar Peth- Injole, Panhala, Tal. Panhala, Dist. Kolhapur Pin- 416 201 (MS.)  
Phone : Dept: 0231 - 2686613, PBX : 0231 - 2686600, Fax : 0231 - 2686629

Approved By AICTE - New Delhi ■ Recognized by Govt. of Maharashtra & DTE ■ Affiliated to Shivaji University, Kolhapur

Website : www.seti.edu.in Email : principal@seti.edu.in / office@seti.edu.in


**EN 6315**

**DEPARTMENT OF CIVIL ENGINEERING**





**CA-II TIME TABLE 2021-2022**

**SEATING ARRANGEMENT**

DATE	CLASS	A106	A107	A108	A103(DH)
12/01/22	T.Y.	1 To 35	36 To 62	-	-
	B.Tech.	-	-	1 To 35	36 To 73

  
Dept Exam. Incharge

  
HOD  
Civil Engineering  
Sanjeevan Engineering & Technology Institute  
Somwar Peth, Panhala, Dist. Kolhapur. (416 201)

JSh -   
AMM -   
SSC -   
AMD - 



Holy-wood Academy, Kolhapur's  
**SANJEEVAN ENGINEERING AND TECHNOLOGY INSTITUTE**

Sanjeevan Knowledge City, Somwar Peth- Injole, Panhala, Tal. Panhala, Dist. Kolhapur Pin- 416 201 (MS.)

Phone : Dept : 0231 - 2686613, PBX : 0231 - 2686600, Fax : 0231 - 2686629

Approved By AICTE - New Delhi ■ Recognized by Govt. of Maharashtra & DTE ■ Affiliated to Shivaji University, Kolhapur

Website : [www.seti.edu.in](http://www.seti.edu.in) Email : [principal@seti.edu.in](mailto:principal@seti.edu.in) / [office@seti.edu.in](mailto:office@seti.edu.in)

**EN 6315**

**DEPARTMENT OF CIVIL ENGINEERING**

## NOTICE

### MID TERM EXAM

#### S.Y (SEM-IV)

Date -06/06/22

The **Mid-term exam** test for S.Y scheduled on **10<sup>th</sup> June 2022** to **11<sup>th</sup> June 2022**. In regard all the staff here by informed that , they have to submit their **Mid-term exam TEST** question paper hard copy 2 set Exam co-ordinator on or **before 8<sup>h</sup> June 2022** till 4 pm, otherwise they have to make Xerox set with number of student & submit to Exam co-ordinator

  
Prof. A. C. Thoke

Exam co-ordinator

1 EPS



2 SSC



3 AND

4 AMM



5 JJG



6 SMS



  
Prof. J.S. Mevekari

H.O.D. Civil

**HOD**

**Civil Engineering**

Sanjeevan Engineering & Technology Institute  
Somwar Peth, Panhala, Dist. Kolhapur. (416 201)

Holy-wood Academy, Kolhapur's

**seti**  
SARJEEVAN ENGINEERING & TECHNOLOGY INSTITUTE

Sanjeevan Knowledge City, Somwar Peth- Injole, Panhala, Tal. Panhala, Dist. Kolhapur Pin- 416 201 (MS.)  
Phone : Dept. : 0231 - 2686613, PBX : 0231 - 2686609, Fax : 0231 - 2686629

Approved By AICTE - New Delhi ■ Recognized by Govt. of Maharashtra & DTE ■ Affiliated to Shivaji University, Kolhapur


Website : www.seti.edu.in Email : principal@seti.edu.in / office@seti.edu.in **EN 6315**


**DEPARTMENT OF CIVIL ENGINEERING**


<b>MSE (S.Y.) TIME TABLE 2021-2022</b>		
DATE	TIME	S.Y.
<b>10/06/22</b>	10:00AM To 11.00AM	SM-I
	12:00 noon To 1:00PM	HYD-II
	3:00PM To 4:00PM	WRE
<b>11/06/22</b>	10:00AM To 11.00AM	EE
	12:00 noon To 1:00PM	EG
	3:00PM To 4:00PM	BPD


  
Dept. Exam. Incharge


  
HOD  
Civil Engineering  
Sanjeevan Engineering & Technology Institute  
Somwar Peth, Panhala, Dist. Kolhapur. (416 201)

SSC 


APM 

Sony - 

EPS - 

SS hr - 

Holy-wood Academy, Kolhapur's



**SANJEEVAN ENGINEERING AND TECHNOLOGY INSTITUTE**

Sanjeevan Knowledge City, Somwar Peth- Ingate, Panhala, Tal. Panhala, Dist. Kolhapur Pin-416 201 (MS.)

Phone : Dept. - 0251 - 2688013, PEX - 0251 - 2686630, Fax - 0251 - 2686625

Approved By AICTE - New Delhi ■ Recognized by Govt. of Maharashtra & DTE ■ Affiliated to Shivaji University, Kolhapur






Website : [www.seti.edu.in](http://www.seti.edu.in) Email : [principal@seti.edu.in](mailto:principal@seti.edu.in) / [office@seti.edu.in](mailto:office@seti.edu.in) **EN 6315**

**DEPARTMENT OF CIVIL ENGINEERING**

<b>MSE(S.Y.) TIME TABLE 2021-2022</b>			
<b>SEATING ARRANGEMENT</b>			
<b>DATE</b>	<b>CLASS</b>	<b>A107</b>	<b>A108</b>
10/06/22	S.Y.	1 To 35	36 To 62
11/06/22		1 To 35	36 To 62

  
Dept. Exam. Incharge

  
**HOD**  
Civil Engineering  
Sanjeevan Engineering & Technology Institute  
Somwar Peth, Panhala, Dist. Kolhapur. (416 201)

SSC   
AMM   
SMJ -   
EPS -   
JSC - 

Holy-wood Academy, Kolhapur's  
**SANJEEVAN ENGINEERING AND TECHNOLOGY INSTITUTE**  
 Sanjeevan Knowledge City, Somwar Peth- Injeon, Panhala, Tal. Panhala, Dist. Kolhapur Pin- 416 201 (MS.)  
 Phone : Dept.: 0231 - 2696613, PBX : 0231 - 2696600, Fax : 0231 - 2696629

• Approved By AICTE - New Delhi • Recognized by Govt. of Maharashtra & DTE • Affiliated to Shivaji University, Kolhapur






Website : www.seti.edu.in Email : principal@seti.edu.in / office@seti.edu.in **EN 6315**

**DEPARTMENT OF CIVIL ENGINEERING**

<b>MSE (S.Y.) TIME TABLE 2021-2022</b>			
<b>SUPERVISION CHART</b>			
<b>DATE</b>	<b>TIME</b>	<b>A107</b>	<b>A108</b>
<b>10/06/22</b>	10:00AM To 11:00AM	Prof. Shinde S.M.	Prof. Dhende A. N.
	12:00 noon To 1:00PM	Prof. Chavan S.S.	Prof. Gavade J.J.
	3:00PM To 4:00PM	Prof. Salokhe E.P.	Prof. Momin A.M.
<b>11/06/22</b>	10:00AM To 11:00AM	Prof. Shinde S.M.	Prof. Salokhe E.P.
	12:00 noon To 1:00PM	Prof. Chavan S.S.	Prof. Gavade J.J.
	3:00PM To 4:00PM	Prof. Dhende A. N.	Prof. Momin A.M.

  
 Dept. Exam. Incharge

  
**HOD**  
 Civil Engineering  
 Sanjeevan Engineering & Technology Institute  
 Somwar Peth, Panhala, Dist. Kolhapur. (416 201)

SSC   
 AMM   
 SMS   
 EPS   
 J) 5 

**DR. BABASAHEB AMBEDKAR TECHNOLOGICAL UNIVERSITY, LONERE**

**Mid Semester Examination – June 2022**

**Course: B. Tech in Second Year**

**Sem: IV**

**Subject Name: Environmental Engineering**

**Subject Code: BTCVC402**

**Max Marks: 20**

**Date:- 11/06/2022**

**Duration:- 1 Hr.**

**Instructions to the Students:**

1. Assume suitable data if required.
2. Figures to the right indicate full marks.
3. Only non programmable calculators are allowed.

		(Level/CO)	Marks										
<b>Q.1</b>	<b>Solve Multiple choice Questions</b>		<b>6</b>										
	1. Per capita demand of water is calculated in liters is ----- a) Per person per day b) Per person per month c) Per person per year d) Per person per decade	1											
	2. What is the unit for measuring pH? a) Unit less b) mg/l c) ppm d) ppb	1											
	3. Which is the more acidic solution from the followings? a) 1 b) 3 c) 7 d) 9	1											
	4. Which is the more alkaline solution from the followings? a) 13 b) 9 c) 7 d) 1	1											
	5. ----- is not an example of valve. a) Centrifugal b) Sluice c) Reflux d) Scour	1											
	6. ----- is one of the types of pump. a) Reciprocating b) Gate c) Scour d) Reflux	1											
<b>Q.2</b>	<b>Solve Any Two of the following.</b>		<b>3 X 2</b>										
(A)	Enlist different population forecasting methods and explain any two in detail.	1											
(B)	Enlist different chemical characteristics of water and explain any two in detail.	1											
(C)	Write a note on the following valves: a) gate b) air c) non-return.	1											
<b>Q.3</b>	<b>Solve Any One of the following.</b>		<b>8</b>										
(A)	<table border="1" style="width: 100%; border-collapse: collapse;"> <thead> <tr> <th>Year</th> <th>1961</th> <th>1971</th> <th>1981</th> <th>1991</th> </tr> </thead> <tbody> <tr> <td>Population</td> <td align="center">8000</td> <td align="center">12000</td> <td align="center">17000</td> <td align="center">22500</td> </tr> </tbody> </table> <p>Calculate the probable population in years 2001, 2011, and 2021 by using: a) Arithmetical increase method, and b) Geometrical increase method.</p>	Year	1961	1971	1981	1991	Population	8000	12000	17000	22500	2	
Year	1961	1971	1981	1991									
Population	8000	12000	17000	22500									
(B)	Data of parameters is as follows: 1) Discharge = 1.823m <sup>3</sup> /s; 2) Length = 6000 m; 3) Head loss = 15m. Based on the above information, calculate the size of rising main by using: a) Hazen-Williams formula [ $C_H = 130$ ], and b) Darcy-Weisbach formula [ $f = 0.012$ ].	2											
<b>*** End ***</b>													

**DR. BABASAHEB AMBEDKAR TECHNOLOGICAL UNIVERSITY, LONERE**

**Mid Semester Examination – June 2022**

**Course: B. Tech in Second Year**

**Sem: IV**

**Subject Name: Environmental Engineering**

**Subject Code: BTCVC402**

**Max Marks: 20**

**Date:- 11/06/2022**

**Duration:- 1 Hr.**

**Instructions to the Students:**

1. Assume suitable data if required.
2. Figures to the right indicate full marks.
3. Only non programmable calculators are allowed.

*Answer Key*

		Answer	Marks																						
<b>Q. 1</b>	<b>Solve Multiple choice Questions</b>		<b>6</b>																						
	1. Per capita demand of water is calculated in liters is ----- a) Per person per day b) Per person per month c) Per person per year d) Per person per decade	a																							
	2. What is the unit for measuring pH? a) Unit less b) mg/l c) ppm d) ppb	a																							
	3. Which is the more acidic solution from the followings? a) 1 b) 3 c) 7 d) 9	a																							
	4. Which is the more alkaline solution from the followings? a) 13 b) 9 c) 7 d) 1	a																							
	5. ----- is not an example of valve. a) Centrifugal b) Sluice c) Reflux d) Scour	a																							
	6. ----- is one of the types of pump. a) Reciprocating b) Gate c) Scour d) Reflux	a																							
<b>Q.2</b>	<b>Solve Any Two of the following.</b>		<b>3 X 2</b>																						
(A)	Enlist different population forecasting methods and explain any two in detail. Different methods -----1 mark Any two carries one mark each.																								
(B)	Enlist different chemical characteristics of water and explain any two in detail. Different parameters -----1 mark Any two carries one mark each.																								
(C)	Write a note on the following valves: a) gate b) air c) non-return. Explanation carries one mark each.																								
<b>Q. 3</b>	<b>Solve Any One of the following.</b>		<b>8</b>																						
(A)	<table border="1" style="width: 100%; border-collapse: collapse;"> <tr> <td style="width: 15%;">Year</td> <td style="width: 15%;">1961</td> <td style="width: 15%;">1971</td> <td style="width: 15%;">1981</td> <td style="width: 15%;">1991</td> </tr> <tr> <td>Population</td> <td>8000</td> <td>12000</td> <td>17000</td> <td>22500</td> </tr> </table> <p>Calculate the probable population in years 2001, 2011, and 2021 by using: a) Arithmetical increase method, and b) Geometrical increase method. Initial table of each method carries one mark each.</p> <table border="1" style="width: 100%; border-collapse: collapse;"> <tr> <td style="width: 40%;">Year</td> <td style="width: 15%;">2001</td> <td style="width: 15%;">2011</td> <td style="width: 15%;">2021</td> </tr> <tr> <td>Arithmetical increase method forecasted population</td> <td>27333 (1 mark)</td> <td>32166 (1 mark)</td> <td>36999 (1 mark)</td> </tr> <tr> <td>Geometrical increase method forecasted population</td> <td>31808 (1 mark)</td> <td>44967 (1 mark)</td> <td>63570 (1 mark)</td> </tr> </table>	Year	1961	1971	1981	1991	Population	8000	12000	17000	22500	Year	2001	2011	2021	Arithmetical increase method forecasted population	27333 (1 mark)	32166 (1 mark)	36999 (1 mark)	Geometrical increase method forecasted population	31808 (1 mark)	44967 (1 mark)	63570 (1 mark)		
Year	1961	1971	1981	1991																					
Population	8000	12000	17000	22500																					
Year	2001	2011	2021																						
Arithmetical increase method forecasted population	27333 (1 mark)	32166 (1 mark)	36999 (1 mark)																						
Geometrical increase method forecasted population	31808 (1 mark)	44967 (1 mark)	63570 (1 mark)																						
(B)	<p>Data of parameters is as follows: 1) Discharge = 1.823m<sup>3</sup>/s; 2) Length = 6000 m; 3) Head loss = 15m. Based on the above information, calculate the size of rising main by using: a) Hazen-Williams formula [<math>C_H = 130</math>], and b) Darcy-Weisbach formula [<math>f = 0.012</math>].</p> <p>a) Hazen-Williams formula (2 Marks) = (d) = 1.098 m = 1098mm (2 Marks) b) Darcy-Weisbach formula (2 marks) = (d) = 1.065 m = 1065mm (2 Marks).</p>																								





Holy-wood Academy, Kolhapur's  
**SANJEEVAN ENGINEERING AND TECHNOLOGY INSTITUTE**

Sanjeevan Knowledge City, Somwar Peth- Injole, Panhala, Tal. Panhala, Dist. Kolhapur Pin- 416 201 (MS.)  
Phone : Dept: 0231 - 2686613, PBX : 0231 - 2686600, Fax : 0231 - 2686629

Approved By AICTE - New Delhi ■ Recognized by Govt. of Maharashtra & DTE ■ Affiliated to Shivaji University, Kolhapur

Website : www.seti.edu.in Email : principal@seti.edu.in / officia@seti.edu.in

**EN 6315**

**DEPARTMENT OF CIVIL ENGINEERING**

## NOTICE

### MSE


### T.Y (SEM-VI)

Date -09/05/22

The MSE test for T.Y scheduled on 17<sup>th</sup> May to 18<sup>th</sup> May 2022. In regard all the staff here by informed that , they have to submit their MSE TEST question paper hard copy 2 set Exam co-ordinator on or **before 12<sup>th</sup> May 2022** till 4 pm, otherwise they have to make Xerox set with number of student & submit to Exam co-ordinator

  
Prof. A. C. Thoke

Exam co-ordinator

1 SMS - 

2 SSC - 

3 AND - 

4 JJG - 

AMM - 

  
Prof. J.S. Mevekari

HOD

Civil Engineering

H.O.D. Civil

Sanjeevan Engineering & Technology Institute  
Somwar Peth, Panhala, Dist. Kolhapur, (416 201)

Holy-wood Academy, Kolhapur's

**seti**  
SANJEEVAN ENGINEERING AND TECHNOLOGY INSTITUTE


Sanjeevan Knowledge City, Somwar Peth- Insale, Panhala, Tal. Panhala, Dist. Kolhapur Pin- 416 201 (MS.)  
Phone : Dept: 0231 - 2686613, PBX : 0231 - 2686600; Fax : 0231 - 2686629

Approved By AICTE - New Delhi ■ Recognized by Govt. of Maharashtra & DTE ■ Affiliated to Shivaji University, Kolhapur

Website : [www.seti.edu.in](http://www.seti.edu.in) Email : [principal@seti.edu.in](mailto:principal@seti.edu.in) / [office@seti.edu.in](mailto:office@seti.edu.in) **EN 6315**

DEPARTMENT OF CIVIL ENGINEERING

MSE (T.Y.) TIME TABLE 2021-2022		
DATE	TIME	T.Y.
17/05/22	10:00AM To 11:00AM	DCS-I
	12:00 noon To 1:00PM	FE
	3:00PM To 4:00PM	PM
18/05/22	10:00AM To 11:00AM	WWT
	12:00 noon To 1:00PM	CT
	3:00PM To 4:00PM	BPD

  
Dept. Exam. Incharge

  
**HOD**  
Civil Engineering  
Sanjeevan Engineering & Technology Institute  
Somwar Peth, Panhala, Dist. Kolhapur, (416 201)

Holy-wood Academy, Kolhapur's

**seti**  
Sanjeevan Engineering & Technology Institute

**SANJEEVAN ENGINEERING AND TECHNOLOGY INSTITUTE**  
 Sanjeevan Knowledge City, Somwar Peth, Injore, Panhala, Tal. Panhala, Dist. Kolhapur Pin-416 201 (MS.)  
 Phone : Dept. 0231 - 2889013 PBX : 0231 - 2889000 Fax : 0231 - 2889029

Approved By AICTE - New Delhi ■ Recognized by Govt. of Maharashtra & DTE ■ Affiliated to Shivaji University, Kolhapur

Website : [www.seti.edu.in](http://www.seti.edu.in) Email : [principal@seti.edu.in](mailto:principal@seti.edu.in) / [office@seti.edu.in](mailto:office@seti.edu.in) **EN 6315**

**DEPARTMENT OF CIVIL ENGINEERING**

<b>MSE(T.Y.) TIME TABLE 2021-2022</b>			
<b>SEATING ARRANGEMENT</b>			
<b>DATE</b>	<b>CLASS</b>	<b>A107</b>	<b>A108</b>
17/05/22	T.Y.	1 To 35	36 To 62
18/05/22		1 To 35	36 To 62

  
 Dept. Exam. Incharge

  
**HOD**  
 Civil Engineering  
 Sanjeevan Engineering & Technology Institute  
 Somwar Peth, Panhala, Dist. Kolhapur. (416 201)



Holy-wood Academy, Kolhapur's  
**SANJEEVAN ENGINEERING AND TECHNOLOGY INSTITUTE**

Sanjeevan Knowledge City, Somwar Peth- Injole, Panhala, Tal. Panhala, Dist. Kolhapur Pin- 416 201 (MS.)

Phone : Dept : 0231 - 2686613, PBX : 0231 - 2686600, Fax : 0231 - 2686629

Approved By AICTE - New Delhi Recognized by Govt. of Maharashtra & DTE Affiliated to Shivaji University, Kolhapur

Website : www.seti.edu.in Email : principal@seti.edu.in / office@seti.edu.in

**EN 6315**

**DEPARTMENT OF CIVIL ENGINEERING**


**MSE (T.Y.) TIME TABLE 2021-2022**  
**SUPERVISION CHART**

DATE	TIME	A107	A108
17/05/22	10:00AM To 11:00AM	Prof. Shinde S.M.	Prof. Dhende A. N.
	12:00 noon To 1:00PM	Prof. Chavan S.S.	Prof. Gavade J.J.
	3:00PM To 4:00PM	Prof. Salokhe E.P.	Prof. Dhende A. N.
18/05/22	10:00AM To 11:00AM	Prof. Shinde S.M.	Prof. Salokhe E.P.
	12:00 noon To 1:00PM	Prof. Chavan S.S.	Prof. Gavade J.J.
	3:00PM To 4:00PM	Prof. Dhende A. N.	Prof. Chavan S.S.

  
Dept. Exam. Incharge

  
HOD  
Civil Engineering

Sanjeevan Engineering & Technology Institute  
Somwar Peth, Panhala, Dist. Kolhapur. (416 201)

EPS - 

AND - 

SSC - 

AMM - 

JMI - 

JH - 

**DR. BABASAHEB AMBEDKAR TECHNOLOGICAL UNIVERSITY, LONERE**

**Mid Semester Examination –2022**

**Course: B. Tech in Third Year**

**Sem: VI**

**Subject Name: Design of Concrete Structures-I**

**Subject Code: BTCVC601**

**Max Marks: 20**

**Date:-17/05/2022**

**Duration:- 1 Hr.**

**Instructions to the Students:**

1. Assume suitable data if required.
2. Figures to the right indicate full marks.
3. Only non programmable calculators are allowed.

		(Level/CO)	Marks
<b>Q. 1</b>	<b>Solve Multiple choice Questions</b>		<b>6</b>
	1. The stress strain curve for concrete is considered parabolic by I.S. code upto a strain of? a) 0.0015 b) 0.0020 c) 0.0030 d) 0.0035	<b>1</b>	
	2. What is the modular ratio to be used in the analysis of RC beams using working stress method if the grade of concrete is M20 a) 18.6 b) 13.3 c) 9.9 d) 6.5	<b>1</b>	
	3. The working stress method of design specifies the value of modular ratio, $m=280/(3\sigma_{cbc})$ , where $\sigma_{cbc}$ is the allowable stress in bending compression in concrete. To what extent does the above value of 'm' make any allowance for the creep of concrete? a) No compensation b) Full compensation c) Partial compensation d) The two are unrelated	<b>1</b>	
	4. The partial factor of safety for concrete as per IS 456:2000 is a) 1.5 b) 1.15 c) 0.87 d) 0.446	<b>1</b>	
	5. Maximum strains in an extreme fiber in concrete and in the tension reinforcement (Fe-415 and $E_s=200\text{KN/mm}^2$ ) in a balanced section at limit state of flexure are resp. a) 0.0035 and 0.0038 b) 0.002 and 0.0018 c) 0.0035 and 0.0041 d) 0.002 and 0.0031	<b>1</b>	
	6. In the limit state design method of concrete structures, the recommended partial material safety factor ( $\gamma_m$ ) for steel according to IS 456:2000 is a) 1.5 b) 1.15 c) 1.00 d) 0.87	<b>1</b>	
<b>Q. 2</b>	<b>Solve Any Two of the following.</b>		<b>3 X 2</b>
(A)	Explain Modes of failure.	<b>1</b>	
(B)	Explain design constant for balanced section.	<b>1</b>	
(C)	The C/S of singly reinforced concrete beam is 300mm wide & 400mm deep to centre of reinforcement which consists of 4 bars of 16 mm dia. If the stresses in concrete and steel are not to exceed $5\text{ N/mm}^2$ and $140\text{ N/mm}^2$ . Determine M.R. of the section. Take $m=18$	<b>3</b>	
<b>Q. 3</b>	<b>Solve Any One of the following.</b>		<b>8</b>
(A)	A doubly reinforced rectangular beam of width 360mm and effective depth 750 mm has to resist an external BM of 300 KN.M. find the amount of tensile and compression steel required. Take effective cover to compression steel is 50 mm. If $\sigma_{cbc}=7\text{ N/mm}^2$ , $\sigma_{st}=190\text{ N/mm}^2$ , $m=13.33$	<b>3</b>	
(B)	Design a cantilever chajja with the following data. Span=1 m (from face of walls), width=1.5 m, live load= $0.75\text{ KN/M}^2$ , finish= $0.5\text{ KN/M}^2$ support lintel=230X230 mm. Take M15 & Fe415.	<b>2</b>	
<b>*** End ***</b>			

T.Y. Betch

Mid semester Exam - 2022

DCS-I

SEM-VI

Date - 17/5/22

Answer Key

- Q.1
- ① b
  - ② b
  - ③ c
  - ④ a
  - ⑤ a
  - ⑥ b

6M

Q.2. (A) Explain modes of failure

Types of failure

Diagram with definition

— (1M)  
— (2M)

(B) Explain design constant.

~~(a)  $NA = \frac{m G_c b c}{G_s l} = \frac{x}{d-x}$~~

~~(b)  $K_L R = \frac{b x^2}{2} = m A_s l (d-x)$~~

(a)  $K_c =$  coefficient or const. of NA.

$$K_c = \frac{m G_c b c}{m G_c b c + G_s l}$$

→ (1M)

(b)  $J =$  coefficient or const. of lever arm

$$J = 1 - K/3$$

→ (1M)

(c) coefficient or const. of moment of resistance  
R or Q.

$$R = \frac{1}{2} K J G_c b c$$

→ (1M)

(c) cal. of actual position of N.A (x)  
 $x = 154.06 \text{ mm}$  ( $x^2 + 96.51x - 38604 = 0$ )  $\rightarrow 1 \text{ m}$

$x_c = K_c \cdot d$  — 1 m

$K_c = 0.39$ ,  $x_c = 156 \text{ mm}$

under r/f sec<sup>n</sup>

$M_R = 39.25 \text{ kNm}$   $\rightarrow 1 \text{ m}$

Q.3 (A) ① calculate  $M_{R_{bal}}$ .

$M_{R_{bal}} = R b d^2$

$K = 0.33$ ,  $j = 0.89$ ,

$R = 1.03$ .

$M_{R_{bal}} = 208.57 \text{ kNm}$   $\rightarrow$  (2m)

② cal.  $A_{st}$ .

$A_{st1} = 1644.55 \text{ mm}^2$

$A_{st2} = 687.4 \text{ mm}^2$

$A_{st} = \text{~~687.4 mm}^2~~ 2331.95 \text{ mm}^2$   $\rightarrow$  (2m)

25 mm  $\phi$  - 5 No.

③ Asc cal.

$A_{sc} = 1227.30 \text{ mm}^2$

16 mm  $\phi$  - 6 No or  $\rightarrow$  (2m)

20 mm  $\phi$  - 4 No.  $\rightarrow$  (2m)

④ diagram  $\rightarrow$  (2m)

(B) loading & BM.

①  $D = 105 \text{ mm}$   $\rightarrow$  ①

② loading  $w = 5.8125 \text{ kN}$   $\rightarrow$  ①

③  $M = 3.224 \text{ kNm}$   $\rightarrow$  ②

④ D check. ( $0.65 b d^2 = M$ )  $\rightarrow$  ②

⑤ <sup>steel cal.</sup>  $A_{st} = 197.15 \text{ mm}^2$  spacing cal.  $\rightarrow$  ①

12 mm  $\phi$  bars @ 235 mm c/c

⑥ distribution steel cal. & spacing = 120 mm  $\rightarrow$  ①

6 mm  $\phi$  bars @ 235 mm c/c ⑦ Draw diagram  $\rightarrow$  ②



Holy-wood Academy, Kolhapur's  
**SANJEEVAN ENGINEERING AND TECHNOLOGY INSTITUTE**

Sanjeevan Knowledge City, Somwar Peth- Injole, Panhala, Tal. Panhala, Dist. Kolhapur Pin- 416 201 (MS.)  
Phone : Dept. 0231 - 2686613, PBX : 0231 - 2686600, Fax : 0231 - 2686629

Approved By AICTE - New Delhi ■ Recognized by Govt. of Maharashtra & DTE ■ Affiliated to Shivaji University, Kolhapur

Website : www.seti.edu.in Email : principal@seti.edu.in / office@seti.edu.in

**EN 6315**

**DEPARTMENT OF CIVIL ENGINEERING**


## NOTICE

### MSE

#### Final Year B.Tech. (SEM-VIII)

Date -09/05/22

The MSE test for ~~S. No.~~ scheduled on 13<sup>th</sup> May 2022. In regard all the staff here by informed that , they have to submit their MSE TEST question paper hard copy 2 set Exam co-ordinator on or **before 11<sup>th</sup> May 2022** till 4 pm, otherwise they have to make Xerox set with number of student & submit to Exam co-ordinator

  
Prof. A. C. Thoke

Exam co-ordinator

1 EPS 

  
Prof. J.S. Mevekari

HOD

Civil Engineering

H.O.D. CIVIL

Sanjeevan Engineering & Technology Institute  
Somwar Peth, Panhala, Dist. Kolhapur, (416 201)



Holy-wood Academy, Kolhapur's

**seti**  
SANJEEVAN ENGINEERING & TECHNOLOGY INSTITUTE

Sanjeevan Knowledge City, Somwar Peth- Injole, Panhala, Tal. Panhala, Dist. Kolhapur Pin- 416 201 (MS.)  
Phone: Dept: 0231 - 2686613, PBX: 0231 - 2686602 Fax: 0231 - 2686629

Approved By AICTE - New Delhi ■ Recognized by Govt. of Maharashtra & DTE ■ Affiliated to Shivaji University, Kolhapur

Website : www.seti.edu.in Email : principal@seti.edu.in / office@seti.edu.in **EN 6315**

**DEPARTMENT OF CIVIL ENGINEERING**

MSE TIME TABLE 2021-2022		
DATE	TIME	B.TECH.
13/05/22	10:00AM To 11:00AM	MROCS
	12:00 noon To 1:00PM	RSE

  
Dept. Exam. Incharge

  
HOD  
Civil Engineering  
Sanjeevan Engineering & Technology Institute  
Somwar Peth, Panhala, Dist. Kolhapur. (416 201)

EPS - 

Holy-wood Academy, Kolhapur's

**seti**  
SANJEEVAN ENGINEERING & TECHNOLOGY INSTITUTE

Sanjeevan Knowledge City, Somwar Peth- Injale, Panhala, Tal. Panhala, Dist. Kolhapur Pin-416 201 (MS.)  
Phone: Dept. 0231 - 2686613, PBX: 0231 - 2686600 Fax: 0231 - 2686629

■ Approved By AICTE - New Delhi ■ Recognized by Govt. of Maharashtra & DTE ■ Affiliated to Shivaji University, Kolhapur

Website : [www.seti.edu.in](http://www.seti.edu.in) Email : [principal@seti.edu.in](mailto:principal@seti.edu.in) / [office@seti.edu.in](mailto:office@seti.edu.in) **EN 6315**

**DEPARTMENT OF CIVIL ENGINEERING**

<b>MSE (B.Tech.) TIME TABLE 2021-2022</b>			
<b>SEATING ARRANGEMENT</b>			
<b>DATE</b>	<b>CLASS</b>	<b>A106</b>	<b>A103(DH)</b>
13/05/2022	B.Tech.	1 To 35	36 To 73

  
Dept. Exam. Incharge

  
**HOD**  
**Civil Engineering**  
Sanjeevan Engineering & Technology Institute  
Somwar Peth, Panhala, Dist. Kolhapur. (416 201)



Holy-wood Academy, Kolhapur's

**SANJEEVAN ENGINEERING AND TECHNOLOGY INSTITUTE**

Sanjeevan Knowledge City, Somwar Peth- Injole, Panhala, Tal. Panhala, Dist. Kolhapur Pin- 416 201 (MS.)

Phone : Dept: 0231 - 2686613, PBX : 0231 - 2686600, Fax : 0231 - 2686629

Approved By AICTE - New Delhi ■ Recognized by Govt. of Maharashtra & DTE ■ Affiliated to Shivaji University, Kolhapur

Website : www.seti.edu.in Email : principal@seti.edu.in / office@seti.edu.in

**EN 6315**

**DEPARTMENT OF CIVIL ENGINEERING**

**MSE (B.Tech.) TIME TABLE 2021-2022**

**SUPERVISION CHART**

DATE	TIME	A106	A103(DH)
13/05/22	10:00AM To 11.00AM	Prof. Momin A.M.	Prof. Gavade J.J.
	12:00 noon To 1:00PM	Prof. Momin A.M.	Prof. Shinde S.M.

Dept. Exam. Incharge

HOD

Civil Engineering

Sanjeevan Engineering & Technology Institute  
Somwar Peth, Panhala, Dist. Kolhapur. (416 201)

EPS -

AMM -

SMJ -

DR. BABASAHEB AMBEDKAR TECHNOLOGICAL UNIVERSITY, LONERE

Mid Semester Examination – May 2022

Course: B. Tech in Civil Engineering

Sem: VIII

Subject Name: Remote Sensing Essentials

Subject Code: BTCESS802C

Max Marks:20

Date:- 13/05/2022

Duration:- 12 to 1.00 (1Hr)

**Instructions to the Students:**

1. Figures to the right indicate full marks.
2. Assume suitable data if necessary and state them clearly.
3. Illustrate answers with neat sketches wherever required.

(Level/CO) Marks

**Q.1 Attempt the following Questions.**

6

1. While passing through the atmosphere, the solar radiation.....  
A) Remains unaffected  
B) Do not get scattered  
C) Gets absorbed partially and remaining scattered  
D) None of the above
2. The basic requirement of any sensor system is.....  
A) Radiometric resolution  
B) Spatial resolution  
C) Spectral resolution  
D) All the above
3. A digital image is a numeric representation of a two dimensional.....  
A) Vector  
B) Matrix  
C) Text  
D) Alpha-numeric characters
4. How many total shades of gray or colours an 8 bits image will have?  
A) 64  
B) 128  
C) 256  
D) 512
5. If a pixel of an image is having 30m resolution, how much ground area it would represent?  
A) 30 sqm  
B) 60 sqm  
C) 90 sqm  
D) 900 sqm
6. Digital image processing is the use of ..... to perform image processing on digital images.  
A) Scanning sensors  
B) Printing devices  
C) Computer algorithms  
D) Mobile technology

**Q.2 Attempt any Two of the following.**

3X2

1. Discuss types of digital image processing softwares.
2. Write a note on interaction of solar radiation with atmosphere.
3. Differentiate between Passive sensors and Active sensors.

**Q.3 Attempt any One of the following.**

8X1

1. Explain various types of remote sensing platforms.
2. Write a detailed note on Unmanned Aerial Vehicle (UAV/Drone) stating its advantages and applications.

\*\*\* End \*\*\*





Holy-wood Academy, Kolhapur's

**SANJEEVAN ENGINEERING AND TECHNOLOGY INSTITUTE**

Sanjeevan Knowledge City, Somwar Peth- Injole, Panhala, Tal. Panhala, Dist. Kolhapur Pin- 416 201 (MS.)

Phone : Dept.: 0231 - 2686613, PBX : 0231 - 2686600, Fax : 0231 - 2686629

Approved By AICTE - New Delhi ■ Recognized by Govt. of Maharashtra & DTE ■ Affiliated to Shivaji University, Kolhapur

Website : [www.seti.edu.in](http://www.seti.edu.in) Email : [principal@seti.edu.in](mailto:principal@seti.edu.in) / [office@seti.edu.in](mailto:office@seti.edu.in)

**EN 6315**

**DEPARTMENT OF CIVIL ENGINEERING**

**NOTICE**

**Mid Term Test**

**S.Y. (SEM- III)**

Date -03/02/22

The **Mid Term Test** for all students is scheduled on **7<sup>th</sup> February 2022**. In this regard all the staff here by informed that, they have to prepare **Mid Term Test** question paper in the **Google form**

  
**HOD**  
**Civil Engineering**  
Sanjeevan Engineering & Technology Institute  
Somwar Peth, Panhala, Dist. Kolhapur. (416 201)

Holy-wood Academy, Kolhapur's



**SANJEEVAN ENGINEERING AND TECHNOLOGY INSTITUTE**

Sanjeevan Knowledge City, Somwar Peth- Injole, Panhala, Tal: Panhala, Dist. Kolhapur Pin- 416 201 (MS.)

Phone : Dept: 0231 - 2686613, PBX: 0231 - 2686600, Fax: 0231 - 2686629

Approved By AICTE - New Delhi ■ Recognized by Govt. of Maharashtra & DTE ■ Affiliated to Shivaji University, Kolhapur

Website : [www.seti.edu.in](http://www.seti.edu.in) Email : [principal@seti.edu.in](mailto:principal@seti.edu.in) / [office@seti.edu.in](mailto:office@seti.edu.in) **EN 6315**

**DEPARTMENT OF CIVIL ENGINEERING**

<b>MID TERM TEST TIME TABLE 2021-2022</b>		
<b>DATE</b>	<b>TIME</b>	<b>S.Y.</b>
<b>07/02/22</b>	9:30AM To 10.30AM	SUR-I
	10:30AM To 11:30AM	MOS
	11:45AM To 12:45PM	M-III
	12:45PM To 1:45PM	HY-I
	2:30PM To 3:30PM	BCD

  
Dept. Exam. Incharge

  
**HOD**  
Civil Engineering  
Sanjeevan Engineering & Technology Institute  
Somwar Peth, Panhala, Dist. Kolhapur. (416 201)



Holy-wood Academy, Kolhapur's  
**SANJEEVAN ENGINEERING AND TECHNOLOGY INSTITUTE**

Sanjeevan Knowledge City, Somwar Peth- Injole, Panhala, Tal. Panhala, Dist. Kolhapur Pin- 416 201 (MS.)  
Phone : Dept: 0231 - 2686613, PBX : 0231 - 2686600, Fax : 0231 - 2686629

Approved By AICTE - New Delhi ■ Recognized by Govt. of Maharashtra & DTE ■ Affiliated to Shivaji University, Kolhapur

Website : www.seti.edu.in Email : principal@seti.edu.in / office@seti.edu.in

**EN 6315**

**DEPARTMENT OF CIVIL ENGINEERING**

## NOTICE

### MID TERM TEST

(T.Y.&B.Tech.)

Date -13/12/21

The MID TERM test for T.Y. and B.Tech. is scheduled between 23<sup>rd</sup> to 24<sup>th</sup> December 2021. In this regard all the staff are here by informed that , they have to submit their MID TERM TEST question paper in prescribed format(hard copy 2 set) to Exam co-ordinator on or **before 20<sup>th</sup> December 2021** till 4 pm, otherwise they have to make Xerox set with number of student & submit to exam co-ordinator.

  
Prof. A. C. Thoke

Exam co-ordinator

  
Prof. J. S. Mevekari

H.O.D. Civil

1 EPS -  14/12/21

2 SSC - 

3 AND - 

4 AMM

5 PSS

6 JJG - 





Holy-wood Academy, Kolhapur's  
**SANJEEVAN ENGINEERING AND TECHNOLOGY INSTITUTE**

Sanjeevan Knowledge City, Somwar Peth- Injole, Panhala, Tal. Panhala, Dist. Kolhapur Pin- 416 201 (MS.)  
Phone : Dept.: 0231 - 2686613. PBX : 0231 - 2686600. Fax : 0231 - 2686629

Approved By AICTE - New Delhi ■ Recognized by Govt. of Maharashtra & DTE ■ Affiliated to Shivaji University, Kolhapur

Website : www.seti.edu.in Email : principal@seti.edu.in / office@seti.edu.in

**EN 6315**

**DEPARTMENT OF CIVIL ENGINEERING**

**MID TERM TIME TABLE 2021-2022**

DATE	TIME	T.E.	B.E.
23/10/21	10:00AM To 11:00AM	DSS	DCS-II
	12:00 Noon To 1:00PM	SM-II	PP
	3:00PM To 4:00PM	SM	IE
24/10/21	10:00AM To 11:00AM	EE-I	WRE
	12:00 Noon To 1:00PM	TRE	CT
	3:00PM To 4:00PM	MTE	EQ

Dept. Exam. Incharge

DJK - [Signature]  
AMM - [Signature]  
PSS - [Signature]  
EPS - [Signature] 14/12/21  
SSC - [Signature]  
AND - [Signature]

**HOD**  
Civil Engineering  
Sanjeevan Engineering & Technology Institute  
Somwar Peth, Panhala, Dist. Kolhapur, (416 201)



Holy-wood Academy, Kolhapur's  
**SANJEEVAN ENGINEERING AND TECHNOLOGY INSTITUTE**

Sanjeevan Knowledge City, Somwar Path- Injole, Panhala, Tal. Panhala, Dist. Kolhapur Pin- 416 201 (MS.)  
Phone : Dept: 0231 - 2686613, PBX : 0231 - 2686600, Fax : 0231 - 2686629

Approved By AICTE - New Delhi ■ Recognized by Govt. of Maharashtra & DTE ■ Affiliated to Shivaji University, Kolhapur

Website : www.seti.edu.in Email : principal@seti.edu.in / office@seti.edu.in

**EN 6315**

**DEPARTMENT OF CIVIL ENGINEERING**

**MID TERM TIME TABLE 2021-2022**

**SUPERVISION CHART**

DATE	TIME	A106	A107	A108	A103(DH)
23/10/21	10:00AM To 11:00AM	Prof. Dhende A. N.	Prof. Salokhe E.P.	Prof. Chavan S.S.	Prof. Gavade J.J.
23/10/21	12:00 Noon To 1:00PM	Prof. Salokhe E.P.	Prof. Momin A.M.	Prof. Chavan S.S.	Prof. Dhende A. N.
	3:00PM To 4:00PM	Prof. Momin A.M.	Prof. Chavan S.S.	Prof. Salokhe E.P.	Prof. Dhende A. N.
24/10/21	10:00AM To 11:00AM	Prof. Chavan S.S.	Prof. Dhende A. N.	Prof. Momin A.M.	Prof. Gavade J.J.
	12:00 Noon To 1:00PM	Prof. Dhende A. N.	Prof. Salokhe E.P.	Prof. Gavade J.J.	Prof. Momin A.M.
	3:00PM To 4:00PM	Prof. Gavade J.J.	Prof. Salokhe E.P.	Prof. Dhende A. N.	Prof. Chavan S.S.

Dept. Exam. Incharge

**HOD**  
Civil Engineering

Sanjeevan Engineering & Technology Institute  
Somwar Peth, Panhala, Dist. Kolhapur. (416 201)

JJL - ~~230~~  
AMM - ~~12~~  
EPS - ~~300~~ 10/12  
SSC - ~~Chavan~~  
AND - ~~Alkand~~



Holy-wood Academy, Kolhapur's

**SANJEEVAN ENGINEERING AND TECHNOLOGY INSTITUTE**

Sanjeevan Knowledge City, Somwar Petih- Injole, Panhala, Tal. Panhala, Dist. Kolhapur Pin- 416 201 (MS.)

Phone : Dept.: 0231 - 2686613, PBX : 0231 - 2686600, Fax : 0231 - 2686629

Approved By AICTE - New Delhi ■ Recognized by Govt. of Maharashtra & DTE ■ Affiliated to Shivaji University, Kolhapur

Website : [www.seti.edu.in](http://www.seti.edu.in) Email : [principal@seti.edu.in](mailto:principal@seti.edu.in) / [office@seti.edu.in](mailto:office@seti.edu.in)


**EN 6315**

**DEPARTMENT OF CIVIL ENGINEERING**

**MID TERM TIME TABLE 2021-2022**


**SEATING ARRANGEMENT**

DATE	CLASS	A106	A107	A108	A103(DH)
23/10/21	T.Y.	1 To 35	36 To 62	-	-
	B.Tech.	-	-	1 To 35	36 To 73
24/10/21	T.Y.	1 To 35	36 To 62	-	-
	B.Tech.	-	-	1 To 35	36 To 73


  
Dept Exam. Incharge

  
**HOD**  
Civil Engineering  
Sanjeevan Engineering & Technology Institute  
Somwar Petih, Panhala, Dist. Kolhapur. (416 201)



DR. BABASAHEB AMBEDKAR TECHNOLOGICAL UNIVERSITY, LONERE		
Mid Semester Examination – Dec. 2021		
Course: B. Tech in Final Year	Sem: VII	
Subject Name: Design of Concrete Structures – II	Subject Code: BTCVC701	
Max Marks: 20	Date:-23 /12/2021	Duration:- 1 Hr.
<b>Instructions to the Students:</b> 1. Assume suitable data if required. 2. Figures to the right indicate full marks. 3. Only non programmable calculators are allowed.		
	(Level/CO)	Marks
<b>Q. 1 Solve Multiple choice Questions</b>		<b>6</b>
1. Equivalent shear $V_e$ is given by? a) $V_u + 1.6 (T_u / b)$ b) $V_u + 1.7 (T_u / b)$ c) $V_u + [1 + (D / b)] / 1.7$ d) None	1	
2. When $T_u = 50 \text{ KN-m}$ , $V_u = 40 \text{ KN}$ and $b = 300 \text{ mm}$ than $V_e = \underline{\hspace{1cm}}$ KN a) 306.66 b) 406.66 c) 206.66 d) none of these	1	
3. The beams are having torsional moment, the side face reinforcement shall be provided for the overall depth exceeding .... mm. a) 450 mm b) 750 mm c) 300 mm d) none of these	1	
4. In limit-state of design of prestressed concrete, which of the following strain distribution is assumed a) Linear b) Bilinear c) Parabolic d) none of these	1	
5. Which of the following systems are used as anchorage for post-tensioning a) Freyssinet system b) Magnel Blaton system c) Gifford-Udall system d) All of the above	1	
6. High strength concrete is used for pre-stressed concrete because of a) Low creep b) Lesser prestress loss c) High tensile strength d) Low brittleness	1	
<b>Q.2 Solve Any Two of the following.</b>		<b>3 X 2</b>
(A) Explain the behavior of RCC beam under pure torsion.	1	
(B) Explain the various post-tensioning system based on wedge action with sketches.	2	
(C) Analysis of area of circular column to carry a load of 400KN. The column is provided with circular lateral ties. Use M20 & Fe 250.	3	
<b>Q. 3 Solve Any One of the following.</b>		<b>8</b>
(A) Rectangular pr-stress concrete beam 200X400mm is having a simply supported span of 10m. It carried a udl of 10KN/M through the beam and it is pre-stressed with 300KN at an eccentricity of 100mm at the centre. Find the extreme fiber stress at the centre of beam.	1	
(B) Calculate max. fiber stress for beam shown below using load balancing concept . 	2	

**2.5.1 CA1,CA2,MSE sample question paper, result analysis, marks sheet (filled DBATU portal), sample answer sheet/ summary of online examination, snap of students portal showing internal marks**



**DR. BABASAHEB AMBEDKAR TECHNICAL UNIVERSITY, LONERE.**  
Sanjivani Engineering & Technology Institute, Panhala  
Department of Computer Science & Engineering  
CA-1 (October 2021-2022)

CLASS: Final Year B.Tech SEM: V ACADEMIC YEAR: 2021-22  
NAME OF STUDENT :  
ROLL No. PRN No.  
MARKS OBTAINED: MARKS: 10  
DATE : 20/10/2021 Time : 10.30 am to 11am  
SUBJECT : Database Systems

**INSTRUCTIONS:**  
1) All questions are compulsory.  
2) Each question carries 1 mark.  
3) Write the correct option in the box given at the end of each question  
4) Multiple choices are not allowed

Q.No	Questions	Correct Option
1	Any fact that can be recorded is known as ..... a) Knowledge b) Information c) Data d) All of the above	
2	Database Systems are made-up of .....data structures. a) Simple b) Complex c) Derived d) None	
3	Logical level of abstraction describes what data is stored in database and what relationships exist among those data. a) True b) False	
4	Overall design of a database is called the..... a) Abstraction b) Instance c) Schema	

5	The data stored in database at a particular moment of time is called as .....of database. a) Abstraction b) Instance c) Schema	
6	DML stands for ..... a) Data Management Languages b) Database Markup Language c) Data Manipulation Language d) None of these	
7	.....is a set of entities of same type that share the same properties or attributes. a) Attributes set b) Relationship set c) Entity Set d) Property Set	
8	Consider an employee entity set with attribute phone -number, attribute phone - number is a..... a) Simple Attribute b) Composite Attribute c) Single Valued Attributes d) Multi-valued Attributes	
9	A Relationship sets that involve two entity sets is known as..... a) Unary Relationship Set b) Binary Relationship Set c) Ternary Relationship Set d) N-ary Relationship set	
10	Which of the following symbols represent relationship sets in ER diagram. a) Lines b) Diamonds c) Divided rectangles d) Undivided rectangles	

**DR. BABASAHEB AMBEDKAR TECHNOLOGICAL UNIVERSITY, LONERE**  
Mid Term Exam - 2021

Course: B. Tech in Computer Science & Engineering  
Subject Name: Database Systems  
BTCOC501  
Max Marks: 20  
Date: 20/12/21

Sem: V  
Subject Code:  
Duration:- 1.0 Hr.


**Instructions to the Students:**  
1. All Questions are compulsory.  
2. Solve any one from Q.2. Solve any one from Q.3 & Solve any one from Q.4

**Q.1. Solve the multiple-choice questions. 6M**

- I. The data stored in database at a particular moment of time is called instance of database.  
(a) True (b) False
- II. Which is lowest level of abstraction.  
(a) View Level (b) Logical Level (c) Physical Level (d) None of these
- III. ....describes only part of entire database.  
a) Internal Level b) Conceptual Level (c) External Level
- IV. The total number of attributes in the relation is called as.....  
(a) Cardinality (b) Degree (c) Tuple variable (d) schema
- V. ....is a table with columns and rows.  
(a) Domain (b) Tuple (c) Relation (d) domain
- VI. Command that comes under DML is.....  
(a) ROLLBACK (b) GRANT (c) SELECT (d) All of the above

**Q.2 Solve Any one of the following.**

<p><b>A. Consider following database</b> Student(s: name, s_no, class, major ) Course(c: name, c_no, credit, hours, department) Write SQL statements to do the following update on the database schema</p> <ol style="list-style-type: none"> <li>a) Insert a new student ('Johnson', '251', 'math')</li> <li>b) Change the credit_hours of course 'Data Science' to 4.</li> <li>c) Delete the record for the student whose name is 'smith' and whose student no is 17.</li> </ol>	6	CO3
<b>B. Construct ER- Diagram for Banking Enterprise.</b>		CO1
<b>C. Explain Basic Fundamental Relational Algebra Operations.</b>		CO2
<b>Q.3 Solve Any one of the following</b>		
<b>A. Explain Different Relational Model Concepts.</b>		CO2

<p><b>B. Consider following Student Relation</b></p> <table border="1" style="width: 100%; border-collapse: collapse; text-align: center;"> <thead> <tr> <th>ID</th> <th>NAME</th> <th>CLASS</th> <th>MARK</th> <th>GENDER</th> </tr> </thead> <tbody> <tr><td>1</td><td>John Doe</td><td>Four</td><td>75</td><td>Female</td></tr> <tr><td>2</td><td>Mia Ruth</td><td>Three</td><td>85</td><td>male</td></tr> <tr><td>3</td><td>Arnold</td><td>Three</td><td>90</td><td>male</td></tr> <tr><td>4</td><td>Kristi Bell</td><td>Four</td><td>80</td><td>Female</td></tr> <tr><td>5</td><td>Jane Miller</td><td>Four</td><td>60</td><td>Female</td></tr> <tr><td>6</td><td>Alan John</td><td>Four</td><td>50</td><td>Male</td></tr> <tr><td>7</td><td>My John Bell</td><td>Five</td><td>70</td><td>male</td></tr> <tr><td>8</td><td>Arnold</td><td>Five</td><td>85</td><td>male</td></tr> <tr><td>9</td><td>Ten Gray</td><td>Six</td><td>70</td><td>male</td></tr> <tr><td>10</td><td>Dig John</td><td>Four</td><td>55</td><td>Female</td></tr> </tbody> </table> <p>a) Identify degree of Student relation. b) Identify Cardinality of Student relation. c) Identify Domain of ID attribute. d) Identify Tuples of Student relation e) Write Relational Schema for Student Relation</p> <p><b>Q.4 Solve Any one of the following.</b></p> <p><b>A. Find the minimum number of tables required to represent the given ER diagram in relational model.</b></p> 	ID	NAME	CLASS	MARK	GENDER	1	John Doe	Four	75	Female	2	Mia Ruth	Three	85	male	3	Arnold	Three	90	male	4	Kristi Bell	Four	80	Female	5	Jane Miller	Four	60	Female	6	Alan John	Four	50	Male	7	My John Bell	Five	70	male	8	Arnold	Five	85	male	9	Ten Gray	Six	70	male	10	Dig John	Four	55	Female	4	CO2
ID	NAME	CLASS	MARK	GENDER																																																					
1	John Doe	Four	75	Female																																																					
2	Mia Ruth	Three	85	male																																																					
3	Arnold	Three	90	male																																																					
4	Kristi Bell	Four	80	Female																																																					
5	Jane Miller	Four	60	Female																																																					
6	Alan John	Four	50	Male																																																					
7	My John Bell	Five	70	male																																																					
8	Arnold	Five	85	male																																																					
9	Ten Gray	Six	70	male																																																					
10	Dig John	Four	55	Female																																																					
<b>B. Explain Two Tier and Three Tier architectures. Which is better suited for web applications? Why?</b>		CO1																																																							

-----All the Best-----

**DR. BABASAHEB AMBEDKAR TECHNICAL UNIVERSITY, LONERE.**  
 Sanjeevan Engineering & Technology Institute, Panhala  
 Department of Computer Science & Engineering  
 CA-II (February, 2021-2022)

CLASS: 5 Y SEM: -III ACADEMIC YEAR : 2021-22

NAME OF STUDENT: \_\_\_\_\_  
 ROLL No. \_\_\_\_\_ PRN No. \_\_\_\_\_  
 MARKS OBTAINED: \_\_\_\_\_ MARKS: 10  
 DATE : 9-12-2022  
 SUBJECT: CAO

Supervisor Sign

**INSTRUCTIONS:-**

- 1) All questions are compulsory.
- 2) Each question carries 1 mark.
- 3) Write the correct option in the box given at the end of each question.
- 4) Multiple choices are not allowed.

Q.No	Questions	Correct Option
1	Which of the following memories must be refreshed many times per second? a. Static RAM b. Dynamic RAM c. EPROM d. ROM	
2	Digital devices are a. Digital Clock b. Automobile speed meter c. Clock with a dial and two hands d. All of them	
3	The time taken to transfer a word of data to or from the memory is called as... a. Access time b. Cycle time c. Memory latency d. None of the above	
4	In SDRAM's _____ are used to store data that is read or written. a. Buffers b. Registers c. Overlays d. None of the above.	
5	_____ Coordinates the input and output devices of a computer system. a. Processor b. ALU c. Control Unit d. None of the these	
6	The _____ bus set of lines that carry information about where in memory data is to be transferred to or from a. data b. address c. control d. all of these	
7	_____ cycle occurs at beginning of each instruction cycle a. Fetch b. Fetch c. Interrupt d. Halting	

8	.....method is used to established priority by serially connecting all devices that request an interrupt. a. Vectored –interrupting b. Daisy chain c. Priority d. Polling	
9	The method which offers higher speeds of I/O transfers is a. Interrupts b. Memory mapping c. Programmed –controlled I/O d. DMA	
10	Reading data is performed in magnetic disk by a. Read / write heads b. Sectors c. Track d. Lower Surface	

**Dr. Babasaheb Ambedkar Technological University**



Title: Student Marks  
 Exam Session: Winter Semester Examination 2021  
 Institute: SIT-1 (Sanjeevan Engineering and Technology Institute, Panhala)  
 Course: IT221-2017 B.Tech Computer Science and Engineering  
 Subject: EE220003-2021 Machine Learning  
 Examined On: 20220510 14:52:31

Sl. No.	Enrollment No.	Full Name	Continuous Assessment 2 Marks / 10		Continuous Assessment 1 Marks / 5		Mid Exam Marks / 20	End Exam Marks / 50
			Tempor. Marks	Locke	Tempor. Marks	Locke		
1	1803124209	SAVANT OMKAR SUDHAKAR	8	9	9	14		
2	1803124202	SHETI NAVDRA AMH	8	9	9	17		
3	1803124201	KUMHAR NIKITA TANUJ	7	9	9	12		
4	1803124202	SHIVAJI SAJJAY NANGAR	9	9	9	19		
5	1803124203	PATEL HETIVIVA MANJIT	8	9	9	18		
6	1803124204	MAU SIBHA NANDKUMAR	8	9	9	20		
7	1803124205	MARWADI OMKAR BALASO	8	9	9	16		
8	1803124205	KHADANE RUTUJA SURB	8	9	9	20		
9	1803124207	CHAVANANIKET MANJIT	7	9	9	8		
10	1803124208	SALU PRADHAN MANJISHOR	8	7	7	17		
11	1803124209	DEVADKAR SOURABH SHADHRANT	8	9	9	19		
12	1803124202	SHINDI PRATH VEDYADHAR	10	9	9	19		
13	1803124201	SHETKAR SURBANGI SURESH	9	10	10	20		

Sl. No.	Enrollment No.	Full Name	Continuous Assessment 2 Marks / 10		Continuous Assessment 1 Marks / 5		Mid Exam Marks / 20	End Exam Marks / 50
			Tempor. Marks	Locke	Tempor. Marks	Locke		
14	1803124202	THOROLE OMKAR SANGAT	8	9	9	15		
15	1803124201	PATEL GAURAV SHARPH	8	7	7	8		
16	1803124204	LAG PRADHANT SHARPH	7	8	8	16		
17	1803124205	BARWADKAR SATISH MANJIT	8	8	8	7		
18	1803124209	PATEL PRATIK SANTOSH	9	9	9	10		
19	1803124205	RAJWANE SHIVAM SANTOSH	10	9	9	17		
20	1803124205	RUTUJA RAJESO CHOKOLE	10	8	8	19		
21	1803124205	KOPRU PRADHAN KANAKSHODA	9	9	9	15		
22	1803124201	VILKAR SONAL SHAMSO	10	9	9	20		
23	1803124202	PRADHAN SHUBHAM ANANDA	9	9	9	10		
24	1803124203	PATEL RAJAJI ANANDRAO	7	8	8	14		
25	1803124204	NAIKAVADI KADIMPA MRAD	7	8	8	13		
26	1803124205	MULLAN ALFIZA ADWERSHUBH	8	8	8	14		
27	1803124207	PATEL ADHWARYA SHUBHAM	8	9	9	18		
28	1803124205	VILKAR RAJAJI RAJESH	10	9	9	20		
29	1803124203	SHI AMRUTA RAJENDRA	8	9	9	10		
30	1803124204	ADWIN MUKUNJ JAVED	7	7	7	10		
31	2003124203	KARBLE SHWETA SHIKHA	7	9	9	10		
32	2003124204	PATEL RUTUJA VIKRAMRAO	7	9	9	10		
33	2003124205	RAJWANE SHUBHAM SHUBHAM	8	8	8	7		

# Dr. Babasaheb Ambedkar Technological University



Title

Student Marks

Exam Season

Summer Semester Examinations 2022

6315 / Sanjeevan Engineering and Technology Institute, Panhala

Course

11293 / 2017 / Bachelor of Technology (Electrical Engineering)

Subject

BTEEC402 / 2021 / Power System

Exported On

2022/08/19 12:43.25

Enrollment Number	Full Name	Continuous Assessment 2 Marks / 10		Continuous Assessment 1 Marks / 10		Mid Exam Marks / 20
		Template	Upload	Template	Upload	Template Upload
T2063151293001	GOPAL PRAMOD PITHADEYA	5		3		12
T2063151293002	NAGESH HANAMANT JAGANNAWAR	5		5		10
T2063151293003	NEHA SANJAY MENSAGARE	10		9		18
T2063151293004	OMKAR ASHOK GAWADE	8		2		19
T2063151293005	RAVIRAJ NAMDEV GHEWARI	8		3		16
T2063151293006	SUSHANT DILIP PAWAR	6		5		12
T2163151293501	TAMBOLI NIHAL RAJU	1		9		13
T2163151293502	DIGEKAR PRAVIN BABAJI	6		8		13
T2163151293503	BOBADE RUTUJA RAMCHANDRA	4		6		13
T2163151293504	PATIL SAMMED SIDGONDA	10		8		20
T2163151293505	PATIL DIGVIJAY CHIMASAHEB	8		5		11
T2163151293506	PATIL SOURABH BHAGWAN	5		3		12
T2163151293507	KAMBLE PRATHAMESH DHONDIRAM	7		6		7
T2163151293508	NADIM MAJID DEVLEKAR	7		7		14
T2163151293509	CHOUGLE UBED YASIN	10		5		15
T2163151293510	PATIL SHARVARI DADASO	4		7		20



Enrollment Number	Full Name	Continuous Assessment 2 Marks / 10		Continuous Assessment 1 Marks / 10		Mid Exam Marks / 20
		<input type="button" value="Template"/>	<input type="button" value="Upload"/>	<input type="button" value="Template"/>	<input type="button" value="Upload"/>	<input type="button" value="Template"/> <input type="button" value="Upload"/>
T2163151293511	JADHAV SOURAV BABANRAO	10		8		16
T2163151293512	YELOORE PRAJKTA BANDU	2		7		14
T2163151293513	PATIL PRANAV MADAN	1		8		12
T2163151293514	PATIL VAIBHAVI SATISH	4		7		9
T2163151293515	JAMADAR NIHAL ISAK	2		7		11
T2163151293516	AGA FAIZAL AFTAB	5		7		8
T2163151293517	JADHAV PRATHMESH ANNASO	4		5		11
T2163151293518	DESAI YUVRAJ YASHAWANT	4		7		10
T2163151293519	BAVANE ANIL DASHARATH	4		6		12
T2163151293520	HAVAL VENKATESH VITTHAL	7		3		10
T2163151293522	DAKARE NIKHIL RAMESH	8		2		10
T2163151293523	MITHARI ABHIJEET PANDURANG	5		7		20
T2163151293524	PATIL PRASHANT DILIP	8		7		8
T2163151293525	JADHAV SONALI BABASO	8		10		18
T2163151293526	PATIL ANIKET YUVRAJ	2		2		18
T2163151293527	PUSALKAR SURABHI SANJAY	10		9		20
T2163151293528	KAMBLE SAMRUDDHI VILAS	8		8		19
T2163151293529	PALSHETKAR SANKET ANIL	4		4		12
T2163151293530	PATIL SARDAR APPASO	4		8		8
T2163151293531	LATWADEKAR AMIT BALASAHEB	5		5		10
T2163151293532	KADAM AARATI SARJERAO	6		4		13
T2163151293533	VARAPE URMILA HINDURAO	7		10		12
T2163151293534	DINDE PRANAVKUMAR TANAJI	10		4		18
T2163151293535	KURANE PRASHANT BABASO	3		7		10
T2163151293536	SHINDE SAMPADA BHASKAR	4		4		12
T2163151293537	BHUNDE PAYAL GOMA	7		5		11

Enrollment Number	Full Name	Continuous Assessment 2 Marks / 10		Continuous Assessment 1 Marks / 10		Mid Exam Marks / 20
		Template	Upload	Template	Upload	Template Upload
T2163151293539	JAGTAP PRUTHVIRAJ SANJAY	2		6		12
T2163151293540	BODKE HARSHIL BAPU	5		4		11
T2163151293541	PATIL ATHARV SHIVAJI	2		8		13
T2163151293542	KAMBLE ABHIJEET EKNATH	2		7		11
T2163151293543	MIRAJE SAKSHI MANOHAR	1		8		12
T2163151293545	PATIL SURAJ ASHOK	9		5		6
T2163151293546	NIVADE ROHIT MAHADEV	6		6		8
T2163151293547	JADHAV ROHIT MAHENDRA	3		10		7
T2163151293548	MANE RITESH ANIL	1		5		14
T2163151293549	GURAV SANDIP LALASO	7		7		13
T2163151293550	NARUTE OMKAR KRUSHANATH	10		6		20
T2163151293551	BHORE POOJA DEEPAK	2		6		16
T2163151293552	PRABHAVALKAR DEEPSHREE DEEPAK	6		10		17
T2163151293553	CHAND SONALI DASHARATH	5		9		16
T2163151293554	KAPURE SURAJ SHIVAJI	10		5		5
T2163151293555	PATIL VISHWAS DILIP	3		2		15
T2163151293556	WAREKAR AKASH SUNIL	6		4		10
T2163151293557	YEWALE YOGESH VITTHAL	9		4		7
T2163151293558	JAMBILKAR OMKAR DAGADU	2		7		11
T2163151293559	KAMBLE VAIBHAV VASANT	7		3		10
T2163151293560	PATIL SAIRAJ MARUTI	1		7		12
T2163151293561	POWAR ATUL VILAS	9		10		19
T2163151293562	KAMBLE PRANAV SUNIL	2		8		11
T2163151293563	SUTAR SURAJ NAMDEV	6		6		8
T2163151293565	SHINDE NEHA JAGANNATH	10		5		5
T2163151293566	BASARE ROHIT MARUTI	6		8		12

  
Subject Teacher

Haik Y.L.  
(Name and Signature)

  
HOD

(Name and Signature)

# Dr. Babasaheb Ambedkar Technological University



Title

Student Marks

Exam Season

Summer Semester Examinations 2022

6315 / Sanjeevan Engineering and Technology Institute, Panhala

Course

11293 / 2017 / Bachelor of Technology (Electrical Engineering)

Subject

BTEEL407 / 2021 / Power System Lab

Exported On

2022/08/19 12:49:54

Enrollment Number	Full Name	Continuous Assessment 2 Marks / 15	Continuous Assessment 1 Marks / 15	Practical Marks / 10	Internal Practical Marks / 10
		<input type="text" value="Template"/> <input type="text" value="Upload"/>	<input type="text" value="Template"/> <input type="text" value="Upload"/>	<input type="text" value="Template"/> <input type="text" value="Upload"/>	<input type="text" value="Template"/> <input type="text" value="Upload"/>
T2063151293001	GOPAL PRAMOD PITHADEYA	6	6	AB	AB
T2063151293002	NAGESH HANAMANT JAGANNAWAR	11	11	6	6
T2063151293003	NEHA SANJAY MENSAGARE	14	14	9	9
T2063151293004	OMKAR ASHOK GAWADE	13	12	8	8
T2063151293005	RAVIRAJ NAMDEV GHEWARI	13	12	8	8
T2063151293006	SUSHANT DILIP PAWAR	12	13	8	8
T2163151293501	TAMBOLI NIHAL RAJU	8	7	4	6
T2163151293502	DIGEKKAR PRAVIN BABAJI	9	9	5	6
T2163151293503	BOBADE RUTUJA RAMCHANDRA	9	8	6	6
T2163151293504	PATIL SAMMED SIDGONDA	15	14	10	10
T2163151293505	PATIL DIGVIJAY CHIMASAHEB	13	13	9	9
T2163151293506	PATIL SOURABH BHAGWAN	8	7	4	6


Enrollment Number	Full Name	Continuous Assessment 2 Marks / 15	Continuous Assessment 1 Marks / 15	Practical Marks / 10	Internal Practical Marks / 10
		Template Upload	Template Upload	Template Upload	Template Upload
T2163151293507	KAMBLE PRATHAMESH DHONDIRAM	8	7	4	6
T2163151293508	NADIM MAJID DEVLEKAR	13	12	8	8
T2163151293509	CHOUGLE UBED YASIN	12	12	8	8
T2163151293510	PATIL SHARVARI DADASO	13	13	10	10
T2163151293511	JADHAV SOURAV BABANRAO	14	13	9	9
T2163151293512	YELOORE PRAJKTA BANDU	13	12	6	6
T2163151293513	PATIL PRANAV MADAN	7	7	4	6
T2163151293514	PATIL VAIBHAVI SATISH	13	12	8	8
T2163151293515	JAMADAR NIHAL ISAK	7	6	4	6
T2163151293516	AGA FAIZAL AFTAB	8	7	4	6
T2163151293517	JADHAV PRATHMESH ANNASO	6	6	AB	AB
T2163151293518	DESAI YUVRAJ YASHAWANT	8	7	4	6
T2163151293519	BAVANE ANIL DASHARATH	8	7	4	6
T2163151293520	HAVAL VENKATESH VITTHAL	8	7	4	6
T2163151293522	DAKARE NIKHIL RAMESH	8	7	4	6
T2163151293523	MITHARI ABHIJEET PANDURANG	15	15	10	10
T2163151293524	PATIL PRASHANT DILIP	13	12	7	9
T2163151293525	JADHAV SONALI BABASO	14	13	9	9
T2163151293526	PATIL ANIKET YUVRAJ	14	13	7	7
T2163151293527	PUSALKAR SURABHI SANJAY	15	15	10	10
T2163151293528	KAMBLE SAMRUDDHI VILAS	15	14	10	10

Enrollment Number	Full Name	Continuous Assessment 2 Marks / 15	Continuous Assessment 1 Marks / 15	Practical Marks / 10	Internal Practical Marks / 10
		<input type="button" value="Template"/> <input type="button" value="Upload"/>	<input type="button" value="Template"/> <input type="button" value="Upload"/>	<input type="button" value="Template"/> <input type="button" value="Upload"/>	<input type="button" value="Template"/> <input type="button" value="Upload"/>
T2163151293529	PALSHETKAR SANKET ANIL	6	7	4	6
T2163151293530	PATIL SARDAR APPASO	6	7	4	6
T2163151293531	LATWADEKAR AMIT BALASAHEB	8	7	4	6
T2163151293532	KADAM AARATI SARJERAO	14	14	9	9
T2163151293533	VARAPE URMILA HINDURAO	14	14	9	9
T2163151293534	DINDE PRANAVKUMAR TANAJI	12	12	9	9
T2163151293535	KURANE PRASHANT BABASO	8	7	4	6
T2163151293536	SHINDE SAMPADA BHASKAR	8	7	4	6
T2163151293537	BHUNDE PAYAL GOMA	13	13	7	7
T2163151293539	JAGTAP PRUTHVIRAJ SANJAY	10	10	7	6
T2163151293540	BODKE HARSHIL BAPU	8	7	4	6
T2163151293541	PATIL ATHARV SHIVAJI	10	10	4	6
T2163151293542	KAMBLE ABHIJEET EKNATH	9	8	4	6
T2163151293543	MIRAJE SAKSHI MANOHAR	13	12	9	9
T2163151293545	PATIL SURAJ ASHOK	6	6	AB	AB
T2163151293546	NIVADE ROHIT MAHADEV	8	7	4	6
T2163151293547	JADHAV ROHIT MAHENDRA	8	7	4	6
T2163151293548	MANE RITESH ANIL	8	7	4	6
T2163151293549	GURAV SANDIP LALASO	14	13	8	8
T2163151293550	NARUTE OMKAR KRUSHANATH	15	14	10	10
T2163151293551	BHORE POOJA DEEPAK	13	12	8	8

Enrollment Number	Full Name	Continuous Assessment 2 Marks / 15	Continuous Assessment 1 Marks / 15	Practical Marks / 10	Internal Practical Marks / 10
		Template Upload	Template Upload	Template Upload	Template Upload
T2163151293552	PRABHAVALKAR DEEPSHREE DEEPAK	13	12	7	7
T2163151293553	CHAND SONALI DASHARATH	14	13	9	9
T2163151293554	KAPURE SURAJ SHIVAJI	6	7	4	4
T2163151293555	PATIL VISHWAS DILIP	8	8	5	6
T2163151293556	WAREKAR AKASH SUNIL	13	12	9	9
T2163151293557	YEWALE YOGESH VITTHAL	6	6	AB	AB
T2163151293558	JAMBILKAR OMKAR DAGADU	8	7	4	6
T2163151293559	KAMBLE VAIBHAV VASANT	7	7	4	6
T2163151293560	PATIL SAIRAJ MARUTI	13	13	9	9
T2163151293561	POWAR ATUL VILAS	14	14	10	10
T2163151293562	KAMBLE PRANAV SUNIL	8	7	4	6
T2163151293563	SUTAR SURAJ NAMDEV	7	7	4	6
T2163151293565	SHINDE NEHA JAGANNATH	6	6	AB	AB
T2163151293566	BASARE ROHIT MARUTI	7	7	4	4

  
Subject Teacher

Waik y.e.  
(Name and Signature)

  
HOD

(Name and Signature)

Principal/Director

(Name and Signature)

**Sanjeevan Engineering and Technology Institute, Panhala**  
**Department of Automobile Engineering**  
**Final year Automobile Engineering SEM- VIII Academic year 2021-22**  
**Comparative Marks statement**

Sl.No.	Subject	MATERIAL CHARACTERIZATION				Non-Conventional Energy Resources				Grand TOTAL (350)	CGPA	SGPA			
		ETE (60)	CA -(10)	CA -II	Mild Sem	ETE (60)	CA -(10)	CA -II	Mild Sem						
1	Aditya Suresh Patil	42	9	9	18	78	27	8	8	18	61	95	234	8.46	8.14
2	Parikshit Sanjeev Desai	45	9	8	19	81	30	8	7	17	62	98	282	8.86	7.95
3	Varsharani babaso tadavalek	33	10	10	19	72	29	10	10	19	68	92	275	8.72	9.75
4	Yadav vishwajeet dattatray	32	9	9	18	68	21	8	9	18	56	94	211	7.82	7.5
5	Akshata kundlik patil	50	9	9	18	86	31	9	9	18	67	96	271	8.59	9.29
6	Vishal D Patil	28	9	8	18	63	28	7	8	17	60	94	262	8.5	7.52
7	PRITHVIRAJ JADHAV	21	9	9	18	57	20	9	9	18	56	93	221	8.11	7.1
8	Ashutosh ransubhe	26	8	9	17	60	28	8	8	18	62	90	215	8	7.8
9	Abhishek Babasaheb bhosale	51	9	10	19	89	32	9	10	19	70	125	298	9.31	9.57
10	Omkar Ravindra Ravan	48	10	9	18	85	30	10	9	19	68	128	285	9.17	9.57
11	Vivek balaso patil	48	8	8	19	83	29	9	8	18	64	110	256	8.76	8.86
12	Gaurav Jayendra Patil	38	8	8	18	72	28	8	9	17	62	100	248	8.61	7.81
13	Ruturaj babaso jadhav	44	9	8	18	79	26	9	9	18	62	92	205	7.22	8.14
14	Pradip Ghosalkar	29	10	10	19	68	16	10	10	19	55	90	212	8.94	9.38
15	Rushikesh bhikaji tirale	36	9	9	19	73	27	9	9	17	62	94	211	8.51	8.43
16	Shubham Rajendra Shelake	36	8	9	18	71	28	7	8	18	61	93	212	8.52	7.95
17	Yash Devmore	40	8	9	19	76	26	8	7	17	58	98	210	8.42	7.86
18	Sourabh vishnu karande	39	10	8	17	74	25	9	8	18	60	91	205	8.37	8.52
19	Sharad Dinakar Kamble	26	9	8	17	60	28	8	8	16	60	90	200	7.8	7
20	Patil Vaibhav mahadev	27	8	8	17	60	25	8	9	17	59	95	205	8.1	7.5
21	Bhaves Gosavi	37	10	9	18	74	27	9	8	17	61	120	225	8.59	7.24
22	Prithviraj manoj raorane	53	10	10	19	82	26	10	9	18	63	105	217	8.54	9.38
23	Shivtej Ajit patil	53	10	9	19	81	33	8	9	19	69	115	280	9.05	9.29
24	Omkar suresh Rane	41	8	9	17	75	31	8	9	18	66	98	215	8	7.57
25	Khollam Rushikesh Sunil	43	9	9	18	79	30	8	9	17	64	104	235	8.69	7.86
26	Nilesh balasaheb kamble	47	9	10	18	84	29	8	8	19	64	100	230	8.42	8.24

Yogiraj sunil Davang	17	9	9	19	54	18	9	9	19	55	123	232	8.11	8.1
Tushar Dinkar Dhere	46	8	10	18	82	25	9	8	18	60	110	218	8.19	8
Khot Rajnandini Shivaji	43	10	10	19	82	35	10	10	19	74	135	291	9.01	9.86
Pruthviraj Pandurang Patil	37	8	9	18	72	30	8	9	17	64	100	245	8.39	7.57
Shivraj Mohite	35	9	8	17	69	25	7	8	18	59	95	202	7.84	7
Jay Sanjay Jadhav	49	10	10	19	89	34	9	9	19	71	122	275	9.12	9.57
Kadam Akshay	42	10	9	19	80	29	9	8	18	64	105	220	8.28	9.1

<b>Subjectwise Result Analysis</b>	<b>NAME OF SUBJECT</b>	<b>MC</b>	<b>NCER</b>
	No. of Students Appeared	33	33
	No. of Students Pass	33	33
	No. of Students Fail	0	0
	<b>% Result</b>	100	100

<b>Teacherwise Result Analysis</b>	<b>NAME OF SUBJECT</b>	<b>SPJ (MC)</b>	<b>SPN (NCER)</b>
	No. of Students Appeared	33	33
	No. of Students Pass	33	33
	No. of Students Fail	0	0
	<b>% Result</b>	100	100



Class Coordinator



Head of Department  
Automobile Engineering





Hollywood Academy's  
SANJEEVAN ENGINEERING AND TECHNOLOGY INSTITUTE, PANHALA  
DEPARTMENT OF AUTOMOBILE ENGINEERING  
DBATU- Mid Semester Test Semester- VI -2021-22

**Subject: Alternative Fuels for IC Engines**

Date –

Marks & Duration – 20 & 1.30 Hrs

Ques No.	Question	CO	BL	PO	Marks
Q-1 a	Enlist Various Bio fuels. Explain the Biodiesel and Ethanol properties.	CO1	BL1	PO1	05
Q-1 b	Explain alkaline fuel cell with neat labeled diagram.	CO3	BL1	PO6	05
Q-2 a	How hybrid Electric vehicle (HEV) differ from Electric vehicle(EV)? Explain with its layout.	CO3	BL3	PO6	05
Q-2b	What are the challenges in front of electric and hydrogen fuel vehicles	CO3	BL3	PO6	05



Hollywood Academy's  
SANJEEVAN ENGINEERING AND TECHNOLOGY INSTITUTE, PANHALA  
DEPARTMENT OF AUTOMOBILE ENGINEERING  
DBATU- Mid Semester Test Semester- VI -2021-22

**Subject: Alternative Fuels for IC Engines**

Date –

Marks & Duration – 20 & 1.30 Hrs

Ques No.	Question	CO	BL	PO	Marks
Q-1 a	Enlist Various Bio fuels. Explain the Biodiesel and Ethanol properties.	CO1	BL1	PO1	05
Q-1 b	Explain alkaline fuel cell with neat labeled diagram.	CO3	BL1	PO6	05
Q-2 a	How hybrid Electric vehicle (HEV) differ from Electric vehicle(EV)? Explain with its layout.	CO3	BL3	PO6	05
Q-2b	What are the challenges in front of electric and hydrogen fuel vehicles	CO3	BL3	PO6	05

Sl. No.	Enrollment Number	Full Name	Continuous Assessment 2 Marks / 10	Continuous Assessment 1 Marks / 10	Mid Exam Marks / 20	End Exam Marks / 60
			<input type="button" value="Template"/> <input type="button" value="Upload"/>	<input type="button" value="Template"/> <input type="button" value="Upload"/>	<input type="button" value="Template"/> <input type="button" value="Upload"/>	
15	1963151602023	KAMBLE NILESH BALASAHEB	8	9	11	
16	1963151602024	BHAVESH BHAU GOSAVI	9	9	14	
17	1963151602025	KAMBLE SHARAD DINAKAR	8	9	12	
18	1963151602026	PATIL VISHAL DNYANDEO	9	9	12	
19	1963151602027	PATIL SHIVTEJ AJIT	9	8	13	
20	2063151602005	JADHAV RUTURAJ BABASO	9	8	12	
21	51631520181160210002	PATIL AKSHATA KUNDALIK	8	8	14	
22	51631520181160210003	KHOT RAJNANDINI SHIVAJI	9	10	18	
23	51631520181160210005	YADAV VISHWAJEET DATTATRAY	8	9	12	
24	51631520181160210007	TADAVALEKAR VARSHARANI BABASO	9	10	18	
25	51631520181160210008	GHOSALKAR PRADIP SUBHASH	9	9	17	
26	51631520181160210009	AKSHAY RAMDAS KADAM	9	8	12	
27	51631520181160210011	DAVANG YOGIRAJ SUNIL	8	7	13	
28	51631520181160210012	RAORANE PRITHVIRAJ MANOJ	9	9	15	
29	51631520181160210013	PATIL VAIBHAV MAHADEV	8	8	11	
30	51631520181160210024	JADHAV PRITHVIRAJ DADASAHEB	8	8	13	
31	51631520181160210028	RANSUBE ASHUTOSH VIJAY	8	7	11	
32	51631520181160210030	RANE OMKAR SURESH	8	7	11	
33	51631520181160210032	KARANDE SOURABH VISHNU	9	9	12	

Sl. No.	Enrollment Number	Full Name	Continuous Assessment 2 Marks / 10	Continuous Assessment 1 Marks / 10	Mid Exam Marks / 20	End Exam Marks / 60
34	51631520181160211001	PATIL ADITYA SURESH	<input type="button" value="Template"/> <input type="button" value="Upload"/>	<input type="button" value="Template"/> <input type="button" value="Upload"/>	<input type="button" value="Template"/> <input type="button" value="Upload"/>	
			9	9	14	



Subject Teacher

Pisal S.K.

(Name and Signature)



HOD

Pisal S.K.

(Name and Signature)

Principal/Director

(Name and Signature)

# Dr. Babasaheb Ambedkar Technological University

Title  
Exam Season  
Institute  
Course  
Subject  
Exported On

Student Marks  
Winter Semester Examinations 2021  
6315 / Sanjeevan Engineering and Technology Institute, Panhala  
11602 / 2017 / Bachelor of Technology (Automobile Engineering)  
BTMEC704C / 2020 / Finite Element Method  
2022/02/12 11:58:07

Sl. No.	Enrollment Number	Full Name	Continuous Assessment 2 Marks / 10	Continuous Assessment 1 Marks / 10	Mid Exam Marks / 20	End Exam Marks / 60
1	1963151602001	ABHISHEK BABASAHEB BHOSALE	9	10	17	
2	1963151602002	DHERE TUSHAR DINKAR	8	8	11	
3	1963151602003	SHELAKHE SHUBHAM RAJENDRA	9	8	13	
4	1963151602004	PATIL PRUTHVIRAJ PANDURANG	8	7	12	
5	1963151602005	PARIKSHIT SANJEEV DESAI	9	9	16	
6	1963151602006	OMKAR RAVAN	9	9	13	
7	1963151602007	VIVEK BALASO PATIL	9	9	14	
8	1963151602013	SHIVRAJ VIJAY MOHITE	8	7	13	
9	1963151602014	TIRALE RUSHIKESH BHIKAJI	9	8	11	
10	1963151602016	PATIL GAURAV JAYENDRA	9	8	13	
11	1963151602017	SURVE SAHIL SANTOSH	8	7	11	
12	1963151602018	KHOLLAM RUSHIKESH SUNIL	8	8	15	
13	1963151602019	DEVMORE YASH JAYKUMAR	8	9	12	
14	1963151602022	JADHAVMITHARI JAY SANJAY	9	9	14	